



**Jindal Vidya Mandir, JSW Hill Side Township**  
**Periodic Test-I 2024-25**  
**Set-A**

**Class: I/ Sec: \_\_\_\_\_**

**Sub: English**

**Name: \_\_\_\_\_**

**Invigilator's Signature: \_\_\_\_\_**

**Max Marks: 20**

**Duration: 1Hr**

**Roll no: \_\_\_\_\_**

**Date: \_\_\_\_\_**

**General Instructions:**

- This paper consists of 4 pages and 8 main questions.
- All the questions are compulsory.


**Section: A (Reading)**

**I. Read the passage and answer the following questions.**

**3X1=3**

**I see a bear. It is very big. It is walking slowly. It has a short tail.**

**It is like a big pillow. Its color is dark brown.**



**A. Choose the correct answer and complete the sentences.**

**1. I see a \_\_\_\_\_.**

**a. tiger**

**b. bear**

**2. It is walking very \_\_\_\_\_.**

**a. slowly**

**b. fastly**

**3. Its color is \_\_\_\_\_.**


**a. black**

**b. dark brown**

## Section- B (Writing)

II. Look at the picture. Write any 6 nouns you see in the picture.

6X½ =3



1. \_\_\_\_\_
2. \_\_\_\_\_
3. \_\_\_\_\_
4. \_\_\_\_\_
5. \_\_\_\_\_
6. \_\_\_\_\_

## Section – C (Grammar)

III. Fill in the blanks with the correct nouns. Use the words given in the help box.

4X½ =2

lion, dosa , JVM HST, rainbow

1. The name of my school is \_\_\_\_\_.
2. The \_\_\_\_\_ is the king of the jungle.
3. We saw a beautiful \_\_\_\_\_ in the sky.
4. I love to eat \_\_\_\_\_ for breakfast.

IV. Color the box if the word is a noun.

6X½ =3

cold	eat	ball
mango	school	dance
speak	happy	hot
door	book	friend

V. Fill in the missing spaces in the table given below with common nouns and proper nouns.

4X½ =2

	Common Nouns	Proper Nouns
1.	friend	
2.		January
3.	subject	
4.		Diwali

Section- D (Literature)

VI. Answer the following questions.

2X1=2

Q1. How old is Mita?

Ans. \_\_\_\_\_  
\_\_\_\_\_

Q2. What is Manu's father name?

Ans. \_\_\_\_\_  
\_\_\_\_\_

VII. Complete these sentences.

2X1=2

1. Manu's father works in \_\_\_\_\_ school.

2. Manu's pet name is \_\_\_\_\_.

VIII. Read the poem and answer the following questions.

3X1=3

There's no one in

This whole wide world

Exactly just like me.

I am me and

You are you,

We're special,

Don't you see?



A. Tick the right options to complete these sentences.

1. In this world there is \_\_\_\_\_.

a. no one exactly like me

b. someone who is like me

2. We're \_\_\_\_\_.

a. happy

b. special

3. The name of the above poem is \_\_\_\_\_.

a. All of me

b. My body





Jindal Vidya Mandir, JSW Hill Side Township

Periodic Test – I (2024-25)

Class/Sec : I/

Set -A

Max. Marks : 20

Subject : Kannada

Duration: 1Hr

Name : \_\_\_\_\_

Roll No. : \_\_\_\_\_

Invigilator's Sign : \_\_\_\_\_

Date : \_\_\_\_\_

ಸೂಚನೆಗಳು: \*ಪತ್ರಿಕೆಯು A ಮತ್ತು B ಎಂಬ ಎರಡು ಭಾಗಗಳನ್ನು ಒಳಗೊಂಡಿರುತ್ತದೆ.

\*ಪ್ರಶ್ನೆ ಪತ್ರಿಕೆಯಲ್ಲಿ ಒಟ್ಟು 6 ಮುಖ್ಯ ಪ್ರಶ್ನೆಗಳು ಇರುತ್ತವೆ ಮತ್ತು 2 ಪುಟಗಳನ್ನು ಹೊಂದಿದೆ.

\*ಪ್ರತಿಯೊಂದು ಪ್ರಶ್ನೆಗಳ ಸೂಚನೆಗಳನ್ನು ಸರಿಯಾಗಿ ಓದಿಕೊಂಡು ಉತ್ತರಿಸಿ.

ಭಾಗ - A ( 10 ಅಂಕಗಳು)

(ಬಹು ಆಯ್ಕೆ ಪ್ರಶ್ನೆ ಪಠ್ಯಗಳ ಅಧ್ಯಯನ)

I. ಈ ಕೆಳಗಿನ ಖಾಲಿ ಬಿಟ್ಟಿರುವ ಸ್ಥಳದಲ್ಲಿ ಸೂಕ್ತ ಅಕ್ಷರವನ್ನು ಆರಿಸಿ ಬರೆಯಿರಿ.

3x1=3 M

1. ಅರ\_\_\_\_ (ರ, ಸ, ದ)

2. ಚ\_\_\_\_ಚ (ಡ, ಪ, ಮ)

3. \_\_\_\_ಟ (ತ, ಆ, ಕ)

II. ಈ ಕೆಳಗೆ ಕೊಟ್ಟಿರುವ ಚಿತ್ರಗಳನ್ನು ಗುರುತಿಸಿ, ಪದದೊಂದಿಗೆ ಹೊಂದಿಸಿ ಬರೆಯಿರಿ.

3x1=3 M

1.



ಧಣಧಣ ( )

2.



ಜನ ( )

3.



ಹಗ್ಗ ( )

(ಅನ್ವಯಿಕ ವ್ಯಾಕರಣ)

III. ಈ ಕೆಳಗೆ ಖಾಲಿ ಬಿಟ್ಟಿರುವ ಸ್ಥಳದಲ್ಲಿ ಸೂಕ್ತ ಪದವನ್ನು ಆರಿಸಿ ಬರೆಯಿರಿ.

4x1=4 M

1. ಕನ್ನಡ ವರ್ಣಮಾಲೆಯಲ್ಲಿ \_\_\_\_\_ ಅಕ್ಷರಗಳಿವೆ.  
( 35, 29, 49, 53)
2. ಒತ್ತಕ್ಷರಗಳಲ್ಲಿ \_\_\_\_\_ ವಿಧಗಳಿವೆ.  
(3, 1, 2, 4)
3. 'ತಮ್ಮ' ಇದು \_\_\_\_\_ ಒತ್ತಕ್ಷರ ಪದ.  
(ಸಜಾತಿ, ವಿಜಾತಿ, ಪರಜಾತಿ, ಸುಜಾತಿ)
4. 'ಕಷ್ಟ' ಇದು \_\_\_\_\_ ಒತ್ತಕ್ಷರ ಪದ.  
(ಸಜಾತಿ, ವಿಜಾತಿ, ಪರಜಾತಿ, ಸುಜಾತಿ)

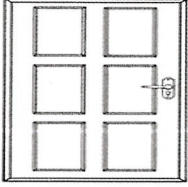
ಭಾಗ-B ( 10 ಅಂಕಗಳು)

(ಬರವಣಿಗೆ ಕೌಶಲ್ಯ)

IV. ಈ ಕೆಳಗಿನ ಚಿತ್ರವನ್ನು ಗುರುತಿಸಿ, ಪದ ಬರೆಯಿರಿ.

4x1=4 M


1.



2.



3.



4.



V. ಈ ಕೆಳಗೆ ಕೊಟ್ಟಿರುವ ಗುಣಿತಾಕ್ಷರಗಳನ್ನು ಪೂರ್ಣಗೊಳಿಸಿರಿ.

2x2=4 M

1. ಖ, \_\_\_\_\_, ಖಿ, ಖೀ, \_\_\_\_\_, ಖೂ, \_\_\_\_\_, ಖೆ, ಖೇ, \_\_\_\_\_, ಖೊ, \_\_\_\_\_, ಖೌ, \_\_\_\_\_, ಖಃ
2. ಜ, ಜಾ, \_\_\_\_\_, ಜೀ, ಜು, \_\_\_\_\_, ಜ್ಯ, ಜೆ, \_\_\_\_\_, ಜೈ, \_\_\_\_\_, ಜೋ, \_\_\_\_\_, ಜಂ \_\_\_\_\_

VI. ಈ ಕೆಳಗೆ ಕೊಟ್ಟಿರುವ ಅಕ್ಷರದಿಂದ ಆರಂಭವಾಗುವ 2 ಸರಳ ಪದಗಳನ್ನು ಬರೆಯಿರಿ.

1x2=2 M

1. ಉ - \_\_\_\_\_, \_\_\_\_\_

ಅಥವಾ

ಈ ಕೆಳಗೆ ಖಾಲಿ ಬಿಟ್ಟಿರುವ ಸ್ಥಳಗಳನ್ನು ಪೂರ್ಣಗೊಳಿಸಿರಿ.

ಯ, \_\_\_\_\_, \_\_\_\_\_, ವ, ಶ, \_\_\_\_\_, ಸ, \_\_\_\_\_, ಳ



**Jindal Vidya Mandir, JSW Hill Side Township**  
**Periodic Test-I (2024-25)**

Set - A

Class: I / Sec: \_\_\_\_\_

Sub: Hindi (II Lang)

Name: \_\_\_\_\_

Invigilator's Signature: \_\_\_\_\_

Duration: 1Hr

Max Marks: 20

Roll no: \_\_\_\_\_

Date: \_\_\_\_\_

**General Instructions:**

- सभी प्रश्नों के उत्तर देना अनिवार्य है।
- कुल प्रश्नों की संख्या 7 है।

प्रश्न-1. नीचे दिए गए वर्ण का अगला व पिछला वर्ण लिखिए-

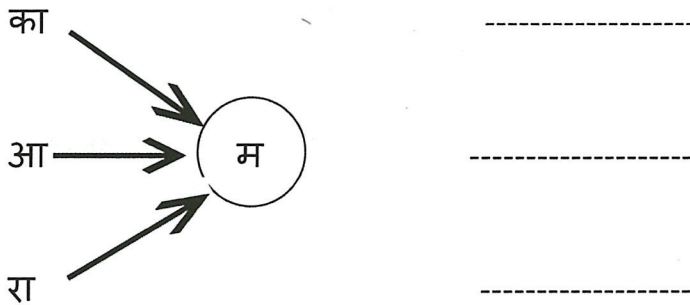
2x1=2

----- भ -----

----- ज -----

प्रश्न 2. दिए गए वर्णों को जोड़कर नए शब्द बनाइए-

3x1=3



प्रश्न 3. उचित वर्ण छाँटकर शब्द पूरे कीजिए-


2x1=2

क) कसर----- ( त,थ )

ख) गग----- ( म,न )

प्रश्न 4. चित्र देखकर सही शब्द पर गोला लगाइए-

4x1=4

क)  मछली आम गाजर

ख)  सितार तबला नाल

ग)  आसन पायल गिलास

घ)  माला जाला इमली

प्रश्न 5. आ व ई की मात्रा के एक-एक शब्द लिखिए-

2x1=2

आ

ई

-----

-----



प्रश्न 6. चित्र देखकर नाम लिखिए -

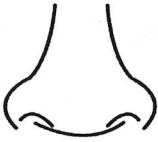
5x1=5



-----



-----



-----




-----



-----

प्रश्न 7. दिए गए चित्र में उचित रंग भरकर नाम लिखिए-

1x2=2



-----

\*\*\*\*\*



**Jindal Vidya Mandir, JSW Hill Side Township**

**Periodic Test – I (2024-25)**

**Set A**

**Class I/Sec:\_\_\_\_\_**

**Duration:1 Hour**

**Subject: Mathematics**

**Max Marks: 20**

**Name:\_\_\_\_\_**

**Roll No:\_\_\_\_\_**

**Invigilator's signature:\_\_\_\_\_**

**Date: \_\_\_\_\_**

---

**General Instructions:**

- i) This question paper contains 3 main questions in 3 pages.**
  - ii) All questions are compulsory.**
- 

**Section A**

**I. Choose the correct answer.**

**5X1M=5M**

1)  $15 + 4$  is \_\_\_\_\_

- A) 19      B) 5      C) 4      D) 40

2) What comes just between 18 and 20? \_\_\_\_\_

- A) 17      B) 20      C) 19      D) 9

3) What comes just before 11 ? \_\_\_\_\_

- A) 12      B) 13      C) 10      D) 11

4) Number name of 14 is \_\_\_\_\_

- A) One      B) Four      C) For      D) Fourteen

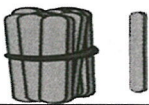
5) Choose the correct number shown by the following abacus. \_\_\_\_\_

- A) 21      B) 02      C) 11      D) 12



## II. Match the following.

5X1M=5M

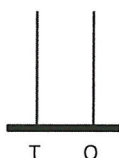
Column A			Column B	Answers
1.	After 49	a.	20	
2.		b.	16	
3.	2 X 8	c.	50	
4.	1 more than 15 is	d.	13	
5.	11+9	e.	11	

## PART-B

### III. Do as directed.

4X1M=4M

1) Represent 26 on the abacus and write its number name.




2) Start from 35 and move backwards.

				35
--	--	--	--	----

3) Add the given numbers by using number strip.

6 + 3 = 

0	1	2	3	4	5	6	7	8	9	10
---	---	---	---	---	---	---	---	---	---	----

4) Draw the balls and find the sum.

$$3 + 0 + 1 = \underline{\quad}$$

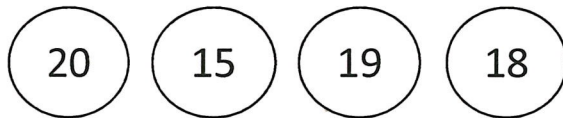
5) Add.

3X2M =6M

a)  $\begin{array}{r} 12 \\ + 3 \\ \hline \hline \end{array}$

b)  $\begin{array}{r} 11 \\ + 9 \\ \hline \hline \end{array}$

6) Arrange the numbers from the smallest to the biggest.



--	--	--	--

7) In a class there are 18 girls and 11 boys, how many students are there altogether in the class?

---

---

---

---







**Jindal Vidya Mandir, JSW Hill Side Township**  
**Periodic Test-I (2024-25)**  
**SET-A**

Class: I / Sec: \_\_\_\_\_

Max Marks: 20

Sub: EVS

Duration: 1Hr

Name: \_\_\_\_\_

Roll No: \_\_\_\_\_

Date: \_\_\_\_\_

Invigilator's Signature: \_\_\_\_\_

**General Instructions:**

- This question paper has 3 pages and 14 questions.
- It consists of two sections A and B. Section A has objective type questions and section B has subjective type questions.
- All the questions are compulsory.

**Section-A**

**I. Choose the correct options.**

**5X1=5M**

1. Favourite things are the things which we \_\_\_\_\_.

- a. like      b. dislike      c. unlike      d. do not do

2. Which of the following parts of our body helps us to taste food?

- a. hand      b. ears      c. knee      d. tongue

3. We should drink \_\_\_\_\_ water daily.

- a. plenty of      b. no      c. less      d. little

4. Whose name will be there in your ID card?

- a. Your name      b. sister's name      c. brother's name      d. uncle's name

5. Germs grow in \_\_\_\_\_ places

- a. clean      b. dirty      c. hygienic      d. neat

**II. Match the following.**

**5X1=5M**

- |                 |                  |
|-----------------|------------------|
| 6. sense organ  | a. fruits        |
| 7. legs         | b. outdoor games |
| 8. healthy food | c. walk          |
| 9. exercise     | d. twice a day   |
| 10. brush       | e. eyes          |

**Section-B**

**III. Answer the following questions in two sentences.**

**3X2=6M**

11. Write any two habits to stay clean?

---

---

---

---

12. Write any two things we do with our hands?

---

---

---

---

13. What is an ID cards?

---

---

---

---

14. Draw and colour any four sense organs and name them. **2x2= 4M**