



Jindal Vidya Mandir, JSW Hill Side Township
Weekly Test-1(2024-25)

Class: I/ Sec: _____

Sub: English

Name: _____

Invigilator's Signature: _____

Duration: 45mins

Max Marks: 20

Roll no: _____

Date: 16/04/2024


General Instructions:

- This paper consists of 3 pages.
- All the questions are compulsory.

I. Circle the word that does not rhyme with the other words in each group. 5X1=5

1. a. bat b. man c. fat
2. a. sail b. tail c. root
3. a. pet b. ball c. mall
4. a. cot b. bag c. rag
5. a. put b. foot c. coat

II. Look at the picture and tick (✓) the word that matches with the picture. 4X1=4




1.

a. ship

☐

b. sheep

☐


3.

a. rose

☐

b. pot


☐



a. bell

☐

b. belt

☐


a. cup

☐

b. cap

☐

III. Circle the correct opposite words for the given words.

5X1=5

- | | | |
|------------|-------|-------|
| 1. hot - | cold | tall |
| 2. long - | short | full |
| 3. white - | far | black |
| 4. young- | big | old |
| 5. sad- | warm | happy |

IV. Write the missing alphabets.

1X1=1

a _____ c d _____ f _____ h _____

j k l _____ n _____ p _____ r

s _____ u v _____ x _____ z

V. Match the words on the left with the picture on the right.

5X1=5

1. car



2. moon



3. bus




4. ball



5. dog





72

Jindal Vidya Mandir, JSW Hill Side Township
Weekly Test – 2 (2024-25)

Class : I/ Sec : _____

Subject : Kannada

Name : _____

Invigilator's Sign : _____

Duration: 45 minutes

Max. Marks : 20

Roll No. : _____

Date : 14/06/2024

ಸೂಚನೆಗಳು :

*ಈ ಕೆಳಗಿನ ಪ್ರಶ್ನೆಪತ್ರಿಕೆಯು ಒಟ್ಟು 4 ಮುಖ್ಯ ಪ್ರಶ್ನೆಗಳಿಂದ ಕೂಡಿದ್ದು, 2 ಪುಟಗಳನ್ನು ಹೊಂದಿದೆ.

*ಪ್ರತಿಯೊಂದು ಪ್ರಶ್ನೆಗಳ ಸೂಚನೆಗಳನ್ನು ಸರಿಯಾಗಿ ಓದಿಕೊಂಡು ಉತ್ತರಿಸಿ.

I. ಈ ಕೆಳಗಿನ ಖಾಲಿ ಬಿಟ್ಟ ಸ್ಥಳದಲ್ಲಿ ಸೂಕ್ತ ಅಕ್ಷರವನ್ನು ಆರಿಸಿ ಬರೆಯಿರಿ.

5X1=5

1. _____ ಸರ (ಸ, ದ, ಗ)
2. ಬಸ _____ (ಜ, ವ, ಅ)
3. ನ _____ ನ (ಚ, ಪ, ಯ)
4. ಕ _____ ಲ (ಗ, ಈ ಮ)
5. ಆ _____ (ಟ, ದ, ಪ)

II. ಈ ಕೆಳಗಿನ ಅಕ್ಷರಗಳ ಮುಂದಿನ ಅಕ್ಷರವನ್ನು ಬರೆಯಿರಿ.

5X1=5

1. ಡ _____
2. ಯ _____
3. ಉ _____
4. ಓ _____
5. ಫ _____

III. ಈ ಕೆಳಗಿನ ಅಕ್ಷರಗಳ ಹಿಂದಿನ ಅಕ್ಷರವನ್ನು ಬರೆಯಿರಿ.

5X1=5

1. _____ ಫ
2. _____ ಧ
3. _____ ಜ
4. _____ ಸ
5. _____ ಈ

IV. ಈ ಕೆಳಗಿನ ಅಕ್ಷರಗಳನ್ನು ಸರಿಯಾದ ಪದದೊಂದಿಗೆ ಹೊಂದಿಸಿ
ಬರೆಯಿರಿ.

5X1=5

1. ಏ ಕಡಗ ()
2. ಸ ಏತ ()
3. ಕ ಜನ ()
4. ಮ ಸರ ()
5. ಜ ಮರ ()



Jindal Vidya Mandir, JSW Hill Side Township

Weekly Test 2 (2024-2025)

Class: I / Sec: _____

Subject: Hindi

Date: _____

Name: _____

Duration: 45 min

Marks: 20M

Invigilator's sign: _____

आवश्यक निर्देश : 1) सभी प्रश्नों को हल करना अनिवार्य है।

2) प्रश्नों की कुल संख्या 4 है।

प्रश्न 1 सही वर्ण लिखकर रिक्त स्थान भरिए -

5X1=5M

क ----- ग -----

च ----- ज झ-----

----- ठ ----- ढ-----

प ----- ब भ-----

प्रश्न 2 वर्णों को जोड़कर शब्द लिखिए -

5X1=5M

1) म + ट + र -----

2) न + र + म -----

3) अ + ज + ग + र -----

4) फ़ + स + ल -----

5) न + म + क -----

प्रश्न 3 नीचे दिए गए चित्रों को देखकर सही वर्ण पर गोला लगाइए-

5×1=5M

1)



ज

घ

2)



फ

त

3)



ट

र

4)



क

अ

5)



म

क

प्रश्न 4 दिए गए स्वर का अगला स्वर लिखो।

5X1=5M

1) अ _____

2) इ _____

3) उ _____

4) ए _____

5) आ _____



Jindal Vidya Mandir, JSW Hill Side Township
Weekly Test-3 (2024-25)

Class: I / Sec: _____

Max Marks: 20

Sub: EVS

Duration: 45 minutes

Name: _____

Roll no: _____

Invigilator's Signature: _____

Date: _____

General Instructions:

- This question paper consists of 2 pages and 3 questions.
- All the questions are compulsory.

I. Fill in the blanks from the help box.

5X1=5M

legs	smell	eat	identity card	favourite things
------	-------	-----	---------------	------------------

1. Mouth helps us to _____ food items.
2. A card that helps others to know you is called your _____.
3. I use my _____ to walk.
4. The things we like are called our _____.
5. Nose helps us to _____ things.

II. Match the following.

5X1=5M

1. jump	a. fruit	()
2. hear	b. sense organs	()
3. Skin, tongue	c. eye	()
4. orange	d. leg	()
5. see	e. ear	()

III. Answer the following questions.

3X2=6M

1. How old are you?

Ans. _____

2. Name your favourite food item.

Ans. _____

3. How do our hands help us?

Ans. _____

4. Draw any two sense organs.

2X2=4M

--	--

Class I/Sec:_____

Max Marks: 20

Subject: Mathematics

Duration: 45 minutes

Name:_____

Roll No:_____

Invigilator's signature:_____

Date: _____

General Instructions:

i) This question paper contains 3 main questions in 2 pages.

ii) All questions are compulsory.

I. Choose the correct answer.

5X1M=5M

1) $5 + 4$ is _____

- A) 90 B) 9 C) 5 D) 4

2) Number name of 15 is.

- A) Five B) Fifteen C) Four D) Fifty

3) What comes just before 20 is _____.

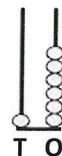
- A) 9 B) 90 C) 99 D) 19

4) 6 more than 2 is _____.

- A) 18 B) 8 C) 80 D) 88


5) Choose the correct number shown by the following abaci . _____

- A) 61 B) 06 C) 16 D) 60



II. Match the following.

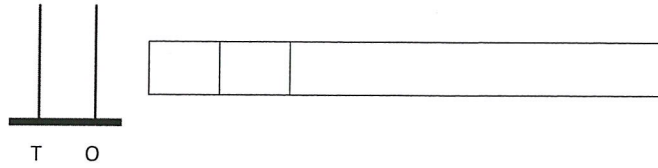
5X1M=5M

	Column A		Column B	Answer
1.	After 19	a.	12	
2.		b.	10	
3.	3×5	c.	20	
4.	1 less than 13 is	d.	14	
5.	$1 + 9$	e.	15	

III. Do as directed.

5X2M=10M

1) Represent 18 on the abacus and write its number name.



2) Arrange the following numbers from biggest to smallest.

a. 17, 1, 15, 12 _____

b. 0, 8, 2, 5 _____

3) Add the given numbers by using number strip.

$$4 + 5 = \begin{array}{|c|c|} \hline & \\ \hline \end{array} \quad \begin{array}{|c|c|c|c|c|c|c|c|c|c|} \hline 0 & 1 & 2 & 3 & 4 & 5 & 6 & 7 & 8 & 9 & 10 \\ \hline \end{array}$$

4) Add.

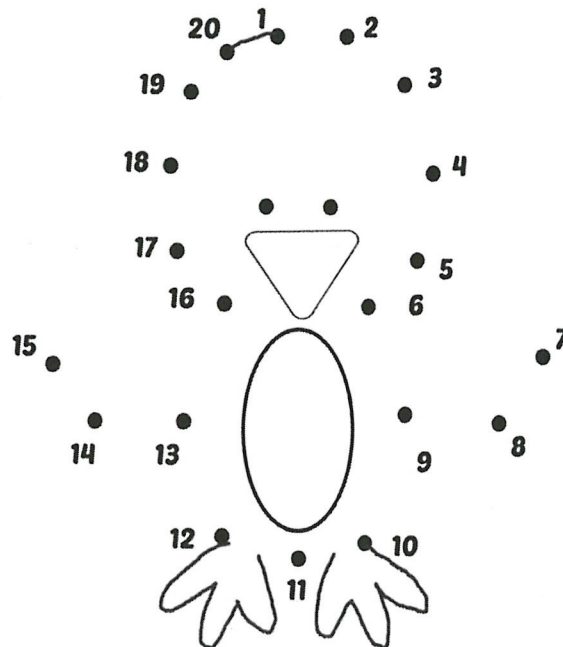
a) 6

b) $5 + 3 = \begin{array}{|c|c|} \hline & \\ \hline \end{array}$

$$+ 3$$

--	--

5) Join the dots from 1 to 20 to find the hidden animal and colour the picture.



Jindal Vidya Mandir, Hill Side Township
Weekly Test-5 (2024-25)

Class: I/ Sec: _____

Sub: English

Name: _____

Invigilator's Signature: _____

Duration: 45mins.

Max Marks: 20

Roll no: _____

Date: 19/07/2024

General Instructions:

- This question paper consists of 2 pages and 3 questions.
- All the questions are compulsory.

I. Read the passage and answer the questions given below.

 $1 \times 3 = 3$

This is a beach. The weather is hot. Tom is making sandcastles. Sam is boating in the beach. A lady is surfing in the sea. Ben is playing with his dog, Bruno.

A. Choose the correct answer and fill in the blanks.

- The weather at the beach is _____.
a. cold b. hot
- Tom is making a _____.
a. sandcastle b. cake
- Ben is playing with his dog, _____.
a. pluto b. Bruno



II. Answer the following questions in one word.

2X2=4M

- ### 1. Why do the children not want to play with Sunny?

Ans: _____

2. What does Sunny do in the end?

Ans: _____


III. Write "T" for "True" or "F" for "False" for the given below:

1X5=5M

1. There were three swings in the park. _____
2. Sunny pushed Manu off the swing. _____
3. Manu hurt his leg because of Sunny. _____
4. Sunny listened to Amina. _____
5. Manu and Amina loved to play on the seesaw. _____

IV. Look at the picture and write 8 nouns you see in the picture.

1X8=8M



1. _____
3. _____
5. _____
7. _____

2. _____
4. _____
6. _____
8. _____



Jindal Vidya Mandir, JSW Hill Side Township
Weekly Test-6 (2024-2025)

Class:I / Sec _____

Subject:Kannada(III Lang)

Name: _____

Invigilator's sign: _____

Max.Marks:20

Duration: 45mins.

Roll.No _____

Date: _____

ಸೂಚನೆಗಳು:

- ಈ ಪ್ರಶ್ನೆ ಪತ್ರಿಕೆಯು 2 ಪುಟಗಳನ್ನು ಹೊಂದಿದೆ.(This question paper contains 2 pages)
- ಎಲ್ಲಾ ಪ್ರಶ್ನೆಗಳು ಕಡ್ಡಾಯವಾಗಿವೆ. (All questions are compulsory)

I. ಈ ಕೆಳಗಿನ ಚಿತ್ರಗಳನ್ನು ಕೊಟ್ಟಿರುವ ಅಕ್ಷರಗಳೊಂದಿಗೆ ಹೊಂದಿಸಿಬರೆಯಿರಿ. 5X1=5
(Match the pictures with the given letters)

1.



i) ಆ

2.



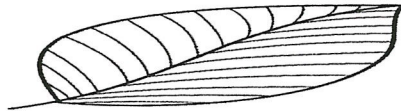
ii) ಅ

3.



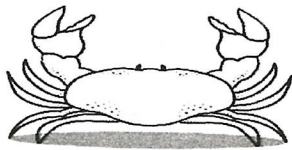
iii) ಏ

4.



iv) ಎ

5.



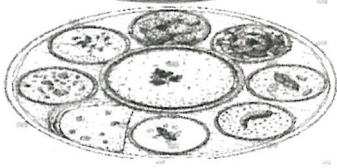
v) ಈ

II. ಈ ಕೆಳಗಿನ ಚಿತ್ರಗಳ ಮೊದಲ ಅಕ್ಷರವನ್ನು ಬರೆಯಿರಿ.
(Write first letter of these picture)

5X1=5

(ಏ, ಅ, ಇ, ಉ, ಊ)

1.



2.



3.



4.



5.



III. ಈ ಕೆಳಗಿನ ಅಕ್ಷರಗಳ ಹಿಂದಿನ ಅಕ್ಷರವನ್ನು ಬರೆಯಿರಿ.

5X1=5

(Write the letter that comes before the given letter)

1. _____ ಆ

2. _____ ಈ

3. _____ ಊ

4. _____ ಋ

5. _____ ಏ

IV. ಕೊಟ್ಟಿರುವ ಅಕ್ಷರಗಳನ್ನು ಅವುಗಳಿಂದ ಆರಂಭವಾಗುವ ಮೊದಲ ಅಕ್ಷರದೊಂದಿಗೆ ಹೊಂದಿಸಿ ಬರೆಯಿರಿ.

5X1=5

(Match the words that begin with the given letters)

1. ಇ

i) ಆಟ ()

2. ಈ

ii) ಇರುವೆ ()

3. ಆ

iii) ಏಣಿ ()

4. ಋ

iv) ಈಚಲ ()

5. ಏ

v) ಋಷಿ ()



Jindal Vidya Mandir,JSW Hill Side Township

Weekly test-6 (2024-25)

Class/sec : I ____

Subject:Hindi (Ill Lang.)

Student Name:_____

Date:_____

Max marks: 20

Duration:45 min.

Roll No._____

प्रश्न 1.स्वर से अगला स्वर लिखो- (Write the next letter)

5x1=5

अ ----- ई -----

ऋ ----- उ----- आ -----

प्रश्न 2. -दिए गए वर्ण को पहचान कर एक समान वर्ण में गोला लगाइए -
(Circle the same letter)

5×1=5

ए - ऊ ए ई

आ - उ आ ए

ऊ - अ ऋ उ

ऋ - अ आ ऋ

ऐ - इ उ ऐ

प्रश्न 3 .दिए गए चित्रों का पहला वर्ण लिखो (write the first letter name of the picture)

5x1=5











प्रश्न 4.दिए गए वर्णों को सही क्रम में लिखो (Arrange the letter in order)

अ उ आ ऋ इ आ ई ऐ ऊ ए

5x1=5

--



Jindal Vidya Mandir, JSW Hill Side Township
Weekly Test-7 (2024-25)

Class: I / Sec: _____

Max Marks: 20

Sub: EVS

Duration: 45 minutes

Name: _____

Roll no: _____

Invigilator's Signature: _____

Date: 02/08/2024

General Instructions:

- This question paper consists of 2 pages and 4 questions.
- All the questions are compulsory.

I. Fill in the blanks from the help box.

5X1=5M

care	matchsticks	grandparents	injury	footpath
------	-------------	--------------	--------	----------

1. Parents of our parents are our _____.
2. Safety means staying away from _____.
3. Always walk on the _____.
4. People living in a family take _____ of each other.
5. Do not try to light _____.

II. Match the following.

5X1=5M

- | | | |
|-------------------|--------------------------|--------|
| 1. sharp object | a. child with one parent | () |
| 2. zebra crossing | b. wet hand | () |
| 3. cousin | c. knife | () |
| 4. single parent | d. to cross road | () |
| 5. shock | e. aunt's child | () |

III. Answer the following questions.

3X2=6M

1. Write any one way in which we can stay safe at home?

Ans. _____

2. Who are our siblings?


Ans. _____

3. What is a large family?

Ans. _____

IV. Draw the traffic signal and label it.

2X2=4M





Jindal Vidya Mandir, JSW Hill side township
Weekly test – 8 (2024-25)

Class I/Sec : ____

Subject: Mathematics

Name : _____

Invigilator's signature : _____

Duration: 45 min

Max. Marks: 20

Roll No: ____

Date: _____

General Instructions: This question paper contains 7 main questions in 2 pages.


All questions are compulsory.

Section A

1. Subtract by crossing out.

2X1M=2M

a) $6 - 4 =$ ____



b) $9 - 0 =$ ____



2. Subtract by drawing circles and crossing out.

2X2M=4M

a. T O

8

– 5

b. T O


6


– 4

3. Subtract by counting backwards.

2M

a) $12 - 7 = \underline{\quad}$

start from  and move backward



4. Subtract by counting backwards.

2X1.5M=3M

a) T O

1 4

- 7

--

b) T O

1 6

- 8

--

5. Subtract using properties of subtraction.

3X1M=3M

a) $8 - 1 = \underline{\quad}$

b) $6 - \underline{\quad} = 0$

c) $\underline{\quad} - 2 = 0$

6. Write the subtraction statement for the given picture.

3M



Subtraction statement = $\underline{\quad} - \underline{\quad} = \underline{\quad}$

7. There are 17 children going to school by bus. 4 children got down.

3M

How many children were left in the bus?

Sol-

T O

Ans - $\underline{\quad} - \underline{\quad} = \underline{\quad}$



Jindal Vidya Mandir, JSW Hill Side Township
Weekly Test-9 (2024-25)

Class: I/ Sec: _____

Sub: GK

Name: _____

Invigilator's Signature: _____

Duration: 45mins

Max Marks: 20

Roll no: _____

Date: 23/08/2024

General Instructions:

- This paper consists of 4 pages and 6 main questions.
- All the questions are compulsory.

I. Identify the festivals being celebrated and fill in the blanks.

3X1=3




1.

It is called the festival of _____.



2.

It is celebrated on _____.



3.

It is known as the festival of _____.

II. Fill in the blanks and complete the sentences.

4X1=4

1. Our national animal is _____.

2. Our national fruit is _____.

3. Our national tree is _____.

4. Our national river is _____.

III. Identify the game and unscramble the letters and write the correct names of sports.

3X1=3



(LOBTAFOL) _____




(TIECCKR) _____



(OKYECH) _____

IV. Identify these houses and write their names using the help box.

4X1=4





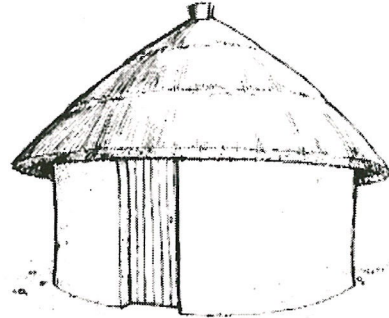
Helpbox

Hut

Igloo

Houseboat

Castle



V. Tick the correct option.

3X1=3

1. I treat you when you are sick. Who am I?

a. Barber ☐ b. Doctor ☐ c. Gardener ☐

2. I stitch clothes for you. Who am I?

a. Nurse ☐ b. Cobbler ☐ c. Tailor ☐

3. I deliver your letters. Who am I?

a. Postman ☐ b. Soldier ☐ c. Teacher ☐

VI. Write any one mode of transport under each column.

3X1=3

Land Transport	Water Transport	Air Transport



Jindal Vidya Mandir, JSW Hill Side Township

Weekly Test- 10 (2024-25)

Class : I/ Sec : _____

Duration: 45Minutes

Subject : Kannada(III Lang)

Max. Marks :20

Name : _____

Roll No. : _____

Invigilator's Sign : _____

Date : _____

General Instructions: *This question paper contains 2 pages and 4 mains.

*All questions are compulsory.

I. ಈ ಕೆಳಗೆ ಕೊಟ್ಟಿರುವ ಸ್ಥಳಗಳಲ್ಲಿ ಸರಿಯಾದ ಅಕ್ಷರಗಳನ್ನು ತುಂಬಿರಿ.
(Choose the correct letter and fill in the blanks)

5X1=5

(ಖು, ಔ, ಈ, ಐ, ಊ)

ಅ	ಆ	ಇ		ಉ			ಎ	ಐ	
---	---	---	--	---	--	--	---	---	--

ಒ	ಓ		ಅಂ	ಅಃ
---	---	--	----	----

II. ಈ ಕೆಳಗೆ ಕೊಟ್ಟಿರುವ ಅಕ್ಷರಗಳ ಹಿಂದಿನ ಅಕ್ಷರಗಳನ್ನು ಬರೆಯಿರಿ.

5X1=5

(Write the before letters for the given letters)

(ಕ, ಘ, ರು, ಚ, ಖ)

1. _____ ಖ

2. _____ ಛ

3. _____ ಇ

4. _____ ಗ

5. _____ ಜ

III. ಈ ಕೆಳಗೆ ಕೊಟ್ಟಿರುವ ಅಕ್ಷರಗಳನ್ನು ಅನುಕ್ರಮವಾಗಿ ಬರೆಯಿರಿ.

5X1=5

(Rearrange the letter in order)



IV ಈ ಕೆಳಗೆ ಕೊಟ್ಟಿರುವ ಚಿತ್ರಗಳನ್ನು ಗಮನಿಸಿ, ಅವುಗಳ ಮೊದಲ ಅಕ್ಷರಗಳನ್ನು ಬರೆಯಿರಿ.

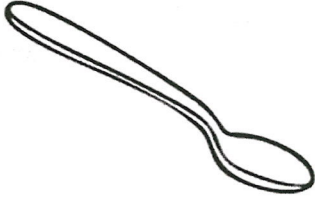
(Observe the following pictures, and write first letter of the picture) 5x1=5

(ಔ, ಕ, ಘ, ಚ, ಗ)


1.




2.



3.



4.



5.



Weekly test- 10 (2024-25)

Class/sec : I ____

Subject:Hindi (III Lang.)

Student Name:_____

Date:_____

Max marks- 20

Duration-45 min.

Roll No._____

प्रश्न 1.स्वर का अगला स्वर लिखो- (Write the next letter)

4x1=4

अ -----

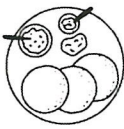
ई -----

ऋ -----

उ-----

प्रश्न 2 .दिए गए चित्रों का पहला वर्ण लिखो- (write the first letter of the picture)

6x1=6









1



प्रश्न 3. सही स्वर को गोला लगाओ- (Circle the same letter)

5x1=5

उ - ऊ ए उ

ए - उ आ ए

औ - अ औ ऊ

अं - अ आ अं

इ - इ उ ऐ

प्रश्न 4. दिए गए वर्णों को सही क्रम में लिखो (Arrange the letters in order) 5x1=5

ऐ ए औ अं ओ

--



Jindal Vidya Mandir, Hill Side Township
Weekly Test-11 (2024-25)

Class: I/ Sec: _____

Sub: English

Name: _____

Invigilator's Signature: _____

Duration: 45mins

Max Marks: 20

Roll no: _____

Date: 09 /09/2024

-
- **General Instructions:**
 - **This paper consists of 2 pages.**
 - **All the questions are compulsory.**
-

I. Read the passage and answer the questions given below.

1X4=4

My friends and I went to a park. The park had a lake. We saw a little orange fish. It had gotten out of the water. My friends and I helped put the fish back into the water.

a. Choose the correct option and fill in the blanks.

1. The friends went to the _____.

- i) school ii) park

2. The park had a _____.

- i) lake ii) zoo

3. The fish was _____.

- i) pink ii) orange

4. The fish got back into the _____.

- i) sand ii) water

II. Circle the suitable adjective.

1X8=8

- 1. I am (happy, sad) on my birthday.**
- 2. It is very (bright, dark) at night.**
- 3. The (rich, poor) boy is wearing dirty clothes.**

4. The giraffe is (tall, short).
5. The (thick, thin) book is very heavy.
6. The prince is very (handsome, beautiful).
7. Footballs are (flat, round).
8. The sun is (hot, cold).

III. Read the poem extract and answer the questions given below.

1X4=4

Why, why, why,
When I have only two,
Can't my feet do
What a caterpillar's do, too?

a. Write the missing letters for the given words.

1. C _ ter _ pil _ ar

2. F _ _ t

b. Write a pair of rhyming words from the poem extract.

Ans: _____

c. Write the name of the poem

Ans: _____

IV. Answer the following questions.

2X2=4

1. Where does Aman's aunt live?

Ans: _____

2. What is the colour of Aman's bicycle?

Ans: _____



Jindal Vidya Mandir, JSW Hill Side Township

Weekly Test – 12 (2024-25)

Class I/Sec: _____

Max Marks: 20

Subject: Information Technology

Duration: 45 minutes

Name: _____

Roll No: _____

Invigilator's signature: _____

Date: _____

General Instructions:

i) This question paper contains 5 main questions in 2 pages.

ii) All questions are compulsory.

I. Choose the correct answer.

5X1M=5M

[four, CPU, mouse, keys, games]

- 1) A _____ helps to points things on the screen.
- 2) I can play _____ on a computer.
- 3) _____ is the brain of the computer.
- 4) The buttons on a keyboard are called _____.
- 5) A computer has _____ main parts.

II. Match the following.

5X1M=5M

Column A	Column B	Answers
1. Keyboard	a. It is a natural thing.	[]
2. Sun	b. It shows what you draw or type on a computer.	[]
3. Computer	c. It is used to make calls to our friends.	[]
4. Monitor	d. It never makes mistakes.	[]
5. Mobile phone	e. It helps to type numbers and letters.	[]

III. . Unscramble the words to find the names of the different parts of a computer.

4X1M=4M

- | | |
|------------------|-------------------|
| 1. COLOSH _____ | 3. SPKDTONE _____ |
| 2. CUP XOB _____ | 4. ETIRPNR _____ |

IV. Answer the questions.

4X1M=4M

1) What is a computer?



2) Write the name of any two smart machines that you see in your house?

3) Name any two places where computers are used.

4) Name one thing that makes computer useful.

V. Identify the pictures. Write N for natural things, and H for human-made things.

4X1/2M=2M





Jindal Vidya Mandir, JSW Hill Side Township
Weekly Test-13 (2024-25)

Class: I/sec

Sub: EVS

Name: _____

Invigilator's Signature: _____

Max. Marks: 20

Duration: 45 minutes

Roll No. _____

Date: 21.10.24

General Instructions:

- This question paper consists of 2 pages and 14 questions.
- All the questions are compulsory.

I. Fill in the blanks from the help box.

5X1=5M

meal	dinner	animals	coops	plant
------	--------	---------	-------	-------

1. The last meal of the day is called _____.
2. we get milk from _____.
3. The food we eat at a particular time of the day is called _____.
4. Cows are _____ eating animals.
5. Hens are kept in _____.

II. Match the following.

5X1=5M

- | | | |
|--------------|-------------------------|--------|
| 6. ant | a. domestic animal | () |
| 7. horse | b. insect | () |
| 8. lion | c. dairy product | () |
| 9. breakfast | d. flesh- eating animal | () |
| 10. ghee | e. morning | () |

III. Answer the following questions.

3X2=6M

11. Write any two good eating habits.

12. Write any two ways to take care of animals.

13. Write any two examples.


a. Food we get from plants - _____, _____

b. Land animals- _____, _____

14. Draw a fruit that starts with letter "A" and colour it.

4M





Jindal Vidya Mandir, JSW Hill Side Township

Weekly Test – 14 (2024-25)

Class I/Sec:_____

Max Marks: 20

Subject: Mathematics

Duration: 45 minutes

Name:_____

Roll No:_____

Invigilator's signature:_____

Date: _____

General Instructions:

i) This question paper contains 3 main questions in 2 pages.

ii) All questions are compulsory.

I. Choose the correct answer.

5X1M=5M

1) Which body part will you use to measure a bat? _____

A) Stride B) Foot span C) Hand span D) Cubit

2) Smallest 2-digit number is _____

A) 90 B) 11 C) 10 D) 99

3) There are tens and ones in 83.

A) 3, 8 B) 8, 3 C) 8, 8 D) 3, 3

4) comes after 99.

A) 99 B) 9 C) 90 D) 100

5) The numeral for 'seventy-four' is

A) 77 B) 70 C) 74 D) 97

II. Match the following.

5X1M=5M

Column A	Column B	Answers
1. 8 tens and 8 ones	a. One hundred	[]
2. 100	b. 9	[]
3. Length of the table	c. 88	[]
4. Classroom	d. Cubit	[]
5. Greatest 1-digit number	e. Pace	[]

III. Do as directed.

5X2M=10M

1. Write the correct word for the given scrambled words and write the numeral for the number name.

a. TVYEENS = _____ -

b. NYTIEN = _____ -


2. Arrange the following numbers in decreasing order.

a. 76, 93, 85, 62 _____

b. 55, 99, 100, 81 _____

3) a. Tick (✓) the heavy item.

b. Circle the objects having more capacity.



4) Use <, > or = sign to compare.

a) 94 100

b) 86 68

c) 56 56

d) 99 91

5) Fill in the circles by counting backwards.

