



Jindal Vidya Mandir, JSW Hill Side Township
Weekly Test-1(2024-25)

Class:V / Sec:

Sub: English

Duration: 45 min

Max Marks: 20M

General Instructions:

- **All questions are compulsory**

I Read the following extracts and answer the following questions.

1X4=4

"I have never been to school. The path to the school is too uneven and pebbly and my wheelchair will get stuck. Besides, I cannot cross the little stream in front of the school."

1. Who is the speaker of the above lines?
2. Where does the speaker want to go?
3. What is the desire of the speaker?
4. Name the lesson from which the above extract has been taken.

II Underline the noun phrases from the sentences.

2X1/2=2

4. The red convertible runs fast.
5. The round cookies are in the jar.
6. The gentle and caring Ms Shau loves the children of her class.
7. The tall man with a beard offered my grandfather a seat.

III Use the given phrases and make complete sentences.

1X3=3

8. in a very loud voice
9. all of a sudden
10. with long, wavy hair

IV Make a list of the ways in which you can help children who have disabilities in your school and in your class.

5X1=5

V Answer the following questions.

2X3=6

11. Why did Abdul wish to help Chuskit.

12. How did the headmaster, the teachers and Chuskit's parents help in making the bridge?

13. Why did Chuskit's grandfather have tears in his eyes when he saw the bridge being made?



Jindal Vidya Mandir, JSW Hill Side Township
Weekly Test-II (2024-25)

Class:V
Sub: Kannada

Duration:45 Min
Max Marks: 20

- ಪ್ರತಿಯೊಂದು ಪ್ರಶ್ನೆಗಳನ್ನು ಸರಿಯಾಗಿ ಓದಿಕೊಂಡು ಉತ್ತರಿಸಿರಿ.
- ಪ್ರಶ್ನೆ ಮತ್ತು ಉಪ ಪ್ರಶ್ನೆಗಳ ಸಂಖ್ಯೆ ಯನ್ನು ಸರಿಯಾಗಿ ಬರೆಯಿರಿ.

ಭಾಗ ಎ	ವಾಚನ ಗ್ರಹಿಕಾ ಸಾಮರ್ಥ್ಯ	5 ಅಂಕಗಳು
ಭಾಗ ಬಿ	ಅನ್ವಯಿಕ ವ್ಯಾಕರಣ	7 ಅಂಕಗಳು
ಭಾಗ ಸಿ	ಪಠ್ಯಗಳ ಅಧ್ಯಯನ	8 ಅಂಕಗಳು
	ಒಟ್ಟು	20 ಅಂಕಗಳು

ಭಾಗ -ಎ

(ವಾಚನ ಗ್ರಹಿಕಾ ಸಾಮರ್ಥ್ಯ)

I.ಕೆಳಗಿನ ಪಠ್ಯೇತರ ಗದ್ಯ ಭಾಗವನ್ನು ಓದಿ, ಕೊಟ್ಟಿರುವ ಪ್ರಶ್ನೆಗಳಿಗೆ ಉತ್ತರಿಸಿರಿ.

5x1=5

ಡಾ. ರಾಜಕುಮಾರ್ ಅವರು 1929ರ ಏಪ್ರಿಲ್ 24ರಂದು ಜನಿಸಿದರು. ಚಾಮರಾಜನಗರದಿಂದ 12 ಮೈಲಿ ದೂರದಲ್ಲಿರುವ ತಾಳವಾಡಿ ಪಕ್ಕದ ಗಾಜುನೂರು ಇವರ ಹುಟ್ಟೂರು. ಗಾಜುನೂರು ಲಕ್ಷ್ಮಮ್ಮನವರ ತವರೂರು. ಸಿಂಗನಲ್ಲೂರು ಪುಟ್ಟಸ್ವಾಮಿಯವರ ಮೂಲ ಸ್ಥಳ. ಸುಪ್ರಸಿದ್ಧ ರಂಗಭೂಮಿಯ ನಟರಾದ ಸಿಂಗನಲ್ಲೂರು ಶ್ರೀ ಪುಟ್ಟಸ್ವಾಮಯ್ಯ ಇವರ ತಂದೆ. ತಾಯಿ ಶ್ರೀಮತಿ ಲಕ್ಷ್ಮಮ್ಮನವರು. ರಾಜಕುಮಾರ್ ಅವರ ಮೂಲನಾಮ ಮುತ್ತುರಾಜು. ರಂಗಭೂಮಿಯು ಇವರ ಮೊದಲ ಆಡಂಬೊಲ.ಗುಬ್ಬಿ ವೀರಣ್ಣನವರ ನಾಟಕ ಕಂಪನಿಯಲ್ಲಿ ಬಾಲ ಕಲಾವಿದನಾಗಿ, ಅವರ ವೃತ್ತಿಜೀವನ ಆರಂಭ ಮಾಡಿದರು.

ಪ್ರಶ್ನೆಗಳು:

- 1) ಡಾ. ರಾಜಕುಮಾರ್ ಅವರು ಎಷ್ಟರಲ್ಲಿ ಜನಿಸಿದರು?
- 2) ಡಾ. ರಾಜಕುಮಾರ್ ಅವರ ತಂದೆಯ ಹೆಸರೇನು?
- 3) ಡಾ. ರಾಜಕುಮಾರ್ ಅವರ ತಾಯಿಯ ಹೆಸರೇನು?
- 4) ಡಾ.ರಾಜಕುಮಾರ್ ಅವರ ಹುಟ್ಟೂರು ಯಾವುದು?
- 5) ಡಾ.ರಾಜಕುಮಾರ್ ಅವರ ವೃತ್ತಿಜೀವನ ಆರಂಭವಾಗಿದ್ದು ಎಲ್ಲಿ?

ಭಾಗ- ಬಿ (ಅನ್ವಯಿಕ ವ್ಯಾಕರಣ)

II. ಕೆಳಗಿನ ಪದಗಳ ಅರ್ಥ ಬರೆಯಿರಿ.

3x1=3

- 1) ಕಂಟಕ _____
- 2) ನೇಗಿಲು _____
- 3) ಜಂಬ _____

III. ಈ ಕೆಳಗಿನ ಪ್ರಶ್ನೆಗಳಿಗೆ ಸರಿಯಾದ ಉತ್ತರ ಬರೆಯಿರಿ

4x1=4

- 1) ಸ್ವರಗಳು ಎಂದರೇನು? ಅವು ಯಾವುವು?
- 2) ವ್ಯಂಜನಗಳು ಎಂದರೇನು? ವ್ಯಂಜನಗಳ ವಿಧಗಳನ್ನು ಬರೆಯಿರಿ.
- 3) ಸಂಯುಕ್ತಾಕ್ಷರಗಳು ಎಂದರೇನು? ಅವು ಯಾವುವು?
- 4) ಅಲ್ಪಪ್ರಾಣಾಕ್ಷರಗಳು ಎಂದರೇನು? ಅವು ಯಾವುವು?

ಭಾಗ- ಸಿ (ಪಠ್ಯಗಳ ಅಧ್ಯಯನ)

IV. ಆವರಣದಲ್ಲಿ ಕೊಟ್ಟಿರುವ ಪದಗಳಲ್ಲಿ ಸೂಕ್ತವಾದದ್ದನ್ನು ಆರಿಸಿ, ಬಿಟ್ಟ ಸ್ಥಳ ಭರ್ತಿ ಮಾಡಿರಿ

4x1=4

- 1) ಬೇವಿನ ಮರವನ್ನು ಜನ _____ ಎಂದು ಕರೆಯುತ್ತಿದ್ದರು.
- 2) ನಾವಿಬ್ಬರು ಒಬ್ಬರಿಂದ ಒಬ್ಬರು _____ ಜನರು ನಮ್ಮಿಬ್ಬರನ್ನು ನಾಶ ಮಾಡುತ್ತಾರೆ.
- 3) ಇದು ಅಮ್ಮನ ಮರ _____ ಬೇಡ ಎಂದು ಹೊರಟು ಹೋದರು.
- 4) ಎಲ್ಲರೂ _____ ಬಾಳಿದರೆ, ಎಲ್ಲರೂ _____ ಇರಬಹುದು.

IV. ಕೆಳಗಿನ ಪ್ರಶ್ನೆಗಳಿಗೆ ಮೂರು ನಾಲ್ಕು ವಾಕ್ಯದಲ್ಲಿ ಉತ್ತರಿಸಿ.

2x2=4

- 1) ಬೇವಿನ ಮರ ಮತ್ತು ಅಮ್ಮನ ಕಲ್ಲು ಮತ್ತೆ ಹೇಗೆ ಸೇರಿಹಿಡಿದವು?
- 2) ಜಂಬದಿಂದ ಅಮ್ಮನ ಕಲ್ಲು ಬೇವಿನ ಮರಕ್ಕೆ ಏನೆಂದು ಹೇಳಿತು?



Jindal Vidya Mandir, JSW Hill Side Township
Weekly Test-II 2024-25

Class: V__ / Sec: _____

Sub: Hindi (II Lang.)

Marks: 20

Duration: 1hr

Max

General Instructions:

- **सभी प्रश्नों के उत्तर देना अनिवार्य है।**

प्रश्न 1 नीचे दिए गए गद्यांश अपठित को पढ़कर प्रश्नों के उत्तर लिखो- 1×5=5

सत्संगति के अनेक लाभ हैं। अच्छे लोगों के साथ रहने से हमारी आदतों में सुधार होता है। वैसे भी अच्छे मित्र मुसीबत के समय सही सलाह देते हैं। हमें बुरे लोगों के साथ से बचना चाहिए। बुरे लोगों का साथ काजल की ऐसी कोठरी है, जिसमें मित्र चुनते समय हमें सावधान रहना चाहिए। सत्संगति हमारे जीवन को सही दिशा दिखाती है।

- क) हमें अच्छे लोगों के साथ क्यों रहना चाहिए ?
- ख) मुसीबत के समय मित्र क्या करते हैं ?
- ग) बुरे लोगों के साथ को किसके समान माना गया है?
- घ) हमारे जीवन को सही दिशा कौन दिखाता है ?
- ङ) इस गद्यांश का उचित शीर्षक लिखिए-

प्रश्न-2 सही उत्तर पर सही का निशान लगाइए-

1×2=2

क) संज्ञा के कितने भेद हैं ?

- अ) दो ब) चार स) तीन

ख) भाषा के कितने रूप हैं ?

- अ) दो ब) तीन स) चार

प्रश्न 3 उचित सर्वनाम शब्द द्वारा वाक्य पूरे करो-

1×2=2

अ) -----यहाँ क्या कर रहे हो ? (तुम ,हम ,आप)

ब) ----- दिल्ली में रहती हूँ। (तुम, मैं, आप)

प्रश्न 4 दिए गए व्यंजनों में संयुक्त व्यंजन कौन से हैं ?

1x1=1

क) त थ द ख) क्ष त्र ज श्र ग) ङ न म

प्रश्न 5 दिए गए प्रश्नों के उत्तर लिखिए-

3x2=6

- क) भाषा किसे कहते हैं ? भाषा के प्रकारों के नाम लिखिए।
ख) सर्वनाम की परिभाषा लिखते हुए सर्वनाम के भेद लिखो।
ग) वर्ण किसे कहते हैं ?

प्रश्न 6 नीचे लिखे गए किसी एक विषय पर अनुच्छेद लिखो-

- 1) हमारा पुस्तकालय
- 2) सपने में चाँद की यात्रा



Jindal Vidya Mandir, JSW Hill Side Township
Weekly Test - 3 (2024-25)

Class: V/ Sec: _____
Sub: EVS

Duration: 45 Minutes
Max Marks: 20
Date: 21/06/2024

General Instructions:

- This question paper consists of 1 page and 13 questions.
- All the questions are compulsory.
- Write the answers in your weekly test book.

I. Fill in the blanks.

[6 X 1=6M]

1. Our father's parents are our _____ grandparents.
2. People who move into a country to live there are called _____.
3. The movement of people from one place to another is known as _____.
4. We should _____ each other's likes and dislikes.
5. We should listen to differently abled people _____.
6. Each one of us has some special _____.

II. Write T for True or F for False

[4 X 1=4M]

7. A transfer means a change of job. []
8. Floods can make people homeless. []
9. We all dislike the same things. []
10. The first expression of a baby is usually the cry. []

III. Answer the following questions.

[5 X 2= 10M]

9. Name any three reasons why people migrate.
10. What is the difference between voluntary and involuntary actions. Explain with examples.
11. Write any two ways by which we can be respectful towards differently abled people.
12. What is displacement? Who are the refugees?
13. What is the difference between immigrants and emigrants?



Jindal Vidya Mandir, JSW Hill Side Township
Weekly Test-4 (2024-25)

Class: V
Sub: Mathematics

Duration: 45 minutes
Max Marks: 20M

General Instructions:

- This question paper contains 2 main questions in 1 page.
- All questions are compulsory.

I) Fill in the blanks

6X1M=6M

- 1) Place value of 2 in 53,23,879 is _____
- 2) Predecessor of 89,73,100 is _____
- 3) Sum of largest 6-digit number and smallest 5-digit number is _____
- 4) When we subtract a number from itself the difference is _____
- 5) One crore in International system is _____ million
- 6) $7,23,457 + \underline{\hspace{2cm}} = 6,42,519 + 7,08,906$

II) State whether the following statements are true or false.

4X1M=4M

1. Numbers are arranged from the greatest to the smallest in the ascending order.
2. $6,00,00,000 + 800 + 30 + 6$ is the standard form of the number 6,00,08,036
3. 67,77,320 when rounded off to the nearest 1000's is 67,77,000.
4. Five million seven hundred sixty-two is written as 51,00,762.

II) Do as directed.

5X2M=12M

- 1) Solve $CDXXX + CCCXXV$
- 2) Form the smallest and largest 7-digit numbers using the digits 3, 2, 5, 7, 8 by repeating the given digits.
- 3) Subtract 26,31,796 from 39,82,794
- 4) Add $23,71,343 + 3,23,213 + 1321$
- 5) Insert comma and write 63678247 in both Indian system and International system.



Jindal Vidya Mandir, JSW Hill Side Township
Weekly Test-5(2024-25)

Class: V/ Sec:
Sub: English

Duration:45mins
Max Marks: 20

General Instructions:

- Read the questions properly.
- Write neatly and legibly.

I. Fill in the blanks with the correct degrees of the adjectives given in brackets. 4X1=4

1. The weather is _____(good) than it was on Thursday.
2. Gold is one of the _____(popular) metals for ornaments.
3. This book is the _____(long) book.
4. It is the ____ (far) we can drive in one day.

II. Write two adjective forms of each of these words. 2X1=2

a. help _____, _____

b. faith _____, _____

III. Read the given extract and answer the questions that follow. 3X1=3

"Unless you let go of me, we won't be able to make a Thunder cake today!"

Questions

1. Who said this and to whom?
2. Why was the person being spoken to holding on to the speaker.
3. Why did the speaker wish to make a Thunder cake?

IV. Answer the following questions. 3X2=6

1. How did the child overcome her fear in the story "Thunder Cake"?

2.What are the ways in which one can get over one's fear of something?

3.Where did the child's grandmother live and what was the child scared of?

**V. Write a diary entry about your favorite story book and why you like it in
50-60 words. 5X1=5**



Jindal Vidya Mandir, JSW Hill Side Township
Weekly Test-6 (2024-25)

Class: V
Sub: Hindi (III Lang)

Duration: 45 min
Max Marks: 20M

General Instruction

- सभी प्रश्न अनिवार्य हैं।
- कुल 5 प्रश्न हैं।

1) व्यंजनों को उचित क्रम में लिखिए।

(4 X1M=4M)





(Arrange in proper order.)

ट ड ण ठ ढ	प ब फ भ म
<hr/>	<hr/>

2) चित्रों को पहचान कर उनका नाम लिखो।

(4 X1M=4M)

(Identify the pictures and write their names.)

3) संख्याओं को हिंदी (अक्षरों) में लिखिए।

(4 X1M=4M)

(Write numbers in Hindi.)

I. 1

II. 4

III. 10

IV. 6

4) कविता में से चार (०I) की मात्रा वाले शब्द लिखिए।

(4 X1M=4M)

(Identify words with (०I) ki matra from poem given below.)

आम फलों का है सरताज ,

इसको खाएँ महीने चार ,

पहले खट्टा लगता है ,

फॉर मीठे रास से भरता है।

_____, _____, _____, _____

5) अक्षरों को चुनकर चार शब्द बनाइए और दिए स्थान पर लिखिए।

(4 X1M=4M)

(Select the letters and write four meaningful words in the given space.)

ग ज ल र मौ	I. _____
र व न उ सी	II. _____
म अ ब ध मो	III. _____
ग धा पै र स	IV. _____



Jindal Vidya Mandir, JSW Hill Side Township
Weekly Test -6 (2024-25)

Class: - V/Sec: - _____

Subject: - Kannada (3rd Language)

Student Name: - _____

Max. Marks: - 20

Duration: - 45 minutes

Roll No: - _____

General Instruction: -This question paper contains 2 pages and 5 questions.

I. ಈ ಕೆಳಗೆ ಕೊಟ್ಟಿರುವ ವರ್ಣಮಾಲೆಯಲ್ಲಿ ಬಿಟ್ಟಿರುವ ಅಕ್ಷರಗಳನ್ನು ಪೂರ್ಣಗೊಳಿಸಿರಿ.

1x5=5

(Complete the letters of Kannada alphabets given below)

ಅ		ಇ	ಈ		ಊ	ಋ	ಎ	
ಬ	ಒ		ಔ	ಊ	ಋ			
ಕ			ಖ	ಜ				
	ಛ		ಝ					
ಟ		ಠ		ಢ				
ಡ	ಢ		ಣ	ಠ				
ತ		ಠ	ಢ					
ಯ		ಲ	ಲ		ಳ		ಳ	

II .ಈ ಕೆಳಗಿನ ಚಿತ್ರಗಳನ್ನು ಗಮನಿಸಿ ಅವುಗಳ ಹೆಸರನ್ನು ಬರೆಯಿರಿ.

2x1=2

(Identify the pictures and write the names)



III. ಈ ಕೆಳಗೆ ಕೊಟ್ಟಿರುವ ಗುಣಿತಕ್ಷರಗಳನ್ನು ಪೂರ್ಣಗೊಳಿಸಿರಿ.

3x1=3

(Complete the Kannada Gunitakshara letters given below)

ಗ		ಗಿ	ಗೀ	ಗು		ಗೃ	ಗೆ		ಗೈ			ಗೌ	ಗಂ	
ತ			ತೀ		ತೂ	ತ್ಯ		ತೇ		ತೊ		ತೌ		ತಃ
ರ		ರಿ	ರೀ		ರೂ		ರೆ		ರೈ		ರೋ		ರಂ	

IV. ಈ ಕೆಳಗೆ ಕೊಟ್ಟಿರುವ ಸರಿಯಾದ ಒತ್ತಕ್ಷರಗಳನ್ನು ಗುರುತಿಸಿ ಖಾಲಿ ಬಿಟ್ಟಸ್ಥಳಗಳಲ್ಲಿ ಬರೆಯಿರಿ.

5x1=5

(Choose the correct Ottakshara in the box and write in the given box)

ಢ, ಡ, ಚ, ದ, ಣ, ಖ, ಞ, ಮ್ಮ, ಠ, ಫ

ಢ		ಗ	ಢ	ಣ
	ಢ	ಞ	ಝ	
ಞ		ಢ		
	ಢ		ಢ	ಞ
ಢ		ಞ	ಢ	

V. ಈ ಕೆಳಗೆ ಕೊಟ್ಟಿರುವ ಪದಗಳಿಗೆ ಸರಿಯಾದ ಅಕ್ಷರಗಳನ್ನು ಆರಿಸಿ, ಅರ್ಥಪೂರ್ಣ ಪದ ಬರೆಯಿರಿ:

(Choose the correct letter from the given below and make a meaningful word)

5x1=5

1. _____ ಟ (ಡ, ಪ, ಯು)

2. ನ _____ ನ (ಚ, ಪ, ಯು)

3. ಬ _____ ವ (ಕ, ಯ, ಸ)

4. ಉ _____ ಯ (ಚ, ಪ, ಯು)

5. ಸ _____ ಯ (ಮ, ಗ, ಪ)



Jindal Vidya Mandir, JSW Hill Side Township
Weekly Test - 7 (2024-25)

Class: V
Sub: EVS

Duration: 45 Minutes
Max Marks: 20
Date: 2/08/2024

General Instructions:

- This question paper consists of 1 page and 14 questions.
- All the questions are compulsory.
- Write the answers in your weekly test book.

I. Fill in the blanks.

[6 X 1=6M]

1. The shape of the lungs is _____.
2. The muscle that separates the chest from the lower part of the body is the _____.
3. During respiration, _____ is broken down to generate energy.
4. The long tube-like mouth of a butterfly is called _____.
5. The state of being asleep by animals during winter is called _____.
6. The main organ of touch in insects is _____.

II. Match the following.

[4 X 1=4M]


Column I

Column II

- | | |
|------------------|-----------|
| 7. Compound eyes | cats |
| 8. Waggle dance | monkeys |
| 9. Alarm Call | housefly |
| 10. Pheromones | honeybees |

III. Answer the following questions.

11. Explain any two super senses in animals. [2M]
12. How is communication in birds different from that in honeybees? [2M]
13. What is the difference between breathing and respiration? [2M]
14. Draw a neat, labelled diagram of human respiratory system. [4M]



Jindal Vidya Mandir, JSW Hill Side Township
Weekly Test-8 (2024-25)

Class: V
Sub: Mathematics

Duration: 45 minutes
Max Marks: 20M

General Instructions:

- This question paper contains 3 main questions in 1 page.
- All questions are compulsory.

I) Fill in the blanks.

5X1M=5M

- 1) Largest 2-digit prime number is _____
- 2) LCM of 6 and 12 is _____
- 3) Smallest composite number is _____
- 4) A pair of prime numbers that differ by 2 are called _____
- 5) _____ X HCF = Product of two numbers.

II) State whether the following statements are true or false .

5X1M=5M

- 6) Factors of 32 are $2 \times 2 \times 2 \times 3$.
- 7) Long division method is used to find HCF of numbers.
- 8) 45 is multiple of 5.
- 9) Factor of a number is always greater than or equal to the given number.
- 10) 9 and 15 are divisible by 4.

III) Do as directed

5X2M=10

- 11) Draw a factor tree of 125.
- 12) Find LCM of 36, 90, 72 using the division method.
- 13) There are 72, 108 and 132 strawberries in three different baskets. What is the largest group into which the strawberries can be split, if they have to be arranged equally?
- 14) The HCF and the LCM of two numbers are 5 and 60 respectively. If the first number is 15, find the second number.
- 15) Find HCF of 40, 64 using the long division method.



Jindal Vidya Mandir, JSW Hill Side Township
Weekly Test-9(2024-25)

Class: V
Sub: G. K

Duration:45mins
Max Marks: 20

General Instructions:

- Read the questions properly.
- Write neatly and legibly.

I. Match the following.

5X1=5

- | | |
|---|----------------------------|
| 1. Rock Garden | a. Indira Gandhi |
| 2. First female prime minister of India | b. Madhya Pradesh |
| 3. Bandhani | c. The God of Small Things |
| 4. Arundhati Roy wrote the book | d. Gujarat |
| 5. Chanderi | e. Chandigarh |

II Fill in the blanks.

5X1=5

1. _____ is a botanical garden famous for its glass house.
2. The first woman to be appointed as the United Nations Civil Police Adviser in 2003 was _____.
3. The _____ dam, built across Kaveri river in Thanjavur District in the state of Tamil Nadu, was the first dam built in India.
4. _____ is the co-founder of the Alibaba Group, one of the world's largest e-commerce businesses.
5. _____ created history when she was chosen as the first female president of Taiwan.

III. Write the names of the famous personalities, who spoke the last words? 4X1=4

1. "Money cannot buy life".
2. "I found Rome of clay. I leave it to you of marble."
3. "It is very beautiful over there".
4. "Hey Ram".

IV. Answer the following questions.

6X1=6

1. Which is the first European carbon neutral airport?
2. Name the Greek Philosopher, student of Plato and teacher of Alexander the Great.
3. Who wrote the book Gitanjali?
4. Bhagalpuri silk is found in which state?
5. Who was Friedrich Froebel?
6. Which city emerged as the cleanest city of India in Swachh Survekshan 2017?



Jindal Vidya Mandir, JSW Hill Side Township
Weekly test -10 (2024-25)

Class: V

Sub: Hindi (III lang)

Duration: 45 min

Max Marks: 20M






General Instructions:

- सभी प्रश्न अनिवार्य हैं।
- कुल 4 प्रश्न हैं।

1) रिक्त स्थानों की पूर्ति 'य', 'र', 'ल', 'व' से करें।

(5X 1M=5M)

(Fill in blanks with 'य', 'र', 'ल' and 'व')

I.	___र्षा	
II.	___ड़का	
III	___थ	
IV.	___ड़ू	
V	___ज्ञ	

2) ऊ की (ू) मात्रा वाले शब्दों को छांट कर लिखिए।

(5X 1M=5M)

(Find and write words which have ऊ की (ू) मात्रा)

I. कमल, कलम, कबूतर, गरम

II. अचकन, अंगूर, आम, घंटी

III. चरखा, झंडा, झूमर, ऐनक





IV. रूमाल ,यान, चिड़िया, रानी

V. वाहन ,उल्लू, हरा , मोर

3) चित्रों को पहचान कर उसके नाम लिखो।

(4X1M=4M)

(Identify pictures and write their names.)

I.		
II.		
III.		
IV.		

4) कविता पढ़कर नीचे लिखे प्रश्नों के उत्तर दो।

(6X1M=6M)

(Read the poem and answer the following question)

चूहा बीन बजाता आया,
कछुआ बिल से बाहर आया।
मीठा सेब है रस से भरा,
खाकर मन करो हरा-भरा।
तुमने इतनी बीन बजाई,
कर लो तुम भी मुँह मीठा भाई।

प्रश्न १) बीन कौन बजाता है ?

प्रश्न २) बिल से कौन बाहर आया ?

प्रश्न ३) कविता से छाँटकर दो (े) की मात्रा वाले शब्द लिखो ?

Jindal Vidya Mandir, JSW Hill Side Township
Weekly Test - 10 (2024-25)

Class: V
Sub: Kannada (III Language)

Duration: 45 Min
Max Marks: 20

ಸೂಚನೆ: ಈ ಪ್ರಶ್ನೆಪತ್ರಿಕೆಯು 2 ಪುಟಗಳಿಂದ ಕೂಡಿದ್ದು, 4 ಮುಖ್ಯ ಪ್ರಶ್ನೆಗಳನ್ನು ಒಳಗೊಂಡಿದೆ.
ಈ ಕೆಳಗಿನ ಎಲ್ಲಾ ಪ್ರಶ್ನೆಗಳಿಗೆ ಕಡ್ಡಾಯವಾಗಿ ಉತ್ತರಿಸಿ.

I. ಈ ಕೆಳಗೆ ಕೊಟ್ಟಿರುವ 'ಅ' ಪಟ್ಟಿಯನ್ನು 'ಬ' ಪಟ್ಟಿಯೊಂದಿಗೆ ಹೊಂದಿಸಿ ಬರೆಯಿರಿ.

5X1=5

'ಅ'

'ಬ'

1.



೧.ತಂದೆ

2.



೨. ಯೋಧ

3



೩.ತಾಯಿ

4.



೪.ವೈದ್ಯ

5.



೫.ರೈತ

II. ಈ ಕೆಳಗೆ ಕೊಟ್ಟಿರುವ ಸುಳಿವುಗಳ ಸಹಾಯದಿಂದ ಪ್ರಾಸ ಪದವನ್ನು ರಚಿಸಿರಿ.

5X1=5

[ಹೊತ್ತು, ದುಡಿದು, ಬೆಳೆಸಿದ, ತಂದೆಗೆ, ನೀಡುವ]

1. ಮಡಿದು _____
2. ಹರಸಿದ _____
3. ತಾಯಿಗೆ _____
4. ಹೆತ್ತು _____
5. ಮಾಡುವ _____

III. ಈ ಕೆಳಗೆ ಕೊಟ್ಟಿರುವ ಒತ್ತಕ್ಷರ ಪದಗಳನ್ನು ಸಜಾತಿ ಹಾಗೂ ವಿಜಾತಿ ಒತ್ತಕ್ಷರ ಪದಗಳನ್ನಾಗಿ ವಿಂಗಡಿಸಿ ಬರೆಯಿರಿ.

1X5=5

{ ತಪ್ಪು ವೈದ್ಯ, ಶಿಕ್ಷಕಿ, ಗುಬ್ಬಿ, ರಕ್ಷಣೆ, ಸಂಗ್ರಹ, ಬಾಲ್ಯ, ಕಲ್ಲು, ಬಾಳೆಹಣ್ಣು, ಬಿತ್ತು, }

ಸಜಾತಿ ಒತ್ತಕ್ಷರ ಪದಗಳು

ವಿಜಾತಿ ಒತ್ತಕ್ಷರ ಪದಗಳು

1. _____
2. _____
3. _____
4. _____
5. _____

1. _____
2. _____
3. _____
4. _____
5. _____

IV. ಈ ಕೆಳಗೆ ಕೊಟ್ಟಿರುವ ಬಿಟ್ಟ ಸ್ಥಳವನ್ನು ಸೂಕ್ತ ಉತ್ತರದಿಂದ ಪೂರ್ಣಗೊಳಿಸಿರಿ.

5X1=5

1. ನವಮಾಸ ಹೊತ್ತು ಸಾಕಿದ _____.
2. ವಿದ್ಯೆ ಬುದ್ಧಿ ಕಲಿಸಿ ಹರಸಿದ _____.
3. ನಿತ್ಯದ ದುಡಿದು ಅನ್ನವ ನೀಡುವ _____.
4. ನಾಡಿನ ರಕ್ಷಣೆ ಮಾಡುವ _____.
5. ರೋಗವಾಸಿ ಮಾಡುವ _____.



Jindal Vidya Mandir, JSW Hill Side Township
Weekly Test-11(2024-25)

Class: V/Sec:
Sub: English

Duration: 45 min
Max Marks: 20M

General Instructions:

- All questions are compulsory
 - Write neat and legible handwriting .
-

1. Read the following unseen passage and answer to the questions.

Trees are often called the lungs of the Earth because they play a crucial role in producing oxygen and absorbing carbon dioxide. They provide shelter and food to countless species of animals and insects. Additionally, trees help in maintaining the balance of our ecosystem by preventing soil erosion, reducing pollution, and regulating temperature.

In urban areas, trees provide shade and improve air quality, making cities more livable. They also offer a peaceful environment for people to relax and enjoy nature. Without trees, life on Earth would be difficult, as they are essential for clean air, water, and soil.

Planting more trees is one of the simplest yet most effective ways to combat climate change. By taking care of the trees around us and planting new ones, we can contribute to a healthier and greener planet for future generations.

Answer the following questions 1x5=5

1. Why are trees called the lungs of the Earth?
2. How do trees help maintain the balance of our ecosystem?
3. What are some benefits of trees in urban areas?
4. Why is planting more trees important for combating climate change?
5. What can we do to contribute to a greener planet?

2. Read the following extracts and answer the following questions.

Why are we so afraid of the dark?

It doesn't bite and doesn't bark

Or chase old ladies round the park

Or steal your sweeties for a lark.

- a. Name the poet of the above lines?(1M)
- b. What dark doesn't do according to the poet?(1M)
- d. Write the meaning of the statements 'steal your sweeties for the a lark'(1M)

3. You are studying English at a private language school attended by many international students. You are planning a surprise birthday party for a friend who has been feeling particularly sad and homesick. Write to another classmate and invite him / her to the party. In your letter:

explain the reason for the party

give the date and time of the party

suggest what the classmate could bring to the party(5M)

4. Fill in the blanks with with a, an, or the 3x0.5=1.5M

- a. There is _____ large stadium near my school.
- b. It will take them _____ hour to reach _____ airport.

5. Rewrite the sentences by using the modals can, may, shall or will. 3x0.5=1.5M

1. You are allowed to walk in the park.
2. My uncle is leaving tonight.
3. Please join us for dinner.

6. Answer the following questions.

1. Why is Rhino bad-tempered even to this day?(1M)
2. Do you think the poet likes the dark (1M)
3. What did Umvundla do with a 'great pretence of concern'? What had he done to Rhino just before this?(2M)



Jindal Vidya Mandir, JSW Hill Side Township
Weekly Test-12 (2024-2025)

Class: V /Sec _____
Subject: Information Technology

Max.Marks:20
Duration: 45mins.

General Instructions:

*** This question paper consists of 2 pages with IV main headings.**

***All questions are compulsory.**

I. Fill in the blanks.

4 X 1=4M

1. _____ is the first known calculating device.
2. In 1888, Herman Hollerith invented the _____.
3. A computer understands _____ language.
4. _____ has volatile memory.

II. State whether the following statements are true or false.

4X 1=4M

1. A collection of four bits is called a nibble.
2. A hard disk can store data ranging from 4 TB to 15 TB.
3. PARAM 8000 is India's first supercomputer.
4. Howard Aiken designed EDVAC.

III. Choose the correct answer.

4 X 1=4M

1. _____ was also called the Step Reckoner.
a. Jacquard loom b. Tabulating machine c. Leibniz's calculator
d. Analytical Engine
2. Fourth-generation computers were made by using _____.
a. microprocessor b. integrated circuit c. vacuum tubes d. transistors
3. A _____ is an optical storage media. It can hold up to 50 GB of data.
a. CD b. DVD c. Blu-ray disc d. Floppy disk

4.A _____ is recordable and write-once DVD format.

- a .DVD-RW b. DVD-R c. Hard disk d.CD-RW

IV. Answer these questions.

4 X 2=8M

1. Explain the need for secondary storage devices.
2. Which secondary device do you use the most? Why?
3. List down any two differences between mainframe and supercomputer.
4. What do you understand by Artificial Intelligence?



Jindal Vidya Mandir, JSW Hill Side Township

Weekly Test - 13 (2024-25)

Class: V

Duration: 45 Minutes

Sub: EVS

Max Marks: 20

Date: 21/10/2024

General Instructions:

-
- This question paper contains 1 page and 11 questions.
 - All the questions are compulsory.
 - Write the answers in your weekly test book.
-

I. Fill in the blanks.

[5 X 1=5M]

1. A group of houses in a rural area is called a _____.
2. A house made up of snow bricks is called an _____.
3. We find shanty towns in _____ cities.
4. An ant colony is known as an _____.
5. A _____ is a mobile house used by people on long journeys.

II. Answer the following questions.

6. Why do we need a house? [2M]
7. Write any two differences between kutcha house and pucca house [2M]
8. Which factors affect the size of a house? [2M]
9. What kind of houses are built in places that receive heavy snow fall or rainfall and why? [2M]
10. Write two sentences about termites. [2M]
11. Write a short note on "Bees and their colonies". What values we should learn from them. [5M]



Jindal Vidya Mandir, JSW Hill Side Township
Weekly Test-14 (2024-25)

Class: V
Sub: Mathematics

Duration: 45 minutes
Max Marks: 20M

General Instructions:

- This question paper contains 3 main questions in 1 page.
- All questions are compulsory.

I. Fill in the blanks.

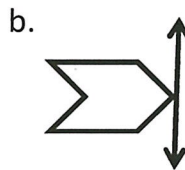
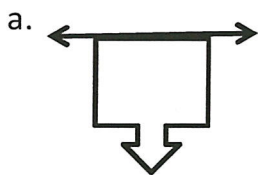
6X1M=6M

- 1) Figures which can be divided into equal parts are called _____.
- 2) A _____ is a sequence of repeated objects or numbers.
- 3) A kilolitre means _____ litres.
- 4) $1463 \text{ g} = \text{_____ kg}$
- 5) $1 \text{ inch} = \text{_____ cm}$
- 6) Standard unit of measuring length is _____.

II. Do as directed

4X2M=8M

- 7) Draw the lines of symmetry of square and hexagon.
- 8) Draw the mirror image of the following.



- 9) Convert 7156 m into km
- 10) Subtract 2 kg 350 g from 9 kg 225 g.

III. Solve the following.

2X3M=6M

- 11) Kushi bought 5 m 25 cm of cloth for a dress. Find out how much cloth she needs to buy if she wants to stitch 4 such dresses.
- 12) Fabian bought 3 kg 500 g of sugar, 5 kg 300 g of wheat flour, 16 kg 125g of rice from grocery shop. What is the total weight of items she bought from the shop?

