

Class I/Sec: \_\_\_\_

Max Marks: 20

Subject: Information Technology

Duration: 45 minutes

Name: \_\_\_\_

Roll No: \_\_\_\_

Invigilator's signature: \_\_\_\_

Date: \_\_\_\_

**General Instructions:**

i) This question paper contains 5 main questions in 2 pages.

ii) All questions are compulsory.

**I. Choose the correct answer.**

**5X1M=5M**

desktop	nature	energy	mobile phone	air conditioner
---------	--------	--------	--------------	-----------------


- 1) Things that are found in \_\_\_\_\_ are called natural things.
- 2) A \_\_\_\_\_ runs on electricity.
- 3) We use an \_\_\_\_\_ to keeps a room cool.
- 4) A \_\_\_\_\_ is used to make calls to our friends.
- 5) A see saw uses \_\_\_\_\_ to work.

**II. Identify and complete the words with the help of the given clues.**

**3X1M=3M**

- 1) You hear music with this machine.

S \_\_\_\_ E A \_\_\_\_ E R S



- 2) You take photos with this machine

C \_\_\_\_ M E R \_\_\_\_



- 3) Birds live in it. It is a natural thing

T \_\_\_\_ E \_\_\_\_



**III. State whether given statements are True or False.**

**5X1M=5M**

1) A computer never forgets. ☐

2) Mobile phones work on electricity. ☐

3) Fan is a machine. ☐

4) A bicycle runs on fuel. ☐

5) Machine is a natural thing. ☐

**IV. Answer the questions.**

**3X1M=3M**

1) What is a computer?

A. \_\_\_\_\_

2) Write the name of any two smart machines that you see in your house?

A. \_\_\_\_\_


3) Name a machine that can be used both inside and outside the house?

A. \_\_\_\_\_

**V. Identify the pictures. Write N for natural things, and H for human-made things.**

**4X1M=4M**

☐☐☐☐



**Jindal Vidya Mandir, JSW Hill Side Township**  
**Weekly Test-6 (2025-26)**

**Class: II / Sec: \_\_\_\_\_**

**Max Marks: 20**

**Sub: GK**

**Duration: 45 minutes**

**Name: \_\_\_\_\_**

**Roll No: \_\_\_\_\_**

**Invigilator's Signature: \_\_\_\_\_**

**Date: \_\_\_\_\_**

**General Instructions:**

- This question paper is printed in 2 pages and 20 questions.
- All the questions are compulsory.

**I. Choose the correct answer.**

**5X1M=5M**

1. We celebrate \_\_\_\_\_ day on 26<sup>th</sup> January every year.  
a. Independence      b. Environment      c. Republic      d. Music
2. Rabindranath Tagore was the winner of the \_\_\_\_\_ prize.  
a. Nobel      b. Bharat Ratna      c. Padma Shree      d. Arjun award
3. Golden temple is situated in \_\_\_\_\_.  
a. Agra      b. Amritsar      c. Mumbai      d. Jammu Kashmir
4. \_\_\_\_\_ was born in Punjab Province of British India.  
a. Mangal Pandey      b. Bhagat Singh      c. Jawahar Lal Nehru      d. Gandhi ji
5. \_\_\_\_\_ is the youngest state of India.  
a. Manipur      b. Karnataka      c. Rajasthan      d. Telangana

## II. Match the following.

5X1M=5M

- |                  |                                      |
|------------------|--------------------------------------|
| 6. North America | a. Delhi                             |
| 7. Australia     | b. Women IPS officer                 |
| 8. Sushi         | c. Smallest continent in the world   |
| 9. Qutub Minar   | d. Japan                             |
| 10. Kiran Bedi   | e. 3 <sup>rd</sup> largest continent |

## III. Fill in the blanks.

5X1M=5M

11. \_\_\_\_\_ is the 1<sup>st</sup> Indian to reach Mt Everest without oxygen. (Ratan Tata / Phu Dorjee)
12. Gate way of India was built in \_\_\_\_\_. (1911/1900)
13. The national flag of India is made up of \_\_\_\_\_. (woolen / Khadi)
14. If you face the rising sun, your back is towards the \_\_\_\_\_. (East/West)
15. Christ the Redeemer is located in \_\_\_\_\_. (Brazil / Italy)

## IV. Identify the pictures and write their names.


5X1M=5M

16.



\_\_\_\_\_

17.




\_\_\_\_\_

18.




\_\_\_\_\_

19.



\_\_\_\_\_

20.



\_\_\_\_\_



**Jindal Vidya Mandir, JSW Hill Side Township**  
**Weekly Test - 6 (2025-26)**

**Class: III**  
**Sub: EVS**

**Duration: 45 Minutes**  
**Max Marks: 20**  
**Date: 16/07/2025**

**General Instructions:**

- This question paper consists of 2 pages and 13 questions.
- All the questions are compulsory.
- Write the answers in your weekly test book.

**I. Choose the correct option for the following.**

**[5 X 1=5M]**

1. We should play games that are:

- a) violent      b) unsafe      c) fair and fun      d) boring

2. A family where grandparents, parents and children live together is called:

- a) small family    b) joint family    c) broken family    d) nuclear family

3. Helping and understanding others is called:

- a) fighting      b) sharing      c) ignoring      d) complaining

4. Which of the following is an indoor game?

- a) football      b) kabaddi      c) ludo      d) cricket

5. What does sharing teach us?

- a) greed      b) kindness      c) laziness      d) anger

**II. Answer the following in one sentence.**

**[3 × 1 = 3M]**

6. What do you call your father's mother?

7. Name one value we learn from caring for others.

8. Name one outdoor game you enjoy.

**III. Answer in 2–3 sentences.**

**[3 × 2 = 6M]**

9. Why is it important to care for our family members?

10. How do you feel when you share your things with friends?

11. Why should we follow rules while playing games?

**IV. Think and Answer.**

**[3M]**

12. You see your classmate is sitting alone and looks sad. What will you do and why?

13. Draw a picture of a game you like to play. Label any two things used in that game.

**[3M]**



**Jindal Vidya Mandir, JSW Hill Side Township**  
**Weekly Test – 6 (2025-26)**

**Class: IV /Sec:**  
**Subject: Mathematics**

**Duration: 45 minutes**  
**Max. Marks: 20**

---

**General Instructions: -**

- 1) This question paper is printed in 1 page.**
- 2) All the questions are compulsory.**

---

**I. Fill in the blanks.**

**6 X 1M = 6M**

1. Multiplicand X Multiplier = \_\_\_\_\_
2. A rough calculation of the value, number, quantity or extent of something is called \_\_\_\_\_
3.  $12 \times 1000 =$  \_\_\_\_\_.
4. The product of any number and zero is \_\_\_\_\_.
5. \_\_\_\_\_  $\times 5 = 15,000$
6.  $2345 \times 10 =$  \_\_\_\_\_

**II. Do as directed**

**7 X 2M = 14M**

7. A packet contains 125 candies. Find how many candies are there in 255 such packets.
8. Estimate the product of 250 and 106, by first rounding of the numbers to the nearest 100's.
9. A box has 3420 balls. How many balls are there in 6 such boxes?
10. Multiply  $434 \times 45$
11. Arrange  $123 \times 234$  in columns and multiply.
12. A train covers 1302 km in one trip. How many kilometres will it cover in 8 such trips ?
14. Estimate the product of  $25 \times 27$  to nearest 10's.



## Jindal Vidya Mandir, JSW Hill Side Township

### Weekly Test -6 (2025-26)

**Class: V**

**Duration: 45 Min**

**Sub: Kannada ( II language)**

**Max Marks: 20**

**ಸೂಚನೆ:** ಈ ಪ್ರಶ್ನೆಪತ್ರಿಕೆಯು 2 ಪುಟಗಳಿಂದ ಕೂಡಿದ್ದು, 5 ಮುಖ್ಯ ಪ್ರಶ್ನೆಗಳನ್ನು ಒಳಗೊಂಡಿದೆ.  
ಈ ಕೆಳಗಿನ ಎಲ್ಲಾ ಪ್ರಶ್ನೆಗಳಿಗೆ ಕಡ್ಡಾಯವಾಗಿ ಉತ್ತರಿಸಿ.

**I. ಈ ಕೆಳಗೆ ಕೊಟ್ಟಿರುವ ಪರ್ಯಾಯ ಗದ್ಯಭಾಗವನ್ನು ಓದಿ, ಕೊಟ್ಟಿರುವ ಪ್ರಶ್ನೆಗಳಿಗೆ ಉತ್ತರಿಸಿರಿ.**

**5x1=5**

ಸ್ವಾಮಿ ವಿವೇಕಾನಂದರು ಭಾರತದ ಮಹಾನ್ ತತ್ವಜ್ಞ, ಯೋಗಿ, ಮತ್ತು ಸಾಮಾಜಿಕ ಸುಧಾರಕರಾಗಿದ್ದರು. ಅವರ ಮೂಲ ಹೆಸರು ನರೇಂದ್ರನಾಥ ದತ್ತ. ಅವರು 1863 ರ ಜನವರಿ 12 ರಂದು ಕೋಲ್ಕತ್ತಾದಲ್ಲಿ ಜನಿಸಿದರು. ವಿವೇಕಾನಂದರು ಶ್ರೀ ರಾಮಕೃಷ್ಣ ಪರಮಹಂಸ ಅವರ ಶಿಷ್ಯರಾಗಿದ್ದು, ಜೀವನದ ಆಧ್ಯಾತ್ಮಿಕ ಮತ್ತು ಸಾಂಸ್ಕೃತಿಕ ಅಂಶಗಳನ್ನು ಆಳವಾಗಿ ಅಧ್ಯಯನ ಮಾಡಿದರು. 1893 ರಲ್ಲಿ ಅಮೇರಿಕಾದ ಚಿಕಾಗೋ ನಗರದಲ್ಲಿ ನಡೆದ ಸರ್ವಧರ್ಮ ಸಮ್ಮೇಳನದಲ್ಲಿ "ಅಮೇರಿಕಾದ ಸಹೋದರ ಮತ್ತು ಸಹೋದರಿಯರೇ" ಎಂಬ ಮಾತಿನ ಮೂಲಕ ತಮ್ಮ ಭಾಷಣವನ್ನು ಪ್ರಾರಂಭಿಸಿದರು. ಈ ಭಾಷಣದ ಮೂಲಕ ವಿಶ್ವದಾದ್ಯಂತ ಭಾರತ ಹಾಗೂ ಹಿಂದೂ ಧರ್ಮದ ಮಹತ್ವವನ್ನು ಸಾರಿದರು. ವಿವೇಕಾನಂದರು ಬಡವರ ಹಾಗೂ ಹೀನ ವರ್ಗದ ಜನರ ಸಂಕಷ್ಟಗಳನ್ನು ಪರಿಹರಿಸಲು ನಿರಂತರ ಪ್ರಯತ್ನಿಸಿದರು. ಅವರು ಯುವಕರಲ್ಲಿ ದೇಶಭಕ್ತಿಯ ಮತ್ತು ಸಮಾಜಸೇವೆ ಮಾಡುವುದರ ಬಗ್ಗೆ ವಿಶೇಷ ಶ್ರದ್ಧೆ ಇಟ್ಟಿದ್ದರು. ಅವರು ಸ್ಥಾಪಿಸಿದ ರಾಮಕೃಷ್ಣ ಮಠ ಮತ್ತು ರಾಮಕೃಷ್ಣ ಮಿಷನ್ ಅಂದಿನ ಭಾರತೀಯ ಸಮಾಜದ ಅಭಿವೃದ್ಧಿಯಲ್ಲಿ ಪ್ರಮುಖ ಪಾತ್ರವಹಿಸಿತು.

**ಪ್ರಶ್ನೆಗಳು:**

1. ಸ್ವಾಮಿ ವಿವೇಕಾನಂದರವರು ಜನಿಸಿದ ಕಾಲ ಯಾವುದು ?
2. ಸ್ವಾಮಿ ವಿವೇಕಾನಂದರವರು ಯಾರ ಪರಮ ಶಿಷ್ಯರಾಗಿದ್ದರು?
3. ಸ್ವಾಮಿ ವಿವೇಕಾನಂದರು ಅಮೇರಿಕಾದಲ್ಲಿ ಭಾಷಣವನ್ನು ಯಾವ ಮಾತಿನ ಮೂಲಕ ಪ್ರಾರಂಭಿಸಿದರು?
4. ಸ್ವಾಮಿ ವಿವೇಕಾನಂದರು ಯಾವ ವರ್ಗದ ಸಂಕಷ್ಟಗಳನ್ನು ಪರಿಹರಿಸಲು ಪ್ರಯತ್ನಿಸುತ್ತಿದ್ದರು?
5. ಸ್ವಾಮಿ ವಿವೇಕಾನಂದರು ಯುವಕರಲ್ಲಿ ಯಾವ ಯಾವ ಗುಣಗಳ ಬಗ್ಗೆ ವಿಶೇಷ ಶ್ರದ್ಧೆ ಇಟ್ಟಿದ್ದರು?

**II. ಈ ಕೆಳಗೆ ಕೊಟ್ಟಿರುವ ವಾಕ್ಯಗಳನ್ನು ವಚನ ಬದಲಿಸಿ ಪುನಃ ಬರೆಯಿರಿ**

**4x1=4**

1. ನಾನು ನನ್ನ ಅಣ್ಣಂದಿರ ಜೊತೆ ಶಾಲೆಗೆ ಬರುತ್ತೇನೆ.
2. ನನಗೆ ಆಟ ಆಡಲು ಮಿತ್ರರು ಇಲ್ಲ.
3. ನಮ್ಮ ಮನೆಯ ಹಿಂದೆ ದೊಡ್ಡ ದೊಡ್ಡದಾದ ಮರಗಳು ಇವೆ.
4. ನಮ್ಮ ಶಾಲೆಯಲ್ಲಿ ಹುಡುಗರು ಇದ್ದಾರೆ.

**III. ಈ ಕೆಳಗೆ ಕೊಟ್ಟಿರುವ ಪ್ರಶ್ನೆಗಳಿಗೆ ಒಂದು ವಾಕ್ಯದಲ್ಲಿ ಉತ್ತರಿಸಿರಿ:**

**4x1=4**

1. ಯಾರೇ ಏನೇ ಮಾಡಿದರು ಗಿಡ ಮರ ಏನು ಮಾಡುತ್ತವೆ?
2. ಗಿಡ ಮರಗಳು ಹೇಗೆ ಬೆಳೆದು ಅರಳುತ್ತಿವೆ?
3. ಮದ್ದು ಗುಂಡುಗಳನ್ನು ಸಿಡಿಸಬೇಡಿ ಎಂದು ಹೇಳಿದವರು ಯಾರು?
4. ಆನೆಯು ಯಾವುದರಲ್ಲಿ ವಿವರ ಬರೆದು ತರಲು ಸೂಚನೆ ನೀಡಿತ್ತು?

**IV. ಕೆಳಗೆ ಕೊಟ್ಟಿರುವ ಪ್ರಶ್ನೆಗಳಿಗೆ ಎರಡು-ಮೂರು ವಾಕ್ಯಗಳಲ್ಲಿ ಉತ್ತರ ಬರೆಯಿರಿ.**

**4x1=4**


1. ನಾಯಿ ಹಿಡಿದ ಫಲಕದಲ್ಲಿ ಏನೆಂದು ಬರೆದಿತ್ತು?
2. ಯಾರ ಮಾತಿನಂತೆ ಮನ ಇಲ್ಲ? ಏಕೆ?

**V. ಈ ಕೆಳಗೆ ಕೊಟ್ಟಿರುವ ವಿಷಯದ ಕುರಿತು ಕಿರುಪ್ರಬಂಧ ಬರೆಯಿರಿ.**

**1X3=3**

**"ವನ್ಯಜೀವಿ ಸಂರಕ್ಷಣೆ"**





Jindal Vidya Mandir, JSW Hill Side Township

Weekly Test -6 (2025-26)

Class V  
Subject: Hindi (II Language)

Duration: 45 min  
Max marks: 20

आवश्यक निर्देश : (1) सभी प्रश्नों को हल करना अनिवार्य है ।  
(2) प्रश्नों की कुल संख्या 3 ।

प्रश्न.1) निम्नलिखित प्रश्नों के उत्तर लिखिए -

6X1=6

- 1) गोपाल बहुत कंजूस है । रेखांकित शब्द में विशेषण का कौन-सा भेद है -  
(क) सार्वनामिक विशेषण (ख) गुणवाचक विशेषण  
(ग) संख्यावाचक विशेषण (घ) परिमाणवाचक विशेषण
- 2) दीपावली पर सभी बाजार सजे थे । रेखांकित शब्द में विशेषण का कौन-सा भेद है -  
(क) सार्वनामिक विशेषण (ख) गुणवाचक विशेषण  
(ग) संख्यावाचक विशेषण (घ) परिमाणवाचक विशेषण
- 3) अहंकारी रावण मारा गया । रेखांकित शब्द में विशेषण का कौन-सा भेद है -  
(क) सार्वनामिक विशेषण (ख) गुणवाचक विशेषण  
(ग) संख्यावाचक विशेषण (घ) परिमाणवाचक विशेषण
- 4) छात्र स्वयं अपना कार्य करें रेखांकित पद में सर्वनाम का कौन-सा भेद है -  
(क) पुरुषवाचक सर्वनाम (ख) निजवाचक सर्वनाम  
(ग) निश्चयवाचक सर्वनाम (घ) संबंधवाचक सर्वनाम
- 5) उसे भी बुला लो रेखांकित पद में सर्वनाम का कौन-सा भेद है -  
(क) पुरुषवाचक सर्वनाम (ख) अनिश्चयवाचक सर्वनाम  
(ग) निश्चयवाचक सर्वनाम (घ) संबंधवाचक सर्वनाम
- 6) जैसा करोगे वैसा भरोगे रेखांकित पद में सर्वनाम का कौन-सा भेद है -  
(क) प्रश्नवाचक (ख) निजवाचक सर्वनाम  
(ग) निश्चयवाचक सर्वनाम (घ) संबंधवाचक सर्वनाम

प्रश्न II) निम्नलिखित प्रश्नों के उत्तर लिखिए -

5X2=10

- 1) इला दसवीं की परीक्षा क्यों नहीं पास कर पाई ?
- 2) 'लगता है, कोई बड़ा आदमी है' यहाँ बड़े आदमी से केशव का क्या मतलब है ?
- 3) इला अपने पैरों से कौन-कौन से काम करती थी ?
- 4) इला जैसे दिव्यांग लोगों के साथ हमें कैसा व्यवहार करना चाहिए ?
- 5) अकबर ने जब नक्काशी सीखना चाहा, तो केशव ने उन्हें संदेह भरी नजरों से क्यों देखा ?

प्रश्न III) "समय के महत्व" के ऊपर 70 से 80 शब्दों का एक अनुच्छेद लिखिए -

4X1=4

\*\*\*\*\*



**Jindal Vidya Mandir, JSW Hill Side Township**  
**Weekly Test - 6 (2025 – 26)**

**Class: VI**

**Duration: 45 minutes.**

**Subject: Social Science**

**Max. Marks: 20**

**General Instructions:**

- This question paper consists of 1 page.
- All questions are compulsory.

**I. Choose the correct answer from the following.**

**3X1=3M**

1 What is the meaning of Sapta Sindhava?

(a) Land of seven kings (b) Land of seven rivers (c) Land of seven oceans (d) none of these

2. Who was the Indian emperor who used the term “Jambudvipa” for India?

(a) Chandragupta Maurya (b) Akbar (c) Ashoka (d) Babur

3. Who referred to India as “Hind”?

(a) Persians (b) Chinese (c) Arabs (d) Greeks

**II. Fill in the blanks with the suitable word.**

**2X1=2 M**

4. The old name of West Bengal is \_\_\_\_\_

5. The term \_\_\_\_\_ describes the entire subcontinent.

**III. Answer the following questions.**

**3X1=3M**

6. Name two ancient texts that refer to the Indian Subcontinent as ‘Bharatvarsha’.

7. Define the term ‘tributary’.

8. Which river is referred to by the term ‘Sindhu’?

**IV. Answer the following questions in 40 words.**

**2X2=4M**

9. How do we define India?

10. Define Constitution.


**V. Answer the following questions in 80 words.**

**2X4=8M**

11. Why did people travel to India from various parts of the world in ancient times?

12. What are the snowy mountains mentioned in the description of Bharat? Do you agree with how India is described? Give reason.





**Jindal Vidya Mandir, JSW Hill Side Township**

**Weekly Test - 06 (2025 - 26)**

**Class: VII**

**Max. Marks: 20 marks**

**Subject: Social Science**

**Duration: 45 Minutes**

**General Instructions:**

- This question paper consists 4 sections.
- This question paper consists of 1 page with 4 main questions.
- All questions are compulsory.

**(SECTION - A)**

- I. Define the following. (1x5=5M)**
1. Endogenic forces
  2. Exogenic forces
  3. Epicentre
  4. Earth-quake
  5. Meander

**(SECTION - B)**

- II. Give Reason. (2.5x5=5M)**
6. Some rocks have a shape of a mushroom.
  7. Flood plains are very fertile

**(SECTION - C)**


- III. Draw the following and label it properly: - (2x2=4M)**
8. Features made by the rivers during flood on a plain
  9. Volcano

**(SECTION - D)**

**IV. Answer the following question.**

10. Illustrate the term erosion. (2M)
11. Explain the ox bow lake. (2M)
12. What are sand dunes and loess. (2M)





**Jindal Vidya Mandir, JSW Hill Side Township**  
**Weekly Test-6 (2025-26)**

**Class: VIII**  
**Sub: Science**

**Duration: 45 minutes**  
**Max Marks: 20**

**General Instructions:**

- The question paper consists of 1 page and a total of 15 questions.
- All questions are compulsory.

**I. Fill in the blanks with a suitable answer.**

**5 X 1 = 5**

1. Under favorable conditions microorganisms form a \_\_\_\_\_ around themselves.
2. The female anopheles mosquito is a carrier of the \_\_\_\_\_ virus.
3. Amoeba is a \_\_\_\_\_.
4. The SI unit of pressure is \_\_\_\_\_.
5. Muscular force and frictional force are \_\_\_\_\_ forces.

**II. Answer the following questions in a word or a sentence.**

**5 X 1 = 5**


6. Name the microorganism which can fix atmospheric nitrogen in the soil.
7. What are antibiotics?
8. Name any two items that are prepared by using yeast.
9. Define force.
10. What do you mean by contact force?

**III. Answer the following questions in 2-3 sentences**

**5 X 2 = 10**

11. What are the major groups of microorganisms?
12. What is a vaccine? Why is it important to vaccinate small children?
13. Give two examples of situation in which applied force causes a change in the shape of an object.
14. A blacksmith hammers a hot piece of iron while making a tool. How does the force due to hammering affect the piece of iron?
15. A rocket has been fired upwards to launch a satellite in its orbit. Name the two forces acting on the rocket immediately after leaving the launching pad.





**Jindal Vidya Mandir, JSW Hill Side Township**  
**Weekly Test -6(2025-26)**

**Class: IX**

**Duration: 45 Minutes**

**Subject: Information Technology**

**Max. Marks: 20**

---

**General Instructions:**

**\* This question paper consists of 2 pages with IV main headings.**

**\*All questions are compulsory.**

---

**I. Fill in the blanks.**

**4 X 1=4M**

1. A \_\_\_\_\_ is an organized effort that produces goods or services to meet the needs of society.
2. \_\_\_\_\_ is the ability to think differently and come up with new ideas.
3. \_\_\_\_\_ business manage the transportation of goods from factories to retail shops.
4. The first step in starting a business is to come up with a \_\_\_\_\_ idea.

**II. Multiple Choice Questions.**

**4 X 1=4M**

5. Which one of the following is NOT a characteristic of an entrepreneur?  
a) Risk-taking   b) Procrastination   c) Creativity   d) Leadership
6. Which quality is essential for an entrepreneur to deal with challenges?  
a) Laziness   b) Patience   c) Indifference   d) Overconfidence
7. SWOT stands for:  
a) Strength, Weakness, Options, Threats  
b) Strategy, Work, Outcome, Team  
c) Strength, Weakness, Opportunities, Threats  
d) Solutions, Work, Operations, Tools
8. Entrepreneurs are also known as:  
a) Job seekers   b) Risk avoiders   c) Job creators   d) Employees

**III. Answer these questions.**

**3 X 3=9M**

9. Describe a hybrid business model and provide an example.
10. Mention any two roles/functions of an entrepreneur in a business.
11. Write two differences between an entrepreneurship and wage employment.

**IV. Answer the following Application based questions:**

**3X1=3 M**

**Case Study:**

Ritika observed that her locality did not have a proper waste collection system. She started a small business that recycles waste materials and provides employment to local women.

- a) What kind of entrepreneur is Ritika?
- b) Mention two qualities that helped Ritika start her business.
- c) Suggest two ways her work benefits society.



**Jindal Vidya Mandir, JSW Hill Side Township**  
**Weekly Test-6**

**Class: X**  
**Subject: Social Science**

**Duration: 45 minutes.**  
**Max. Marks: 20**

---

**General Instructions:**

- 1. This question paper consists of 14 questions.**
  - 2. All questions are compulsory.**
- 

**I. Choose the correct option for the below given multiple choice questions.**

**5x1=5**

- Which type of governments was mainly driven in Europe after the defeat of Napoleon in 1815?  
a. Liberal                      b. Federal    c. Conservative    d. Feudal
- Which one of the following is an example of 'coming together'?  
a. USA                      b. India        c. Belgium        d. Spain
- Assertion(A):** Proper discharge and disposal of industrial wastes can reduce land degradation in suburban areas.  
**Reason(R):** In the states of Punjab, Haryana and western Uttar Pradesh, over irrigation is responsible for land degradation.  
a. Both A and R are true and R is the correct explanation for A.  
b. Both A and R are true but R is not a correct explanation for A.  
c. A is true but R is false.  
d. Both are false.
- Assertion (A):** Bihar has lower infant mortality rate.  
**Reason(R):** Bihar has adequate provisions of healthcare facilities.  
a. Both A and R are correct and R is the correct explanation for A.  
b. Both A and R are true but R is not a correct explanation for A.  
c. A is correct but R is wrong.  
d. A is wrong but R is correct.
- Assertion (A):** The most serious source of nationalist tension in Europe after 1871 was the Balkans'.  
**Reason (R):** A large part of Balkan was under the control of Ottoman Empire.  
a. Both A and R are correct and R is the correct explanation for A.  
b. Both A and R are true but R is not a correct explanation for A.  
c. A is correct but R is wrong.  
d. A is wrong but R is correct.

**II. Answer the following questions in brief.**

**5x1=5**

6. Name the European powers, who collectively defeated Napoleon.
7. What is 'Check and Balance'?
8. Define 'population density'?
9. What was the outcome of 1956 act in Sri Lanka?
10. Differentiate: Alluvial soil and Black soil

**III. Answer the following questions in 30 to 40 words.**

**1x2=2**

11. Why power sharing is desirable in a democracy? Give two reasons.

Or

'We have not inherited the world from our forefathers; we have borrowed it from our children.' Brief the statement with an example.

**IV. Answer the following questions in 80 to 120 words.**

**2x4=8**

12. Explain the methods to mitigate the soil erosion.

Or

Briefly explain the Unification of Germany and Italy.

13. Discuss the features of federalism in India.

Or

Compare and contrast the power sharing in Belgium and Sri Lanka