

Jindal Vidya Mandir, JSW Hill Side Township

Weekly Test – 13 (2025-26)

Class I/Sec: _____

Max Marks: 20

Subject: IT

Duration: 45 minutes

Name: _____

Roll No: _____

Invigilator's signature: _____

Date: _____

General Instructions:

i) This question paper contains 5 main questions in 2 pages.

ii) All questions are compulsory.

I. Choose the correct answer.

5X1M=5M

Four	pictures	mouse	monitor	games
------	----------	-------	---------	-------

1) A _____ helps to points things on the screen.

2) I can play _____ on a computer.

3) Computer can be used to draw _____.

4) We can watch movies on a computer _____.

5) A computer has _____ main parts.

II. Match the following.

5X1M=5M

Column A	Column B	Answers
1. Keyboard	a. It is the brain of a computer.	[]
2. CPU	b. It shows what you draw or type on a computer.	[]
3. Birds	c. It is used to make calls to our friends.	[]
4. Monitor	d. Lives on a tree.	[]
5. Mobile phone	e. It helps to type numbers and letters.	[]

II. Fill in the missing letters to know where computera are used. 4X1M=4M

1) Teachers use computer in - S C ____ O O ____.

2) Officers use computers in - O F ____ I ____ E .

3) Doctors use computer in - H ____ S P ____ T ____ L .

4) Bankers use computers in - B A ____ K

IV. Answer the questions.

4X1M=4M

1) How are machines useful for us?

1) Write any four names of places where computers are used.

2) Write four main parts of a computer.

3) Name one thing that makes computer useful.

V. Draw, colour and label a computer.

1X2M=2M



Jindal Vidya Mandir, JSW Hill Side Township

Weekly Test- 13(2025-26)

Class/sec : II ____

Subject:Hindi (III Lang.)

Student Name:_____

Invigilator's Sign_____

Max marks- 20

Duration- 45min

Roll No. _____

Date:_____

प्रश्न 1. दिए गए अक्षरों का अगला अक्षर लिखिए।

(Write next letter of the following.)

5x1=5M

म -----

च -----

र -----

थ -----

न -----

प्रश्न 2. वर्णों/मात्राओं को जोड़कर पूरा शब्द बनाइए।

(Add the letters to make a word.)

3x1=3M

अ + च + क + न = -----

म + ा + ल + ा = -----

ि + च + ि + इ + य + ा = -----

प्रश्न 3. खाली -स्थान में अक्षर लिखकर शब्द बनाओ ।

(Identify the picture and fill appropriate letters in the blanks)

2X1=2M



ब + ----- + ----- = -----



क + ----- + ----- = -----

प्रश्न 4. दिए गए शब्दों में से आ और ई की मात्रा के शब्द अलग-अलग लिखो-

6x1=6M

From the given words, write separately the words that have sign "ा" and the sign "ी"
(भाला , बकरी, पालक , चील, छड़ी, मकान)



आ -----

ई -----

प्रश्न 5 . दिए गए शब्दों के चित्र बना कर रंग भरिए।

(Draw pictures of the words mentioned)

2X2=4M

मछली	छाता
	



Jindal Vidya Mandir, JSW Hill Side Township
Weekly Test -13 (2025-26)

Class: - II /Sec: - _____
Student Name: - _____
Subject: - Kannada (III Language)
Invegilator's sigh: _____

Max.Marks: 20
Duration: 40 Minutes
Roll No: - _____
Date: _____

General Instuctions:

- This paper contains 4 mains 2 pages.
- All questions are compulsory. Read the instructions carefully and answer.

I. ಈ ಕೆಳಗೆ ಕೊಟ್ಟಿರುವ ಖಾಲಿ ಬಿಟ್ಟ ಸ್ಥಳಗಳಲ್ಲಿ ಸರಿಯಾದ ಒತ್ತಕ್ಷರಗಳನ್ನು ಬರೆಯಿರಿ.

1X5=5

(Write the correct Ottakshara in the places given below)

		ಗಂ		
	ಛ			
		ಡ್ಢ		
ತ್ತ್				
		ಬ್ಬ		

II. ಈ ಕೆಳಗೆ ಕೊಟ್ಟಿರುವ ಗುಣಿತಾಕ್ಷರಗಳನ್ನು ಪೂರ್ಣಗೊಳಿಸಿರಿ.

4X1=4

(Complete the Gunitakshara letters given below)

ಗ	ಗಾ	ಗಿ	ಗೀ		ಗೂ	ಗೃ	ಗೆ	ಗೇ	ಗೈ		ಗೋ	ಗೌ		
	ತಾ	ತಿ	ತೀ	ತು	ತೂ	ತೃ	ತೆ	ತೇ		ತೊ			ತಂ	ತಃ
ನ	ನಾ	ನಿ		ನು		ನೃ	ನೆ	ನೇ		ನೊ		ನೌ	ನಂ	ನಃ
ಪ		ಪಿ	ಪೀ	ಪು	ಪೂ				ಪೈ	ಪೊ	ಪೋ	ಪೌ	ಪಂ	ಪಃ

III. ಈ ಕೆಳಗೆ ಕೊಟ್ಟಿರುವ ಅಕ್ಷರಗಳಿಂದ ಆರಂಭವಾಗುವ ಒಂದು ಪದವನ್ನು ಬರೆಯಿರಿ.

5X1=5

(Write one word beginning with each of the letters given below)

1. ಅ= _____

2. ಸ= _____

3. ತ= _____

4. ಕ = _____

5. ಡ = _____


IV. ಕೊಟ್ಟಿರುವ ಒತ್ತಕ್ಷರ ಪದಗಳನ್ನು ವಿಂಗಡಿಸಿ ಬರೆಯಿರಿ.

6X1=6

(Identify the words and write in correct column)

ಸಂಭ್ರಮ , ಅಬ್ಬರ, ಪದ್ಮ,
ಕತ್ತರಿ, ತಕ್ಕಡಿ , ತತ್ವ

ಸಜಾತಿ ಒತ್ತಕ್ಷರ	ವಿಜಾತಿ ಒತ್ತಕ್ಷರ
1.	1.
2.	2.
3.	3.



Jindal Vidya Mandir, JSW Hill Side Township
Weekly Test –13 (2025-26)

Class: III

Sub: EVS

Duration: 45 Minutes

Max Marks: 20

Date:30/08/2025

General Instructions:

-
- This question paper consists of 1 page and 12 questions.
 - All the questions are compulsory.
 - Write the answers in your weekly test book.
-

I. Fill in the blanks.

[5 X 1=5M]

1. Birds pick food with their _____.
2. Mosquitoes spread diseases such as _____.
3. Sunlight is the source of Vitamin _____.
4. _____ are the primary food producers.
5. _____ are called 'Friends of Farmers'.

III. Answer the following questions.

6. How do animals and plants depend on each other for food? [2M]
7. How do vermicomposting toilets help us? [2M]
8. How is moth different from butterfly? [2M]
9. How are honeybees helpful? [2M]
10. What is the difference between worms and insects? [2M]
11. Describe how many birds lose their shelter as well as source of food . [2M]
12. Draw a neat labelled diagram of Parts of Insect. [3M]



Jindal Vidya Mandir, JSW Hill side township

Weekly test – 13 (2025-26)

Class IV/Sec : ____

Duration: 45 min

Subject: Mathematics

Max. Marks: 20

General Instructions: This question paper contains 3 main questions in 2 pages.

All questions are compulsory.

I. Fill in the blanks.

4X1M=4M

1. Every number has 1 and _____ as factors.
2. The numerator is smaller than the denominator is called _____ fractions.
3. Numbers that have more than two factors are called _____ numbers.
4. $\frac{7}{8} - \frac{5}{8} = \underline{\hspace{2cm}}$

II. Compare the following using >, < or =

2X1M=2M

1. $\frac{1}{5}$ $\frac{2}{5}$
2. $\frac{4}{6}$ $\frac{3}{6}$

III. Answer the following.

7X2M =14M

1. Find the common multiples of 6 and 9
2. Write any four equivalent fractions of given fraction.

$$\frac{2}{7} \quad \boxed{} \quad \boxed{} \quad \boxed{} \quad \boxed{}$$

3. Write the prime numbers between 30 and 66.
4. Reduce the given fraction into lowest form.

$$\frac{9}{36}$$

5.Find the prime factor of 24 by using division method.

6.Convert the given fraction into mixed numbers by dividing.

$$\frac{11}{3}$$

7.Sushma brought 10 sandwiches. Sunil ate 2 sandwiches and Priya ate 1 sandwich.Find (in fractions) how many sandwiches they ate in total.



Jindal Vidya Mandir, JSW Hill Side Township
Weekly Test-13 (2025-26)

Class: V
Sub: Kannada(II language)

Max Marks: 20
Duration: 45minutes

- ಪ್ರತಿಯೊಂದು ಪ್ರಶ್ನೆಗಳನ್ನು ಸರಿಯಾಗಿ ಓದಿಕೊಂಡು ಉತ್ತರಿಸಿರಿ.
- ಪ್ರಶ್ನೆ ಮತ್ತು ಉಪ ಪ್ರಶ್ನೆಗಳ ಸಂಖ್ಯೆಯನ್ನು ಸರಿಯಾಗಿ ಬರೆಯಿರಿ.

I. ಈ ಕೆಳಗಿನ ಪದಗಳನ್ನು ಸ್ವಂತ ವಾಕ್ಯದಲ್ಲಿ ಬರೆಯಿರಿ.

2x1=2

1. ಕಂಠವು ಬಿಗಿದು ಬಂತು
2. ಕಣ್ಣನ್ನು ತೆರೆಸು

II. ಈ ಕೆಳಗಿನ ಪದಗಳನ್ನು ಬಿಡಿಸಿ ಬರೆದು ಸಂಧಿ ಬರೆಯಿರಿ.

3x1=3

1. ಮುಳ್ಳನ್ನು - _____
2. ಸವಿಗನ್ನಡ - _____
3. ಹೊಲವನ್ನು - _____

III. ಈ ಕೆಳಗಿನ ಪ್ರಶ್ನೆಗಳಿಗೆ ಒಂದು ವಾಕ್ಯದಲ್ಲಿ ಉತ್ತರಿಸಿರಿ.

5x1=5

1. ನಾಮಪದ ಎಂದರೇನು?
2. ರೂಢಿನಾಮ ಎಂದರೇನು?
3. ಯಾರನ್ನು ಅಳಿಯಬಾರದು?
4. ಬಾರ್ಬರ ಯಾವ ಸಮಸ್ಯೆಯಿಂದ ನರಳುತ್ತಿದ್ದಳು?
5. ಬಡತನಕ್ಕೆ ಯಾವ ಚಿಂತೆ?

IV. ಈ ಕೆಳಗಿನ ಪ್ರಶ್ನೆಗಳಿಗೆ ಎರಡು-ಮೂರು ವಾಕ್ಯಗಳಲ್ಲಿ ಉತ್ತರಿಸಿರಿ.

3x2=6

1. ಲೋಕದಲ್ಲಿ ಸ್ತುತಿ ನಿಂದನೆಗಳು ಬಂದರೆ ಹೇಗಿರಬೇಕು?
2. ಎಂತಹ ಭಕ್ತಿಯಿಂದ ದ್ರವ್ಯದ ಕೇಡಾಗುತ್ತದೆ?
3. ಮಗುವಿಗೆ ಉಸಿರಾಡುವಂತೆ ಸಹಕರಿಸುವಾಗ ಮಾರ್ಲಿಫನನ ಮನಸ್ಸಿನಲ್ಲಿ ಬಂದ ಆಲೋಚನೆಗಳೇನು?

V. ನಿಮ್ಮ ಶಾಲೆಯಲ್ಲಿ ಆಚರಿಸಿದ ಸ್ವಾತಂತ್ರ್ಯ ದಿನಾಚರಣೆಯ ಕುರಿತು, ನಿಮ್ಮ ಗೆಲೆಯ/ಗೆಲತಿಗೊಂದು ಪತ್ರ ಬರೆಯಿರಿ.

1x4=4



Jindal Vidya Mandir, JSW Hill Side Township
Weekly Test-13 (2025-26)

Class: V
Sub: Hindi(II Language)

Max Marks: 20
Duration:45min.

आवश्यक निर्देश: सभी प्रश्न अनिवार्य है।

1 नीचे दिए गए अपठित गद्यांश के प्रश्नों के उत्तर लिखिए।

1x5=5M

गर्मी का मौसम आते ही गाँवों में पेड़ों की छाँव लोगों को बहुत भाती है। सुबह-सुबह पक्षियों की चहचहाहट वातावरण को सुरीला बना देती है। बच्चे तालाब में खेलते हैं और बुजुर्ग लोग बरगद के पेड़ के नीचे बैठकर बातें करते हैं। किसान अपने खेतों में काम करने जाते हैं। खेतों में लगी फसल को समय पर पानी देना ज़रूरी होता है। इसलिए वे नहरों से पानी खींचकर खेतों में पहुँचाते हैं। गाँव की औरतें भी मिलजुलकर काम करती हैं। कुछ महिलाएँ घर का काम सँभालती हैं तो कुछ पशुओं की देखभाल करती हैं। इसी सहयोग से गाँव का जीवन सुखमय बनता है।

(i) गाँव में लोग गर्मी में कहाँ बैठते हैं ?

(क) तालाब में (ख) बरगद के पेड़ के नीचे (ग) खेतों में (घ) घर की छत पर

(ii) सुबह-सुबह वातावरण सुरीला किससे बनता है ?

(क) बच्चों की हँसी से (ख) पक्षियों की चहचहाहट से (ग) किसानों के गीत से (घ) औरतों की बातों से

(iii) खेतों में पानी कैसे पहुँचाया जाता है ?

(क) कुएँ से (ख) तालाब से (ग) नहरों से (घ) वर्षा से

(iv) गाँव की औरतें किस प्रकार काम करती हैं ?

(क) अकेले (ख) झगड़कर (ग) मिलजुलकर (घ) आराम से

(v) इस गद्यांश का उपयुक्त शीर्षक क्या होगा ?

(क) गाँव का सहयोग (ख) किसान की परेशानी (ग) बरगद का पेड़ (घ) पक्षियों का संगीत

2 नीचे दिए गए शब्दों के लिए विलोम शब्द लिखे ।

1x3=3M

- (i) उचित (ii) आशा (iii) मौखिक

3 नीचे दिए गए शब्दों में से मूल शब्द और उपसर्ग शब्द चुनकर लिखें

2x1=2M

- (i) सुविचार (ii) सत्य

4 नीचे दिए गए प्रश्नों के उत्तर लिखें-

2x5=10M

- i) कवि ने रतन के लिए 'टूटा खिलौना' शब्द का प्रयोग क्यों किया है ?
- ii) पहले की और वर्ष 2155 की पुस्तकों में क्या अंतर था ?
- iii) डाकिए को पहाड़ के गाँव में अधिक क्यों चलना पड़ता है ?
- iv) कुँवर सिंह को सरकार ने उन्हें कौन-सा इनाम दिया ? इनाम में क्या-क्या था ?
- v) रतन की माँ की आँखों में किस तरह की बेबसी झलकती होगी ?



Jindal Vidya Mandir, JSW Hill Side Township
Weekly Test-13(2025-26)

Class: VI
Sub: Social Science

Duration: 45 min
Max Marks: 20M

General Instructions:

- All questions are compulsory.

Q1. Choose the correct option from the following multiple-choice questions.

1. What is the significance of 'cooperation' in a family? **3M**
a) doing work independently
b) doing work together
c) avoiding responsibilities
d) ignoring each other's need
2. Which material was most commonly used for constructing houses in Harappan cities?
a) stone b) wood c) bricks d) clay
3. When was the city Harappa discovered?
a) 1920-21 b) 1921-22 c) 1930-31 d) 1980

Q2. Fill in the blanks with the suitable word. **2M**

4. Communities often come together to _____ in times of need.
5. Harappans were the first in Eurasia to grow _____.

Q3. Answer the following questions. **3M**

6. Name two major Harappan cities that flourished along the Sarasvati River.
7. What is the Bhil's community's traditional response to crisis?
8. What value is emphasized by the concept of 'dharma' in Indian families?

Q4. Answer the following questions in 40 words. **4 M**

9. Define the term 'Civilisation'.
10. Why is the family unit important?

Q5. Answer the following questions in 80 words. **8 M**

11. Explain the reasons for the decline of the Harappan civilisation.
12. Give a brief account on Harappan trade.

Or

Describe the craft work of the Harappans.



Jindal Vidya Mandir, JSW Hill Side Township
Weekly Test - 13 (2025-26)

Class: VII
Sub: Science

Duration: 45 Minutes
Max Marks: 20
Date: 30/8/25

General Instructions:

-
- This question paper consists of 2 pages and 9 questions.
 - All the questions are compulsory.
 - Write the answers in your weekly test book.
-

I. Choose the correct option for the following.

[5 X 1=5M]

1. Which of the following is a physical change?

- | | |
|--------------------|---------------------|
| a) rusting of iron | b) burning of paper |
| c) melting of ice | d) cooking of rice |

2. Which gas is produced during respiration?

- | | | | |
|-----------|-------------------|-------------|-------------|
| a) oxygen | b) carbon dioxide | c) nitrogen | d) hydrogen |
|-----------|-------------------|-------------|-------------|

3. When magnesium ribbon burns, it forms:

- | | |
|------------------------|------------------------|
| a) magnesium hydroxide | b) magnesium carbonate |
| c) magnesium oxide | d) magnesium sulphate |

4. In humans, exchange of gases takes place in:


- | | | | |
|------------|------------|------------|--------------|
| a) trachea | b) bronchi | c) alveoli | d) diaphragm |
|------------|------------|------------|--------------|

5. Which one of these shows a chemical change?

- | | |
|----------------------|------------------------------|
| a) freezing of water | b) boiling of milk |
| c) formation of curd | d) dissolving sugar in water |

II. Answer the following questions.

6. Why do we feel tired after running very fast? Explain with reference to respiration. [2M]
7. When a candle burns, both physical and chemical changes take place. Identify these changes. Give another example of a familiar process in which both the chemical and physical changes take place. [3M]
8. a) List any three differences between physical changes and chemical changes with examples. [3M]
- (b) Suggest two methods to prevent rusting with reasons. [2M]
9. a) Explain the process of aerobic respiration in humans. [2M]
- b) Draw a neat, labelled diagram of the human respiratory system. [3M]



Jindal Vidya Mandir, JSW Hill Side Township
Weekly Test-13 (2025 -26)

Class: VIII
Sub: Mathematics

Duration: 45 Min
Max Marks: 20

General Instructions:

- This question paper is printed in 1 page. It consists of 3 main questions.
 - All questions are compulsory.
-

I. Fill in the blanks:

5X1M=5M

1. The sum of first 5 odd numbers is _____.
2. Given that $\sqrt{5625}=75$, then $\sqrt{0.5625}+\sqrt{56.25}$ is _____.
3. The squares of even numbers are always _____.
4. If 216 is a perfect cube, then its cube root is _____.
5. The cube root of a number that has 8 in its unit's place ends with _____.

II. Do as directed:

3X2M=6M

6. Is 2352 a perfect square? If not, find the smallest multiple of 2352 which is a perfect square. Find the square root of the new number.
7. Find the $\sqrt[3]{74088}$ by prime factorization method.
8. Find the greatest 4-digit number which is a perfect square.

III. Solve the following.

3X3M=9 M

9. Area of a square plot is 2304m^2 . Find the side of square plot.
10. Find the square root of 42.25 by division method.
11. Parikshit is building a cuboid out of plasticine with its length, breadth and height as 4cm, 6cm and 12 cm respectively. How many such cuboids would he need to form a cube?



Jindal Vidya Mandir, JSW Hill Side Township
Weekly Test-13 (2025-2026)

Class: IX
Subject: Information Technology

Max.Marks:20
Duration: 45mins.

General Instructions:

*** This question paper consists of 2 pages with III main headings.**

***All questions are compulsory.**

I. Fill in the blanks.

5 X 1=5M

1. The _____ facilitates easy access and navigation between pages and different objects.
2. The term WYSISYG stands for_____.
3. The _____ wavy lines below certain words mark the presence of spelling mistakes.
4. _____ characters are the characters that do not appear in a printed document.
5. A _____ is a small graphic symbol that marks an item in a list.

II. Choose the correct answer.

5 X 1=5M

1. To quickly select an entire paragraph in LibreOffice Writer, you can_____.
a. double click anywhere in paragraph b. press Ctrl +Enter
c. Triple click anywhere in paragraph d. press Shift +A
2. Which option converts the case of every selected character in the reverse way i.e., a capital character will convert into lower case and vice versa.
a. small capitals b. toggle case c. cycle case d. uppercase
3. _____ is a temporary storage location.
a. clipboard b. rulers c. menu bar d. toolbar
4. What is the file extension of LibreOffice writer document?
a. .odt b. .odp c. .odd d. .odw
5. The vertical ruler formats the _____ alignment of text.
a. top b. right c. vertical d. horizontal

III. Answer these questions.

5 X 2=10M

1. Distinguish between Standard toolbar and Formatting toolbar.
2. What is the use of Find & Replace dialog box?
3. What is the difference between copy-paste and cut-paste?
4. What is formatting? List the different types of formatting.
5. What is indent? Write the steps to indent a paragraph.



Jindal Vidya Mandir, JSW Hill Side Township
Weekly Test-13

Class: X

Duration: 45 minutes.

Subject: Social Science

Max. Marks: 20

General Instructions:

- 1. This question paper consists of 14 questions.**
- 2. All questions are compulsory.**

I. Choose the correct option for the below given multiple choice questions.

5x1=5

1. Under the MGNREGA 2005 act, the number of guaranteed days of employment per year is:
a. 100days b. 365days c. 150 days d. 200 days
2. Which of the following examples does not fall under unorganized sector?
(a) A farmer irrigating his field.
(b) A daily wage labourer working for a contractor.
(c) A doctor in a hospital treating a patient.
(d) A handloom weaver working on a loom in her house.
3. _____ act emphasizes the 'Equal pay for Equal work'.
a. MGNREGA-2005 b. RTI-2005
b. c. Equal Remuneration act-1976 d. Equal Salary act-1986
4. **Assertion (A):** The banking sector in India falls under the organized sector.
Reason (R): Terms of work are decided in the banking sector, and employees enjoy job security.
a. Both A and R are true and R is the correct explanation for A.
b. Both A and R are true but R is not a correct explanation for A.
c. A is true but R is false.
d. Both are false.
5. **Assertion (A):** Large dams, meant to control floods, have sometimes triggered floods instead.
Reason (R): Sedimentation in reservoirs reduces their water-holding capacity.
a. Both A and R are correct and R is the correct explanation for A.
b. Both A and R are true but R is not a correct explanation for A.
c. A is correct but R is wrong.
d. A is wrong but R is correct.

6. **Assertion (A):** A secular state does not promote any particular religion.
Reason (R): A secular state treats all religions equally and does not discriminate on the basis of religious beliefs.
- a. Both A and R are correct and R is the correct explanation for A.
 - b. Both A and R are true but R is not a correct explanation for A.
 - c. A is correct but R is wrong.
 - d. A is wrong but R is correct.

II. Answer the following questions in brief.

5x1=5

- 7. Suggest any one way to create employment opportunity in the rural areas.
- 8. If a region relies heavily on groundwater and surface water that is continually renewed, what is the fundamental natural process responsible for this continuous supply?
- 9. During an election campaign, a political leader uses religious symbols and plays on religious sentiments to sway voters in a mixed religious constituency.
This is an example of a political strategy based on what form of communal politics?
- 10. What are the '*guls*' or '*kuls*'?
- 11. Differentiate: Public and Private sector.

III. Answer the following questions in 30 to 40 words.

1x2=2

12. Give an account of MGNREGA 2005?

Or

Describe how political parties use caste identity to mobilize voters and select candidates, impacting election results and government formation.

IV. Answer the following questions in 80 to 120 words.

2x4=8

13. "Gender division is not based on Biology but on social expectations and stereotypes". Support the statement.

Or

What is water scarcity? Write the main reasons for water scarcity.

14. Explain the various rainwater harvesting methods and practices across India.

Or

Explain the factors that have led to the weakening of the caste system in India