

Set-A

Class: I/ Sec _____

Subject: English

Student Name: _____

Invigilator's Sign: _____

MAX Marks:40

Duration: 2Hrs

Roll no. _____

Date : _____

-
- General Instructions:
 - This paper consists 6 pages and 13 main questions.
 - Question paper is divided into four sections, Section A(Reading), Section B (Writing), Section C (Grammar), Section D(Literature)
 - All the questions are compulsory.
-

Section A- "Reading"

I. **Read the passage and answer the questions that follow.**

1X4=4M

Mr. Elephant has a bird on his back. They live together every day. They go here and there every day. They eat leaves and fruits for lunch. The bird slides from the trunk of Mr. Elephant. They live happily with each other.

A. Choose the correct option

1. Mr. Elephant has a _____ on his back.
a. doll b. bird
2. They eat leaves and fruits for _____.
a. lunch b. dinner
3. They live _____ with each other.
a. sadly b. happily
4. Write the opposite word of "front" X _____.

1X4=4M

A. Tick the correct options

- B. Pick and write the adjectives from the passage.**

Ans: _____

III. Complete the paragraph using the words from the help box.

1X4=4M

worms, beautiful, forest, national

A detailed black and white line drawing of a peacock. The peacock is shown in profile, facing right, with its head turned slightly back. It has a small crest on its head and a large, ornate tail with many 'eye' patterns. The peacock is perched on a dark, gnarled branch that has several small, five-petaled flowers and buds. The background is plain white.

IV. Write the number to sequence the story correctly.

1X4=4M





Rahul put Tom in a bath tub.

Finally, Tom is neat and clean.



Rahul is washing Tom with soap.



Tom is a dirty dog.

Section C- "Grammar"

V. Segregate the "common" and "proper" nouns from the box and write in the correct column.

½X4=2M


apple, Taj Mahal, Tuesday, uncle,


Common Nouns

Proper Nouns

VI. Look at the pictures and write the correct plural forms:

$\frac{1}{2} \times 4 = 2M$









VII. Write the opposite genders of nouns given below.

$\frac{1}{2} \times 4 = 2M$

1. Peahen _____
2. Uncle _____
3. Horse _____
4. King _____

VIII. Write the correct adjective to complete the sentences.

$1 \times 4 = 4M$

1. The butterfly is a _____ (heavy/pretty) insect.
2. We must eat _____ (healthy/happy) food.
3. The rabbit is a _____ (cute/wet) animal.
4. Monkeys have a _____ (long/big) tail.

IX. Fill in the blanks with "a" or "an".

$\frac{1}{2} \times 4 = 2M$

1. I want _____ omelette for breakfast.
2. I have _____ bar of chocolate.
3. The child wants _____ ice candy.
4. Can I have _____ glass of water?

Section D- "Literature"

X. Read the extract and answer the questions from the extract.

1X3=3M

Pencils and crayons
Scissors and glue
Erasers and paper
Reading books, too.
Good morning, good morning!
School has begun.
Good morning, good morning!
Isn't it fun!

A. Tick (✓) the statements that are true. Cross (X) the statements that are not true

1. We do not read in school.

☐

2. It is fun to go to school.

☐

B. What are the things that a child is carrying to the school?

Ans. _____

XI. Read the extract and answer the questions from the extract

1X3=3M

What, what, what
Has a caterpillar got?
Feet, feet, feet
That are dancing to the beat.

A. Write(T) for true and (F) for false.

1. The caterpillar has feet that cannot dance. _____

2. He wants to dance to the beat of music. _____

B. Pick one rhyming word from the poem.

Ans: _____

Jindal Vidya Mandir, JSW Hill Side Township

Term – I Examination (2024-25)

Class I /Sec :

Set – A

Max. Marks : 40

Sub : Hindi (II Language)

Duration : 2 hrs

Name : _____

Roll No. : _____

Invigilator's Sign.: _____

Date : _____

General Instructions:

- 1) सभी प्रश्नों को हल करना अनिवार्य है।
- 2) कुल प्रश्न संख्या 8 है।

प्रश्न I नीचे दी गई बारहखड़ी को पूरा करो ।

5x1=5

1) च चा _____ ची _____ चे _____ चो _____ चं चः

2) ल _____ लि ली _____ लू ले _____ लं लः

प्रश्न II नीचे दिए गए शब्दों में उचित मात्रा लगा कर शब्द पूरे करो ।

6x1=6

1) सर

3) भाल

5) दाद

2) ख र

4) पड़

6) थला

प्रश्न III नीचे दिए गए वर्णों को जोड़कर शब्द बनाओ ।

5x1=5

क) आ + ग + म + न = _____

ख) म + छ + ली = _____

ग) अ + द + र + क = _____

घ) त + रा + जू = _____

ङ) गु + ला + ब = _____

प्रश्न IV चित्रों को पहचान कर सही शब्द पर गोला लगाओ ।

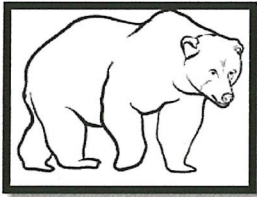
5x1=5



ऐनक

औरत

उल्लू



लम्बा

भालू


चीनी



नमक

अचकन

रंग



अंगूर

फल

मटर



उल्लू

साफ़

घर

प्रश्न V नीचे दिए गए मात्रा शब्दों को छाँट कर अलग-अलग लिखो ।

6x1=6

(मोर , कुट , जोकर , दुकान , कुछ , लोहा)

उ (ु)

ओ (ो)

1) _____


2) _____


3) _____


प्रश्न VI नीचे दिए गए चित्रों को पहचान कर सही शब्द लिखो ।

4x1=4









प्रश्न VII) नीचे दी गई मात्रा के दो-दो शब्द लिखो ।

4x1=4

1) ई (ई) _____

2) आ (आ) _____

3) ऊ (ऊ) _____

4) ए (ए) _____

प्रश्न VIII) नीचे दिए गए चित्र को देख कर पाँच शब्द लिखो ।

5x1=5



1) _____ 2) _____ 3) _____

4) _____ 5) _____



Jindal Vidya Mandir, JSW Hill Side Township
Term – I Examination (2024-25)
Set - A

Class : I/ Sec : _____

Subject : Kannada (II Language)

Name : _____

Invigilator's Sign : _____

Max. Marks : 40

Duration: 2 hrs

Date : _____

Roll No. : _____

ಸೂಚನೆಗಳು :

- *ಈ ಪ್ರಶ್ನೆಪತ್ರಿಕೆಯು A, B, C ಮತ್ತು D ಎಂಬ ಭಾಗಗಳನ್ನು ಒಳಗೊಂಡಿರುತ್ತದೆ.
- *ಈ ಪ್ರಶ್ನೆಪತ್ರಿಕೆಯು ಒಟ್ಟು 13 ಮುಖ್ಯ ಪ್ರಶ್ನೆಗಳಿಂದ ಕೂಡಿದ್ದು, 4 ಪುಟಗಳನ್ನು ಹೊಂದಿದೆ.
- *ಪ್ರತಿಯೊಂದು ಪ್ರಶ್ನೆಗಳ ಸೂಚನೆಗಳನ್ನು ಸರಿಯಾಗಿ ಓದಿಕೊಂಡು ಉತ್ತರಿಸಿರಿ.


ಭಾಗ - A	ವಾಚನ ಮತ್ತು ಗ್ರಹಿಕಾ ಕೌಶಲ್ಯ	10 ಅಂಕಗಳು
ಭಾಗ- B	ಬರವಣಿಗೆ ಕೌಶಲ್ಯ	10 ಅಂಕಗಳು
ಭಾಗ- C	ಅನ್ವಯಿಕ ವ್ಯಾಕರಣ	10 ಅಂಕಗಳು
ಭಾಗ- D	ಪಠ್ಯಗಳ ಅಧ್ಯಯನ	10 ಅಂಕಗಳು
	ಒಟ್ಟು ಅಂಕಗಳು	40 ಅಂಕಗಳು


ವಿಭಾಗ- A ವಾಚನ ಮತ್ತು ಗ್ರಹಿಕಾ ಕೌಶಲ್ಯ (Section A - Reading)

I. ಈ ಕೆಳಗಿನ ಗದ್ಯ ಭಾಗವನ್ನು ಓದಿ, ಅವರಣದಲ್ಲಿ ಕೊಟ್ಟಿರುವ ಸುಳಿವುಗಳ ಸಹಾಯದಿಂದ ಬಿಟ್ಟ ಸ್ಥಳಗಳನ್ನು ತುಂಬಿರಿ.

5X1=5

(ರಾಣಿ, ಬೆಕ್ಕು, ಇಲಿ, ಬಟ್ಟಲ, ಗೋಡೆ)

ಒಂದು ದಿನ ಎರಡು ಗಳು ಜಗಳ ಆಡುತ್ತಿದ್ದವು, ಅದನ್ನು ನೋಡಿ



_____ಗೆ ತುಂಬಾ ಕೋಪ ಬಂದು ಅವುಗಳಿಗೆ ಗದರಿಸಿದಳು. ಆಗ ಒಂದು



ಬೆಕ್ಕು _____ಯನ್ನು ನೋಡಿತು. ಅದು ಇಲಿಯನ್ನು ಹಿಡಿಯಲು ಓಡಿತು. ಆದರೆ

ಇಲಿಯು ವೇಗವಾಗಿ ಓಡಿ _____ಯ ಹಿಂದೆ ಹೋಯಿತು. ಇನ್ನೊಂದು ಬೆಕ್ಕು

ಹಾಲಿನ _____ನ್ನು ನೋಡಿ ಹಾಲು ಕುಡಿಯಿತು.

II. ಈ ಕೆಳಗೆ ಕೊಟ್ಟಿರುವ ಸುಳಿವುಗಳ ಸಹಾಯದಿಂದ ಗದ್ಯಭಾಗವನ್ನು ಪೂರ್ಣಗೊಳಿಸಿರಿ.

5X1=5

(ಹೊಲ, ಕೋಳಿಗೆ, ರಾಗಿಯ, ಸಹಾಯ, ಗುಬ್ಬಿಚ್ಚಿಯ)

ಒಂದು ದಿನ ಕೋಳಿಗೆ _____ ಕಾಳುಗಳು ಸಿಕ್ಕವು. ರಾಗಿಯನ್ನು _____ದಲ್ಲಿ
ಬಿತ್ತಿದರೆ ತುಂಬಾ ರಾಗಿ ಸಿಗುತ್ತದೆ ಎಂದು _____ ಅನಿಸಿತು. ಕೋಳಿ ರಾಗಿಯನ್ನು ಬಿತ್ತಲು
_____ ಸಹಾಯ ಕೇಳಿತು. ಗುಬ್ಬಿಚ್ಚಿ “ನನ್ನಿಂದ ಆಗದು” ಎಂದಿತು. ಕೋಳಿ ಪಾರಿವಾಳದ
_____ ಕೇಳಿತು.

ವಿಭಾಗ- B ಬರೆವಣಿಗೆ ಕೌಶಲ್ಯ (Section B-Writing)

III. ಈ ಕೆಳಗಿನ ಚಿತ್ರಗಳನ್ನು ಗುರುತಿಸಿ, ಅವುಗಳ ಹೆಸರುಗಳನ್ನು ಬರೆಯಿರಿ.

2X1=2

1.

2.



IV. ಈ ಕೆಳಗಿನ ವಾರದ ದಿನಗಳನ್ನು ಪೂರ್ಣಗೊಳಿಸಿರಿ.

1X2=2

1). ರವಿವಾರ, ಸೋಮವಾರ, _____, ಬುಧವಾರ, _____, ಶುಕ್ರವಾರ
ಶನಿವಾರ.

V. ಈ ಕೆಳಗೆ ಕೊಟ್ಟಿರುವ ಗುಣತಾತ್ಪರಗಳನ್ನು ಪೂರ್ಣಗೊಳಿಸಿರಿ.

2X2=4

1. ತ, _____, ತಿ, _____, ತು, _____, ತೃ, ತೆ, ತೇ, _____, ತೊ, _____, ತೌ, _____, ತಃ

2. ರ, ರಾ. _____, ರೀ, _____, _____, ರೈ, _____, ರೇ, ರೈ, _____, ರೋ, _____, ರಂ, ರಃ

VI. ಈ ಕೆಳಗಿನ ಕನ್ನಡ ಸಂಖ್ಯೆಗಳನ್ನು ಅಕ್ಷರದಲ್ಲಿ ಬರೆಯಿರಿ.

2X1=2

1. ೫ - _____

2. ೮- _____

ವಿಭಾಗ-C ವ್ಯಾಕರಣ (Section C - Grammar)

VII. ಈ ಕೆಳಗೆ ಖಾಲಿ ಬಿಟ್ಟಿರುವ ಸ್ಥಳಗಳನ್ನು ಆಯ್ಕೆಗಳ ಸಹಾಯದಿಂದ ಪೂರ್ಣಗೊಳಿಸಿರಿ.

2X1=2

1. ಅ ಯಿಂದ ಔ ವರೆಗಿನ ಅಕ್ಷರಗಳು _____

(ಯೋಗವಾಹಗಳು, ಸ್ವರಗಳು, ವ್ಯಂಜನಗಳು)

2. ಯೋಗವಾಹಗಳಲ್ಲಿ _____ ಅಕ್ಷರಗಳಿವೆ.

(2, 3, 4, 5)

VIII. ಈ ಕೆಳಗೆ ಕೊಟ್ಟಿರುವ ಪದಗಳಲ್ಲಿ ಅನುಸ್ವರ ಪದಗಳನ್ನು ಆರಿಸಿ ಬರೆಯಿರಿ.

1X3=3

1.

ರಥ, ಶಂಖ, ಫಲ, ಖಗ,
ಅಂದ, ವನ, ಕಂಠ, ತೆನೆ, ರಂಗ,
ಭಯ, ಕಂಬ, ಮಂಗ, ಜಠರ

IX. ಈ ಕೆಳಗೆ ಕೊಟ್ಟಿರುವ ಒತ್ತಕ್ಷರ ಪದಗಳನ್ನು ಓದಿ, ಅವುಗಳನ್ನು ವಿಂಗಡಿಸಿ ಬರೆಯಿರಿ.

1X3=3

1.

ಉಚ್ಚ, ಅಣ್ಣ, ದ್ರವ, ಕಷ್ಟ
ಮಗ್ಗ, ಗದ್ದಲ, ವಜ್ರ,
ಕನ್ನಡ ಸ್ಥಳ, ಸತ್ಯ

ಸಜಾತಿ ಒತ್ತಕ್ಷರ ಪದಗಳು - _____, _____, _____

ವಿಜಾತಿ ಒತ್ತಕ್ಷರ ಪದಗಳು - _____, _____, _____

X. ಈ ಕೆಳಗಿನ ಪದ್ಯವನ್ನು ಓದಿ, ಪ್ರಾಸ ಪದಗಳನ್ನು ಆರಿಸಿ ಬರೆಯಿರಿ.

2X1=2

ಒಂದು ಕಾಗೆ ಬಂದಿತು
ಎರಡು ಕಾಳು ತಿಂದಿತು
ಮೂರು ಮೊಟ್ಟೆ ಇಟ್ಟಿತು
ನಾಲ್ಕು ಸಲ ಕೂಗಿತು

1. _____ 2. _____

ವಿಭಾಗ- D ಪಠ್ಯಗಳ ಅಧ್ಯಯನ (Section D- Literature)

XI. ಈ ಕೆಳಗಿನ ಖಾಲಿ ಬಿಟ್ಟಿರುವ ಸ್ಥಳಗಳಲ್ಲಿ ಸೂಕ್ತ ಪದವನ್ನು ಬರೆಯಿರಿ.

4X1=4

1. ನೀನು ತುಂಬಾ _____
2. ನವಮಾಸ ಹೊತ್ತು ಸಾಕಿದವರು _____
3. ಒಂಭತ್ತು ಹತ್ತು _____ ಮುದಿರೆತ್ತು.
4. ಕೋಳಿ ತನ್ನ ಮರಿಗಳನ್ನು ಕೂಡಿಕೊಂಡು _____ ಬಿತ್ತಿತು.

XII. ಈ ಕೆಳಗಿನ ಪ್ರಶ್ನೆಗಳಿಗೆ ಒಂದು ವಾಕ್ಯದಲ್ಲಿ ಉತ್ತರಿಸಿರಿ.

3X1=3

1. ಕೋಳಿ ಎಲ್ಲಿ ವಾಸವಾಗಿತ್ತು?

ಉ: _____

2. ಸುಮಾ ಯಾವ ಆಟ ಆಡಿದಳು?

ಉ: _____

3. ಅಜ್ಜಿ ದಿನಾಲು ಸಂಜೆ ಎಲ್ಲಿಗೆ ಹೋಗುತ್ತಿದ್ದರು?

ಉ: _____

XIII. ಈ ಕೆಳಗೆ ಕೊಟ್ಟಿರುವ ಅಕ್ಷರಗಳಿಂದ ಆರಂಭವಾಗುವ 2 ಪದಗಳನ್ನು ಬರೆಯಿರಿ.

3X1=3

1. ನ- _____
2. ಭ- _____
3. ಈ- _____

Set A

Class I/Sec: _____

Max Marks: 40

Subject: Mathematics

Duration: 2hrs

Name: _____

Roll No: _____

Invigilator's signature: _____

Date: _____

General Instructions:

i) This question paper contains 6 main questions in 5 pages.

ii) All questions are compulsory.

Section A

I. Choose the correct answer.

6X1M=6M

1) Number name of 46 is _____

- A) Four six B) Forty six C) Forty five D) Sixty four

2) An _____ has no sides.

- A) Square B) triangle C) oval D) cone

3) When 0 is subtracted from a number, the answer is the _____

- A) 1 B) 0 C) Number itself D) 10

4)  Name the given solid shape is a _____.

- A) cylinder B) cube C) cone D) cuboid

5) What comes just before 46 ?

- A) 47 B) 45 C) 44 D) 43



6) Compare the following numbers using the correct sign. 14  18

- A) > B) < C) = D) +

II. Fill in the blanks.**5X1M=5M**

- 1) Two tens and nine ones will make _____.
- 2) The numeral for fifty is _____.
- 3) Starting from 17 and count backwards 6, we will get _____.
- 4) A triangle has _____ sides.
- 5) 3×6 is _____.

III. Match the following.**5X1M=5M**

	Column A		Column B	Answer
1.	$19 - 5$	a.	2 Tens and 5 ones	[]
2.	25	b.		[]
3.	Cone	c.	1 Ten	[]
4.		d.	14	[]
5.	10 Ones	e.	Circle	[]

Section B**IV. Do as directed.****7X2M =14M**

1. Add by counting forward.

$16 + 4 = \boxed{}$


Start from  and move forward 

2. Arrange the numbers from 43 to 50 in correct order of its counting.

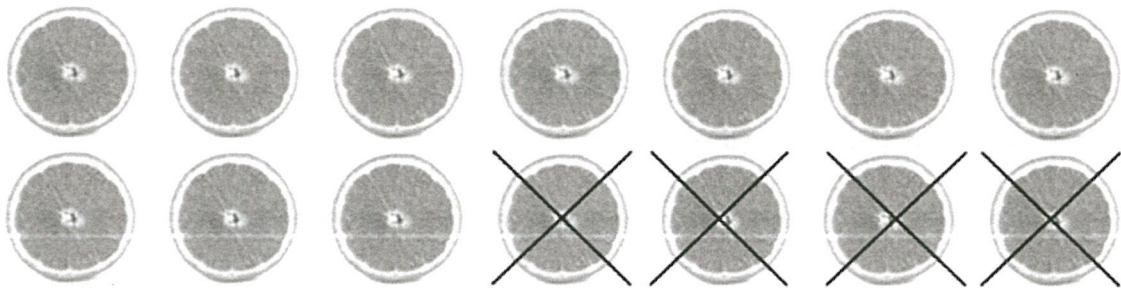
45, 47, 46, 50, 48, 43, 44, 49

--	--	--	--	--	--	--	--

3. Circle the object that continues to form a pattern.



4. Write the subtraction statement for the given picture.



Subtraction statement: $\underline{\quad} - \underline{\quad} = \underline{\quad}$

5. Find the missing numbers in the following sums.

a. 6

$+$

9

b.

$+$ 2

7


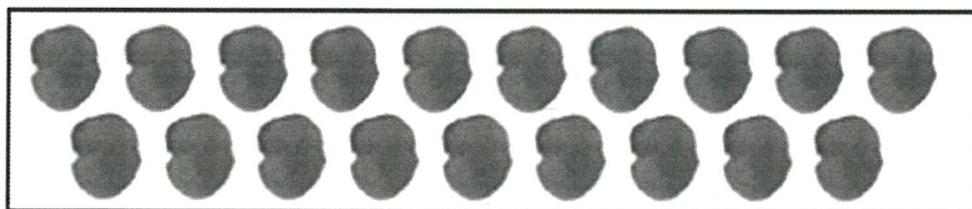
6.a. Arrange the numbers in increasing order.

34 , 41 , 12

b. Arrange the numbers in decreasing order.

25 , 49 , 36

7. Subtract the following by crossing out.




Section C

2X3M=6M


V. Answer the following.

1. Draw beads to represent the given numbers on the abacus and write its number names.



17

Number name: _____



26

Number name: _____

2. Add or subtract as required.

$$\begin{array}{r} \text{T O} \\ \text{a. } 26 \\ + 3 \\ \hline \end{array}$$

$$\begin{array}{r} \text{T O} \\ \text{b. } 37 \\ - 5 \\ \hline \end{array}$$

$$\begin{array}{r} \text{T O} \\ \text{c. } 42 \\ + 6 \\ \hline \end{array}$$

VI. Answer the following.

1X4M=4M

1. Gita has 2 pencils, Latha has 3 pencils and meena has 4 pencils .How many pencils are there in all?

a. Number of pencils Gita has =

b. Number of pencils Latha has =

c. Number of pencils Meena has =

Number of pencils in all =

There are _____ pencils in all.

8

8

19/9/24.

14-9-24



Jindal Vidya Mandir, JSW Hill Side Township
Term-I Examination (2024-25)

Set- A

Class: I/ Sec: _____

Max Marks: 40

Sub: EVS

Duration: 2 Hrs

Name: _____

Roll No: _____

Invigilator's Signature: _____

Date: _____

General Instructions:

- This question paper is printed in 4 pages and 28 questions.
- It consists of two sections A and B. Section A has objective type questions and section B has subjective type questions.
- All the questions are compulsory.

Section-A

I. Choose the correct word from the box to fill in the blanks.

5X1=5M

creeper	soft	covered	forename	identity card
---------	------	---------	----------	---------------

1. A card that helps others to know you is called the _____.
2. Your first name is also called your _____.
3. We should drink water that is kept _____.
4. Herbs are small and usually have a _____ stem.
5. Pumpkin is an example of a _____.

II. Write True (T) or False (F) for the following sentences.

5X1=5M

6. The things we like are called our favourite things. ()
7. Children should not play with matchstick. ()
8. A classroom has benches and desk. ()
9. All children live with their grandparents. ()
10. We should keep our neighbourhood dirty. ()

III. Circle the odd one out.

5X1=5M

11. teacher, principal, student, policeman
12. brother, sister, friend, cousin
13. footpath, zebra crossing, traffic light, staircase
14. Fruit, vegetable, rice, junk food
15. eyes, nose, ears, hands

IV. Match the following.

5X1=5M

- | | |
|---------------|---------------|
| 16. study | a. stay quiet |
| 17. play | b. climber |
| 18. library | c. school |
| 19. Eid | d. park |
| 20. grapevine | e. Ramdan |

Section-B

V. Answer the following questions in two sentences.

6X2=12M

21. What is a large family?

22. Write any two good habits to stay fit.

23. What is a market?

24. Write any two good rules that you should follow in school.

25. Name any two people who help us and describe how they help us.

26. What is a festival?

27. Draw and name any two parts of the face.

2X2= 4M

--	--

28. Draw a plant and label its parts.

4M

--



Jindal Vidya Mandir, JSW Hill Side Township
Term-I Examination (2024-25)

Set-A

Class: I/ Sec: _____

Sub: Information Technology

Name: _____

Invigilator's Signature: _____

Max Marks: 25

Duration: 1Hr

Roll no: _____

Date: _____

General Instructions:

-
- This paper consists of 4 pages.
 - All the questions are compulsory.
-

I. Choose the correct answer and complete the sentences.

5 X1=5

1. We use a _____ to take photos.

- a. car b. clock c. camera

2. I can play _____ on a computer.

- a. letter b. games c. sums

3. A _____ looks like a television.

- a. mouse b. monitor c. keyboard

4. A computer can be used to _____ pictures.

- a. draw b. read c. write

5. A _____ is used to make calls to our friends.

- a. television b. mobile phone c. doll

II. Unscramble the words to make the correct word.

5X1=5

1. EYKBAROD- _____

2. NKAB- _____

3. HSCOOL- _____

4. MXIRE- _____

5. UPC XOB- _____

III. Match the followings.

5X1=5

A

1. Mouse

2. Tree

3. CPU

4. Speaker

5. Car

B

1. It is the brain of a computer.

2. It helps to point things on the screen

3. Birds live in it.

4. Used to move one place to another.

5. Use to hear music with this machine.

8

IV. Answer the following questions.

4X1=4

Q1. How are machines useful for us?

Ans. _____

Q2. What is a computer?

Ans. _____

Q3. Write the name of two places where computer are used.




Ans. _____

Q4. What tasks you do on a computer?

Ans. _____


V. Tick (✓) the objects that are parts of a computer.

1X3=3

☐☐☐☐☐☐

VI. Draw a mouse and color it.

1X3=3





Jindal Vidya Mandir,JSW Hill Side Township

Term 1 Examination (2024-25)

Set - A

Class: - I/Sec: _____

Max Marks:25

Subject: Kannada (III Language)

Duration:1 Hour

Student Name: _____

Roll No: _____

Invigilator's sign: _____

Date: _____

General Instructions:* This question paper contains 2 pages and 5 main questions.

*** All questions are compulsory.**

I. ಈ ಕೆಳಗೆ ಕೊಟ್ಟಿರುವ ಸ್ಥಳಗಳಲ್ಲಿ ಸರಿಯಾದ ಅಕ್ಷರಗಳನ್ನು ತುಂಬಿರಿ.

6X1=6

(Choose the correct letter and fill in the blanks)

(ಆ , ಇ , ಉ , ಎ , ಒ , ಮ)

ಅ			ಈ	ಉ				ಎ	ಒ
---	--	--	---	---	--	--	--	---	---

	ಒ	ಐ	ಅಂ	ಅಃ
--	---	---	----	----

II. ಈ ಕೆಳಗೆ ಕೊಟ್ಟಿರುವ ವ್ಯಂಜನಾಕ್ಷರಗಳನ್ನು ಸರಿಯಾದ ಕ್ರಮದಲ್ಲಿ ಜೋಡಿಸಿ ಬರೆಯಿರಿ.

(Rearrange and write the following consonants in order)

3X1=3

1. ಗ, ಖ, ಕ, ಙ, ಘ-

--	--	--	--	--

2. ಚ, ಜ, ಛ, ಞ, ಝ-

--	--	--	--	--

3. ಡ, ಣ, ಟ, ಠ, ಡ್ಢ-

--	--	--	--	--

III. ಈ ಕೆಳಗೆ ಕೊಟ್ಟಿರುವ ಅಕ್ಷರಗಳ ಹಿಂದಿನ ಅಕ್ಷರಗಳನ್ನು ಬರೆಯಿರಿ.

6X1=6

(Write the before letters for the given letters)

1. _____ ಎ

2. _____ ಒ

3. _____ ಛ

4. _____ ಖ

5. _____ ಣ

6. _____ ಡ್ಢ


IV. ಈ ಕೆಳಗೆ ಕೊಟ್ಟಿರುವ ಚಿತ್ರಗಳನ್ನು ಗಮನಿಸಿ, ಅವುಗಳು ಪ್ರಾರಂಭವಾಗುವ ಮೊದಲ
ಅಕ್ಷರಗಳನ್ನು ಬರೆಯಿರಿ.

5X1=5

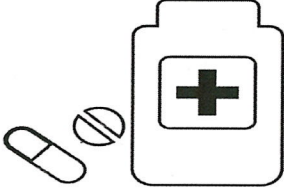
(Observe the following pictures , and write first letter of the picture.)

(ಈ , ಆ , ಐ , ಔ , ಅಂ)


1.



2.




3.



4.



5.



V. ಈ ಕೆಳಗಿನ ಅಕ್ಷರಗಳನ್ನು ಅವುಗಳು ಆರಂಭವಾಗುವ ಮೊದಲ ಪದಗಳೊಂದಿಗೆ ಹೊಂದಿಸಿ
ಬರೆಯಿರಿ.

5X1=5

(Match the words that begin with the given letters)

1. ಗ
2. ಚ
3. ಆ
4. ಕ
5. ಡ

- i. ಕಮಲ
- ii. ಆಟ
- iii. ಡಮರು
- iv. ಗಣಪ
- v. ಚಮಚ



Jindal Vidya Mandir, JSW Hill Side Township

Term-I Examination (2024-25)

Set A

Class I/ Sec : ____

Duration: 1 hr

Subject: III Language (Hindi)

Max Marks: 25

Name : _____

Roll No: _____

Invigilator's signature : _____

Date: _____

आवश्यक निर्देश

- 1) सभी प्रश्नों का हल करना अनिवार्य है।
- 2) प्रश्नों की कुल संख्या 5 है।

प्रश्न 1 स्वर से अगला स्वर लिखो।

5X1M=5M

(Write the next letter of the given letter.)

a) आ , _____

b) ऊ , _____

c) ऋ , _____

d) अं , _____

e) ओ , _____

प्रश्न 2 .दिए गए स्वरों के पहले वाले स्वरों को लिखो -

5X1M=5M

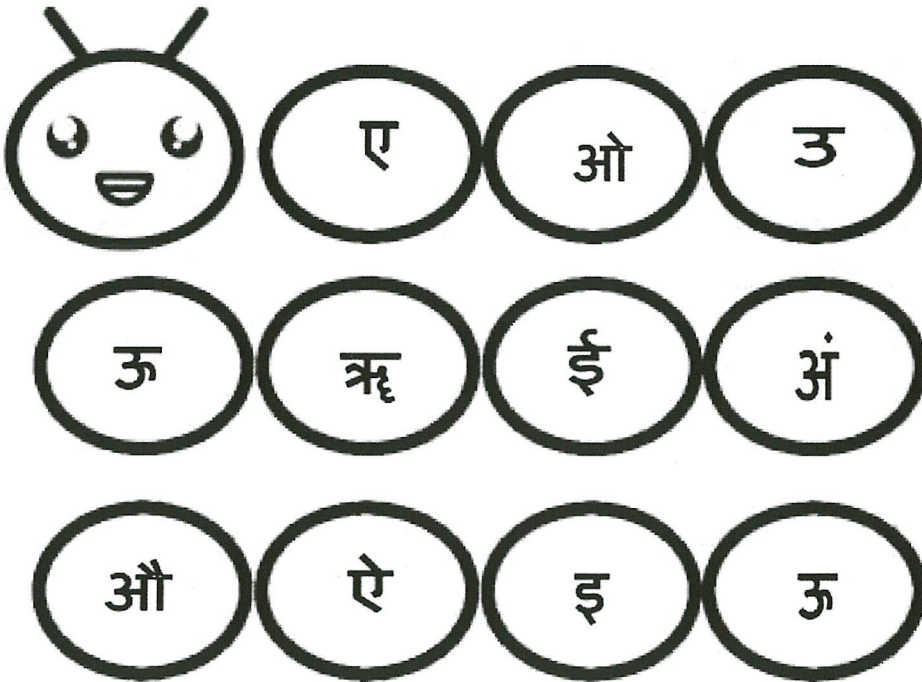
(Write the before letter for the given letters.)

- a) _____ , इ
- b) _____ , ऋ
- c) _____ , औ
- d) _____ , अं
- e) _____ , ए

प्रश्न 3. ऋ और औ स्वर में रंग भरो-

5X1M=5M

(Colour the letter ऋ and ए)



प्रश्न 4. दिए गए चित्रों का पहला वर्ण लिखो-

4X1M =4M

(Write the first letter for the given pictures.)

a) _____ =

1

b) _____ =



c) _____ =



d) _____ =



प्रश्न 5 खाली - स्थान भरों-

6X1M=6M

अ _____ , _____ , ई , _____ , ऊ , ऋ , ए , _____ ओ ,

_____ , _____ , अः



Jindal Vidya Mandir, JSW Hill Side Township
Term- I Examination (2024-25)

SET-A

Class: I/ Sec: _____

Sub: GK

Name: _____

Invigilator's Signature: _____

Duration: 1Hr

Max Marks: 25

Roll no: _____

Date: _____

General Instructions:

- This question paper consists of 4 pages and has 8 main questions.
- All the questions are compulsory.

I. Unscramble the letters and write the correct names of sports.

2X1=2



1. (KTBLAESBLA) _____



2. (ISENTN) _____


II. Read the clues and name the members of the sky family.

3X1=3

1.It is a big ball of fire. It rises in the morning.



2.It has seven colors and appears after the rain.



3.It shines during the night and changes shape with each passing day.



III. Identify the modes of transport given in the help box and write them under the correct column.

6X½=3

hot air balloon, ship, train, bus, motorboat, aeroplane

Land Transport	Water Transport	Air Transport

IV. Draw lines to match the different monuments names with the city they are in.

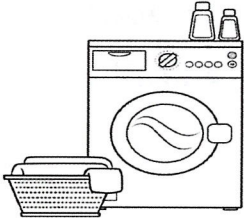
5X1=5


- | | |
|---------------------|-------------|
| 1. India Gate | • Agra |
| 2. Charminar | • Mumbai |
| 3. Golden Temple | • Delhi |
| 4. Taj Mahal | • Amritsar |
| 5. Gateway of India | • Hyderabad |

V. Identify the machines that are a part of our home. Name them using the help box.

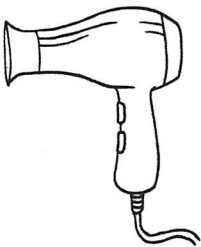
4X1=4

refrigerator, vacuum cleaner, washing machines, hair dryer










VI. Fill in the missing letters to complete the names of homes of these animals. 4X½ = 2

1. I am a sheep. I live in a p ____ n

2. I am a honeybee. I live in b __ e h __ v ____

VII. Circle the domestic animals in the given picture.

6X½ =3



VIII. Read the steps given below, number them in the correct order to plant the seeds.

6X½ =3

- I cover the seeds with the soil.
- I pour water into the pot.
- I give my seeds a lot of sunshine.
- I drop some seeds into the hole.
- I wait for my new plant to grow!
- I place some soil into the pot.