

Jindal Vidya Mandir, JSW Hill Side Township
Term-I Examination (2024-25)

Set- A

Class: II/ Sec: _____

Max Marks: 40

Sub: EVS

Duration: 2 Hrs

Name: _____

Roll No: _____

Invigilator's Signature: _____

Date: _____

General Instructions:

- This question paper is printed in 4 pages and 27 questions.
- It consists of two sections A and B. Section A has objective type questions and section B has subjective type questions.
- All the questions are compulsory.

Section-A

I. Choose the correct word from the box to fill in the blanks.

5X1=5M

posture share standing subjects queue

1. The way in which someone holds their body is called _____.
2. We should stand in a _____ while boarding the school bus.
3. Family members _____ works and responsibility.
4. Mosquitoes breed in _____ water.
5. Different teachers teach us different _____.

II. Write True (T) or False (F) for the following sentences.

5X1=5M

6. Cover your mouth with a handkerchief while coughing. ()
7. A joint family has many members. ()
8. Vegans do not eat anything made from milk. ()
9. Food items rich in proteins are called energy giving food. ()
10. A nuclear family is usually bigger than a joint family. ()

III. Give two examples of each of the following.

10 X 0.5= 5M

11. Harvest festivals: _____, _____
12. Internal organs: _____, _____
13. Shrubs: _____, _____
14. Domestic animals: _____, _____
15. Body- building foods: _____, _____

IV. Give one example of each of the following.

3X1 =3M

16. Seed from which we get oil: _____
17. Tree whose wood is used to make furniture: _____
18. Flower of a plant eaten as a vegetable: _____

V. Name the festival.

2X1 =2M

19. Birthday of Gautama Buddha: _____
20. Festival of lights: _____

Section-B

VI. Answer the following questions in two sentences.

3X2=6M

21. What is First aid?

22. Write any two good habits to stay clean.

23. Write any two parts of plant and their specific role.

VII. Answer the following questions in three sentences.

2X3=6M

24. Write any three ways in which we can take care of our school.

25. Name any three people and their role who help you at school?

26. Draw and name any two neighbourhood places.

2X2= 4M

--	--

27. Draw and name any two external organs.

2x2= 4M

--	--



Jindal Vidya Mandir, JSW Hill Side Township
Term - I Examination: (2024-25)

SET - A

Class II/Sec: _____

Max. Marks:25

Subject: Information Technology

Duration:1hr

Student Name: _____

Roll No: _____

Invigilator's Signature: _____

Date: _____

General Instructions:

- This question paper consists of 3 pages with VI main heading.
- All questions are compulsory.

I. Choose the correct answer.

5 X 1 =5M

1. _____ is used to take live photos and videos.
(a) Scanner (b) Web camera (c) Printer (d) Microphone
2. A _____ uses computer to launch rockets.
(a) scientist (b) banker (c) teacher (d) architect
3. Which of these intelligent machines work on your voice commands?
(a) Keyboard (b) Alexa (c) Roomba (d) Self-driving car
4. What should be turned on first to start a computer?
(a) Monitor (b) UPS (c) Power switch (d) CPU
5. What is the use of computers at an airport?
(a) Booking tickets (b) Print bills (c) Video conferencing (d) Calculations

II. State whether given statements are True or False:

5 X 1 =5M

1. A computer makes many mistakes.
2. Double-clicking on application icon opens it.
3. Computer help architects to design homes and buildings.

4. A mouse has one button and a wheel in the centre.
5. The start button is at the bottom-right corner of the desktop.

III. Fill in the blanks.

5x1=5M

1. _____ are small pictures that appear on the desktop.
2. Computers are used to send and receive _____ in an office.
3. The DVD drive is inside the _____ box.
4. _____ have special apps that can provide information, like the weather or directions.
5. _____ is the time taken by a computer to start.

IV. Match the following.

4 X 1 =4M

A	B	
1. VDU	Money	()
2. ATM	Robot	()
3. Task bar	Visual Display Unit	()
4. Roomba	Long horizontal	()

V. Answer the following questions in two/three sentences:

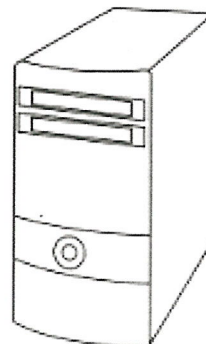


2 X 2 =4M

1. What is Artificial Intelligence?

2. Write two uses of computer in schools.

VI. Identify and write parts of a computer.

4x $\frac{1}{2}$ = 2M





Jindal Vidya Mandir, JSW Hill Side Township

Term – 1 Examination (2024-25)

SET-A

Class : II/ Sec : _____

Duration: 1Hr

Subject : Kannada(III Language)

Max. Marks :25

Name : _____

Roll No. : _____

Invigilator's Sign : _____

Date : _____

General Instructions: *This question paper contains 3 pages and 5 mains.

*All questions are compulsory.

I. ಈ ಕೆಳಗೆ ಕೊಟ್ಟಿರುವ ಸ್ಥಳಗಳಲ್ಲಿ ಸರಿಯಾದ ಅಕ್ಷರಗಳನ್ನು ತುಂಬಿರಿ.

5X1=5

(Choose the correct letter and fill in the blanks)

(ಋ, ಌ, ಁ, ಂ, ಃ)

ಅ	ಆ	ಇ	ಈ	ಉ	ಊ		ಎ	ಏ	
---	---	---	---	---	---	--	---	---	--

ಒ	ಓ			
---	---	--	--	--

II. ಈ ಕೆಳಗೆ ಕೊಟ್ಟಿರುವ ವ್ಯಂಜನಾಕ್ಷರಗಳನ್ನು ಸರಿಯಾದ ಕ್ರಮದಲ್ಲಿ ಜೋಡಿಸಿ ಬರೆಯಿರಿ.

(Rearrange and write the following consonants in order)

5X1=5

1. ಖ, ಕ, ಗ, ಙ, ಘ -

--	--	--	--	--

2. ಚ, ಞ, ಛ, ಝ, ಜ -

--	--	--	--	--

3. ಡ, ಟ, ಠ, ಡ, ಢ -

--	--	--	--	--

4. ಥ, ತ, ದ, ನ, ಧ -

--	--	--	--	--

5. ಪ, ಭ, ಫ, ಮ, ಬ -

--	--	--	--	--


III. ಈ ಕೆಳಗೆ ಕೊಟ್ಟಿರುವ ಚಿತ್ರಗಳನ್ನು ಗಮನಿಸಿ, ಅವುಗಳ ಹೆಸರುಗಳನ್ನು ಬರೆಯಿರಿ.

5x1=5


(Observe the following pictures, and write their names)

(ತಬಲ , ಹಂಸ , ಶಂಖ , ಸರ , ಫಲ)

1.



2.



3.



4.



5.



IV. ಈ ಕೆಳಗೆ ಕೊಟ್ಟಿರುವ ಅಕ್ಷರಗಳ ಮೊದಲ, ಮಧ್ಯದ ಹಾಗೂ ನಂತರದ ಅಕ್ಷರಗಳನ್ನು ಗುರುತಿಸಿ ಬರೆಯಿರಿ.

5x1=5

(Write the letters which comes before, between and after)

Before

Between

After

1. _____ ಧ

2. ಸ _____ ಳ

3. ಭ _____

4. _____ ಛ

5. ಖ _____ ಘ

V. ಈ ಕೆಳಗೆ ಕೊಟ್ಟಿರುವ ಕೋಷ್ಟಕದಲ್ಲಿರುವ ಅಕ್ಷರಗಳ ಸಹಾಯದಿಂದ ಐದು ಪದಗಳನ್ನು ಗುರುತಿಸಿ ಬರೆಯಿರಿ.

5x1=5

(Extract the five words from the given word search)

ಅ	ರ	ಮ	ಟ	ಮ
ರ	ಸ	ಪ	ಪ	ನ
ಸ	ಮ	ನ	ಯ	ನ
ಕ	ರ	ಹ	ವ	ಳಿ
ದ	ತ	ಬ	ಲಿ	ವು

1. _____

2. _____

3. _____

4. _____

5. _____



Jindal Vidya Mandir, JSW Hill Side Township
Term -I Examination (2024-25)

Class/Sec: II/ _____

SET-A

Duration :1 Hour

Sub: Hindi (III Language)

Max Marks: 25M

Name : _____

Roll No. : _____

Date : _____

Invigilator's Sign. : _____

General Instructions:

- सभी प्रश्न अनिवार्य हैं।
- कुल 5 प्रश्न हैं।

1) खाली जगह में उचित स्वरों को लिखिए।

(5 X1M=5M)

(Fill in blanks with correct vowels)

अ _____ इ ई उ _____ ऋ _____ ऐ _____

औ अं _____ ।

2) व्यंजनों को उचित क्रम में लिखिए।

(2 X2M=4M)

(Arrange consonants in the proper order.)

घ क ख ड ग







ध द न त थ

(P.T.O)

3) चित्रों को पहचान कर उसके नाम का पहला अक्षर लिखो ।

(6 X1M=6M)

(Identify pictures and write first letter of their names.)

	_____
	_____
	_____
	_____
	_____
	_____

4) दिए गए वर्णों से चित्र बना कर रंग भरिए।

(2 X2M=4M)

(Draw pictures of the letters mentioned)

ग	झ

5) दिए गए वर्ण के अगले दो वर्णों को लिखिए।

(6X1M=6M)

(Write the next two letter of given letter)

1)	छ	____/____
2)	ट	____/____
3)	द	____/____
4)	र	____/____
5)	य	____/____
6)	क	____/____



Jindal Vidya Mandir, JSW Hill Side Township
Term-I Examination (2024-25)
Set- A

Class: II / Sec: _____

Max Marks: 25

Sub: GK

Duration: 1Hr

Name: _____

Roll No: _____

Invigilator's Signature: _____

Date: _____

General Instructions:

- This question paper is printed in 4 pages and 25 questions.
- All the questions are compulsory.

Section-A

I. Choose the correct word from the box to fill in the blanks.

5X1=5M

cobra	cycle	shrimp	continent	natural
-------	-------	--------	-----------	---------

1. To defeat the evil _____ the crows dropped a stolen necklace in its burrow.
2. The heart of a _____ is located in its head.
3. The continuous movement of water from land to sky and back again is called the water _____.
4. Natural light is the light we get from _____ sources.
5. Europe is the second smallest _____ in the world.

II. Write the full forms of technology related terms.

5X1=5M

6. RAM: _____

7. GB: _____

8. CPU: _____

9. CD: _____

10. OS: _____

III. Choose the correct answer.

5X1=5M

11. Which animal provides us wool?

- a. bear b. sheep c. monkey d. elephant

12. Which animal provides us egg?

- a. hen b. yak c. cat d. camel

13. Which animal provides us milk?

- a. hen b. fish c. tortoise d. camel

14. Which animal carries soldiers on their backs during war?

- a. giraffe b. zebra c. horse d. hippopotamus

15. Which animal takes people from one place to another on a sleigh?

- a. whale b. reindeer c. camel d. sheep

IV. Unscramble the letters to find answers to the clues.

5x1=5M

16. World's tallest building _____. (UBJR HILKAFA)

17. World's largest country _____. (IASURS)

18. World's highest mountain peak _____. (TM TREESVE)

19. World's longest river _____. (LEIN)

20. World's longest hot desert _____. (AAAHRS)

V. Answer the following questions

5x1=5M

21. Name any two cardinal directions.

22. Write the name of any one plant with its use.

23. Name any two aquatic animals.

24. Name any one book with its author.

25. Name any two uncommon modes of transport found across the world.



Jindal Vidya Mandir, JSW Hill Side Township

Term-I Examination (2024-25)

Set - A

Class: II/ Sec: _____

Sub: English

Name: _____

Invigilator's Signature: _____

Max Marks: 40

Duration: 2Hrs

Roll no: _____

Date: _____

General Instructions:

- This paper consists 7 pages and 14 main questions
- Question paper is divided into four sections, Section A(Reading), Section B (Writing), Section C (Grammar), Section D(Literature)
- All the questions are compulsory.

Section –A (Reading)

I. Read the passage and answer the questions.

1X4=4M

Sara was excited about her upcoming school trip to the zoo. She had been learning about different animals in the class and couldn't wait to see them close. On the day of the trip, she and her classmates boarded the bus and headed to the zoo. As they walked through the gates, Sara saw lions, giraffes, monkeys and even a playful dolphin show. It was a day filled with fun and learning.

A. Choose the correct option

1. Sara was excited about her _____.

[final exam, school trip to the zoo]

2. She had been learning about _____.

[different animals, different countries]

3. What animals did Sara see at the zoo?

Ans: _____

4. How did Sara feel about her day at the zoo?

Ans: _____

II. Read the poem and answer the questions that follow.

1X4=4M

Summer, Summer, Is almost here,
Time for fun, And swimming gear,
Trips to the beach, Are always such fun,
Along with baseball, And games where we run.
Summer, Summer, Is almost here,
I can hardly wait, Let's give a big Cheer!!!

1. Where do you go for trips in summer?

Ans: _____.

2. Complete the sentence from the poem.

a. Along with baseball and _____

3. Write rhyming words for the given words

a. run - _____

b. cheer - _____

Section-B (Writing)

III. Write a letter to your friend inviting him/her to spend summer vacation with you.

1X4=4M

IV. Observe the picture and write four sentences about it. Use the words from the help box.

1X4=4M

sunny, enjoying, children, five, park, sandwiches



1. _____

2. _____

3. _____

4. _____

Section- C (Grammar)

V. Underline the “common nouns” and circle the “proper nouns”.

½X4=2M

1. The beautiful girl was called Monalisa.
2. Rahul presented a bag to his sister.
3. Mala went out to play in the park.
4. The Taj Mahal is a famous monument.

VI. Choose the correct words from the boxes and fill in the blanks. Write “C” if the noun is countable and “U” for uncountable.

oil,	languages,	cars,	milk
------	------------	-------	------

½X4=2M



1. I also want some _____ to drink. ☐
2. There are three _____ in the parking. ☐
3. There is no _____ in the lamps. ☐
4. I want to learn many _____. ☐

VII. Write plural forms of the given nouns.

½X4=2M

1. carrot _____
2. leaf _____
3. lorry _____
4. daisy _____

VIII. Look at the pictures and write their names in “Common gender” and “Neuter gender” columns. **$\frac{1}{2} \times 4 = 2M$**



Common gender	Neuter gender

IX. Circle the “adjectives of number” and underline the “adjectives of quantity” in these sentences. **$\frac{1}{2} \times 4 = 2M$**

1. Few students have gone to see match today.
2. Manish won one silver medal for his bravery.
3. Most of the people use their mobile phones to see the time.
4. I am tenth in the queue.

X. Fill in the blanks with articles ‘a’, ‘an’ and ‘the’.

$\frac{1}{2} \times 4 = 2M$

1. John wanted to read _____ comic book.
2. Can I get you _____ apple to eat ?
3. She is always smiling and kind to _____ students.
4. He is _____ best in this subject.

Section-D (Literature)

XI. Read the extract and answer the questions from the extract.

1X3=3M

One rainy day on my way home from school, I found a big worm and thought it was cool. I picked up the worm with my bare hand, held it up high, thinking how grand! The worm was so cute and wiggled a lot. I put him in my pocket to show Mom what I had caught.

A. Complete these sentences from the given extract

1. The child found the worm and thought _____.
2. The worm was so cute _____.

B. Write a pair of rhyming words from the poem extract.

Ans: _____

XII. Read the extract and answer the questions from the extract.

1X3=3M

Till I look down on the garden green,
Down on the roof so brown
Up in the air I go flying again,
Up in the and down!

A. What does child see as he comes down before he goes up again?

Ans: _____

B. Write a pair of rhyming words from the poem extract

Ans: _____

C. Write the name of the poem.

Ans: _____

XIII. Write True or False for the given below sentences.

1X2=2M

1. Kiki lived in a short guava tree. _____
2. The king was a brave and kind ruler. _____

XIV. Answer the following questions.

1X4=4M

1. What happened to the king in the battle?

Ans: _____

2. Why do you think all the animals refuse to help Bukka?

Ans: _____

3. Why had Polly come late that week?

Ans: _____

4. Why was Croc in a fix?

Ans: _____

Jindal Vidya Mandir, JSW Hill Side Township

Term - I Examination (2024-25)

Class : II /Sec:

Set-A

Max.Marks: 40

Sub : Hindi (II Language)

Duration : 2hrs

Name : _____

Date: _____

Invigilator's Sign: _____

RollNo. _____

General Instructions:

- 1) सभी प्रश्नों को हल करना अनिवार्य है।
- 2) कुल प्रश्न संख्या 8 है।

प्रश्न I. अपठित गद्यांश को पढ़कर सही उत्तर लिखो -

5X1=5

छुटकी आठ साल की है। उसके पास एक घोड़ा है। उसके घोड़े का नाम रॉकेट है। रॉकेट बहुत तेज़ दौड़ता है। एक दिन घोड़ा दौड़ते हुए शहर से बाहर चला गया।

(1) छुटकी कितने साल की थी ?

(क) दो (ख) आठ (ग) बड़ी (घ) चार

(2) छुटकी के पास क्या था ?

(क) मेज (ख) जूता (ग) गाँव (घ) घोड़ा

(3) घोड़े का क्या नाम था ?

(क) गुब्बारा (ख) शाम (ग) रॉकेट (घ) हीरो

(4) गद्यांश में से अंदर और दूर का विलोम शब्द ढूँढकर लिखो।

उत्तर :- अंदर X _____ दूर X _____

प्रश्न II) दिए गए शब्दों के समानलय शब्द लिखिए।

2X1=2

क) फूली = _____ (मूली / तारा)

ख) आला = _____ (चली / माला)

प्रश्न III) दिए गए शब्दों के सही विलोम शब्द चुनकर लिखिए -

2X1=2

क) उल्टा X _____ (पास / सीधा)

ख) आगे X _____ (पीछे / नीचे)

प्रश्न IV) नीचे दिए गए शब्दों के एक – एक पर्यायवाची शब्द लिखिए ।

2X1=2

क) हवा -- _____

ख) पैर -- _____

प्रश्न V) नीचे दिए गए शब्दों के लिंग बदल कर लिखिए ।

2X1=2

क) दादा -- _____ (दादू / दादी)

ख) शेर -- _____ (शेरनी / कार)

प्रश्न VI) नीचे दिए गए शब्दों के वचन बदल कर लिखिए ।

2X1=2

क) झूला -- _____ (अब / झूले)

ख) पेंसिल -- _____ (पेन / पेंसिलें)

प्रश्न VII) दिए गए वाक्य किसने कहे हैं? सही उत्तर को छाँट कर लिखो ।

2X1=2

क) दीदी चलो, हम भी बारिश में भीगते हैं । _____ (रोहित , लूडो)

ख) हमारे गूगल सर्च तो दादा जी ही हैं । _____ (टप्पू , मिनी)

प्रश्न VIII) दो-दो नुक्ता वाले शब्द लिखिए ।

2X1=2

1) फ़ _____

2) ज़ _____

प्रश्न IX) नीचे दिए गए प्रश्नों के उत्तर एक वाक्य में दीजिये-

5X1=5

1) पायल कैसी लड़की थी ?

उत्तर-----

2) रोहित और नीना के मित्र घरों से क्यों निकल पड़े ?

उत्तर-----

3) मानव और मानसी पहली बार हवाई जहाज से कहाँ आए थे ?

उत्तर-----

4) खिलौने क्यों उदास थे ?

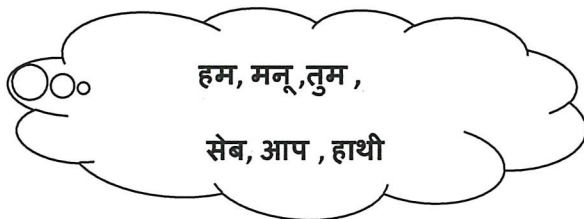
उत्तर-----

5) सांता क्लॉज कब आते हैं ?

उत्तर-----

प्रश्न X) संज्ञा और सर्वनाम शब्दों को छाँट कर अलग-अलग लिखिए -

6X1=6



संज्ञा 1) _____ 2) _____ 3) _____

सर्वनाम 1) _____ 2) _____ 3) _____

प्रश्न XI) 'मेरा स्कूल' पर अनुच्छेद लेखन 5 पंक्तियों में लिखें ।

5X1=5

प्रश्न XII) नीचे दिए गए चित्र को देख कर 5 वाक्यों में वर्णन करें-

5X1=5





Jindal Vidya Mandir,JSW Hill Side Township
Term 1 Examination (2024-2025)

Set-A

Class:II / Sec _____

Subject:Kannada(II Language)

Name: _____

Invigilator's sign: _____

Max.Marks :40

Duration:2 Hours

Roll.No _____

Date: _____

ಸೂಚನೆಗಳು:

* ಈ ಪ್ರಶ್ನೆ ಪತ್ರಿಕೆಯು ಎ, ಬಿ, ಸಿ ಮತ್ತು ಡಿ ಎಂಬ ಭಾಗಗಳನ್ನು ಒಳಗೊಂಡಿರುತ್ತದೆ.

* ಈ ಪ್ರಶ್ನೆ ಪತ್ರಿಕೆಯು ಒಟ್ಟು 11 ಮುಖ್ಯ ಪ್ರಶ್ನೆಗಳನ್ನು ಹಾಗೂ 4 ಪುಟಗಳನ್ನು ಒಳಗೊಂಡಿದೆ.

* ಪ್ರತಿಯೊಂದು ಪ್ರಶ್ನೆಗಳು ಕಡ್ಡಾಯವಾಗಿದ್ದು, ಸೂಚನೆಗಳನ್ನು ಸರಿಯಾಗಿ ಓದಿಕೊಂಡು ಉತ್ತರಿಸಿರಿ.

ಭಾಗ-A	ವಾಚನ ಗ್ರಹಿಕ ಕೌಶಲ್ಯ	10 ಅಂಕಗಳು
ಭಾಗ-B	ಬರವಣಿಗೆ ಕೌಶಲ್ಯ	10 ಅಂಕಗಳು
ಭಾಗ-C	ಅನ್ವಯಿಕ ವ್ಯಾಕರಣ	10 ಅಂಕಗಳು
ಭಾಗ-D	ಪಠ್ಯಗಳ ಅಧ್ಯಯನ	10 ಅಂಕಗಳು
	ಒಟ್ಟು ಅಂಕಗಳು	40 ಒಟ್ಟು ಅಂಕಗಳು

(ಭಾಗ- A ವಾಚನ ಗ್ರಹಿಕ ಕೌಶಲ್ಯ)

I. ಈ ಕೆಳಗೆ ಕೊಟ್ಟಿರುವ ಪಠ್ಯೇತರ ಗದ್ಯ ಭಾಗವನ್ನು ಓದಿಕೊಂಡು, ಕೆಳಗಿನ ಪ್ರಶ್ನೆಗಳಿಗೆ ಉತ್ತರಿಸಿರಿ. 5x1=5

ರಾಕೇಶ ಒಬ್ಬ ಒಳ್ಳೆಯ ಹುಡುಗನಾಗಿದ್ದನು. ಅವನು ಅವನ ಗೆಳೆಯರೊಂದಿಗೆ ತುಂಬಾ ಒಳ್ಳೆಯ ರೀತಿಯಿಂದ ಇರುತ್ತಿದ್ದನು. ಧರ್ಮ, ಮೋಕ್ಷಿತ, ವಿಶ್ವನಾಥ, ಅನಿತಾ ಅವನ ನೆಚ್ಚಿನ ಗೆಳೆಯರಾಗಿದ್ದರು. ತನ್ನ ಪ್ರತಿದಿನದ ಆಟ ಪಾಠಗಳನ್ನು ಅವರೊಂದಿಗೆ ಹಂಚಿಕೊಳ್ಳುತ್ತಿದ್ದನು. ಶಿಕ್ಷಕರು ಕೊಟ್ಟ ಗೃಹ ಕಾರ್ಯಗಳನ್ನು ಚರ್ಚಿಸುತ್ತಿದ್ದನು. ಒಂದು ದಿನ ಶಾಲೆಯಲ್ಲಿ ಓಟದ ಸ್ಪರ್ಧೆಯನ್ನು ಏರ್ಪಡಿಸಲಾಗಿತ್ತು. ರಾಕೇಶ ತನ್ನ ಗೆಳೆಯರೊಂದಿಗೆ ಓಟದ ಸ್ಪರ್ಧೆಯಲ್ಲಿ ಭಾಗವಹಿಸಿದ್ದನು. ಇತರ ಹುಡುಗರಲ್ಲ ರಾಕೇಶನನ್ನು ಗೆಲ್ಲುವಂತೆ ಉತ್ಸಾಹಿಸುತ್ತಿದ್ದರು. ರಾಕೇಶನು ಜಿಂಕೆಯಂತೆ ಜಿಗಿಯುತ್ತ ಓಡುತ್ತಿದ್ದನು. ಅವನ ಓಟವನ್ನು ನೋಡಿದ ಎಲ್ಲರೂ ಸಂತೋಷದಿಂದ ಗಹಗಹಿಸಿ ನಗುತ್ತಿದ್ದರು. ರಾಕೇಶನೇ ವೇಗವಾಗಿ ಓಡಿ ಸ್ಪರ್ಧೆಯನ್ನು ಗೆದ್ದನು.

ಪ್ರಶ್ನೆಗಳು :

1. ರಾಕೇಶ ಒಬ್ಬ _____ ಹುಡುಗನಾಗಿದ್ದನು.

(i)ಒಳ್ಳೆಯ (ii) ಕೆಟ್ಟ (iii) ದುರ್ಬಲ (iv) ನಿಷ್ಕಾವಂತ

2. ಶಾಲೆಯಲ್ಲಿ _____ ಸ್ಪರ್ಧೆಯನ್ನು ಏರ್ಪಡಿಸಲಾಗಿತ್ತು.

(i) ಆಟದ (ii) ಊಟದ (iii) ಓಟದ (iv) ವೇಷಭೂಷಣ

3. ರಾಕೇಶನು _____ ಜಿಗಿಯುತ್ತ ಓಡುತ್ತಿದ್ದನು.

(i) ಕಪ್ಪೆಯಂತೆ (ii) ಜಿಂಕೆಯಂತೆ (iii) ನವಿಲಿನಂತೆ (iv) ಮೊಲದಂತೆ

4. ಎಲ್ಲರೂ _____ ನಗುತ್ತಿದ್ದರು.

(i) ಗಹಗಹಿಸಿ (ii) ಮುಗುಳ್ಳಗೆ (iii) ಹುಸಿ ನಗೆ (iv) ಕಳ್ಳ ನಗೆ

5. ಓಟದ ಸ್ಪರ್ಧೆಯಲ್ಲಿ ಗೆದ್ದವರು _____

(i) ರಾಕೇಶ (ii) ರಾಜೇಶ (iii) ರೂಪೇಶ (iv) ಲಕ್ಷ್ಮೀಶ

II. ಈ ಕೆಳಗೆ ಕೊಟ್ಟಿರುವ ಪದಗಳ ಸಹಾಯದಿಂದ, 'ಅರಿವೇ ಗುರು' ಗದ್ಯಭಾಗವನ್ನು ಪೂರ್ಣಗೊಳಿಸಿರಿ. 5x1=5

(ಕಾಡು, ತೋಟದ, ಮೇವು, ಧ್ವನಿಯನ್ನು, ಮನದಲ್ಲೇ)

ಒಂದು ದಟ್ಟವಾದ _____. ಅಲ್ಲಿ ನರಿ ಮತ್ತು ಅದರ ಮರಿ ಆಹಾರಕ್ಕಾಗಿ ಅಲೆದವು. ಆದರೆ ಎಲ್ಲಾ ಏನೂ ಸಿಗಲಿಲ್ಲ. ತಿರುಗುತ್ತಾ, ತಿರುಗುತ್ತಾ ಕಾಡಿನಿಂದ ಹೊರಬಂದವು. ಅವುಗಳಿಗೆ ದೂರದಲ್ಲಿ _____ ಮನೆಯೊಂದು ಕಾಣಿಸಿತು. ಕೊ ಕೊ ಕೊ ಎಂಬ ಸದ್ದು ಸಹ ಕೇಳಿಸಿತು. ಅವು _____ ಅನುಸರಿಸಿಕೊಂಡು ಹೋದವು. ಕೋಳಿಗಳು ತೋಟದ ಬೇಲಿ ಸಾಲಿನಲ್ಲಿ _____ ಆರಿಸುತ್ತಿದ್ದವು. ಕೋಳಿಗಳನ್ನು ಕಂಡು ನರಿಯ ಮರಿ _____ ಹಿಗ್ಗಿತು.

(ಭಾಗ-B ಬರವಣಿಗೆ ಕೌಶಲ್ಯ)

III. ಈ ಕೆಳಗೆ ಕೊಟ್ಟಿರುವ ಚಿತ್ರವನ್ನು ಗಮನಿಸಿ, ಕೊಟ್ಟಿರುವ ಪದಗಳನ್ನು ಬಳಸಿ, ಐದು ವಾಕ್ಯಗಳನ್ನು

ರಚಿಸಿರಿ.

1x5=5

(ಸಂತೆ, ಜನ, ಮರಗಳು, ಸಂತೋಷ, ಬಣ್ಣ ಬಣ್ಣದ)



IV. ಈ ಕೆಳಗೆ ಕೊಟ್ಟಿರುವ ವಿಷಯದ ಕುರಿತು, ಮೂರು ನಾಲ್ಕು ವಾಕ್ಯಗಳ ಸಂಕ್ಷಿಪ್ತ ವಿವರಣೆ ನೀಡಿರಿ. 1x5=5

ಮರಗಳ ಉಪಯೋಗ ಅಥವಾ ಯೋಧ

(ಭಾಗ-C ಅನ್ವಯಿಕ ವ್ಯಾಕರಣ)

V. ಈ ಕೆಳಗೆ ಕೊಟ್ಟಿರುವ ಗಾದೆ ಮಾತುಗಳನ್ನು ಪೂರ್ಣಗೊಳಿಸಿರಿ.

2x1=2

1. ತಾಯಿಗಿಂತ ಬಂಧುವಿಲ್ಲ, _____

2. ಗುಣ ನೋಡಿ _____

VI. ಈ ಕೆಳಗೆ ಕೊಟ್ಟಿರುವ ಅಕ್ಷರಗಳನ್ನು ಸರಿಯಾಗಿ ಜೋಡಿಸಿ ಬರೆಯಿರಿ.

2x1=2

1. ರೆಕುದು = _____ 2. ಕುಹುಡು = _____

VII. ಈ ಕೆಳಗೆ ಕೊಟ್ಟಿರುವ ಪಠ್ಯೇತರ ಪದ್ಯ ಭಾಗವನ್ನು ಓದಿಕೊಂಡು, ಎರಡು ಪ್ರಾಸ ಪದಗಳನ್ನು ಬರೆಯಿರಿ.

2x1=2

ಇರುವ ಇರುವ ಕಪ್ಪು ಇರುವ
ನೀನು ಎಲ್ಲಿಗೆ ಹೋಗುತ್ತಿರುವೆ?
ನಾನು ನಿನ್ನ ಜೊತೆಗೆ ಬರುವೆ
ಹಾಗೆ ತಿನ್ನಲು ಕಾಳನ್ನು ತರುವೆ!

ಕಲ್ಲು ಮುಳ್ಳು ಮಣ್ಣು ನಡುವೆ
ಗೆಲೆಯರೊಡನೆ ಕೂಡಿ ನಡೆವೆ
ದುಡಿಮೆಯೇ ದೇವರೆಂದು ದುಡಿವೆ
ಕಾಳು ಕಾಳು ಕೂಡಿಸಿಡುವೆ!

1. _____ 2. _____

VIII. ಈ ಕೆಳಗೆ ಕೊಟ್ಟಿರುವ ಪದಗಳ ವಚನಗಳನ್ನು ಬದಲಿಸಿ ಬರೆಯಿರಿ.

2x1=2

1. ಕಾಡು - _____ 2. ಶಿಲ್ಪಿಗಳು - _____

IX. ಈ ಕೆಳಗೆ ಕೊಟ್ಟಿರುವ ಪದಗಳ ಜೋಡುನುಡಿಗಳನ್ನು ಬರೆಯಿರಿ

2x1=2

1. ಬೆಟ್ಟ - _____ 2. ಬಂಧು - _____

X. ಈ ಕೆಳಗೆ ಕೊಟ್ಟಿರುವ ಮಾತುಗಳನ್ನು ಯಾರು - ಯಾರಿಗೆ ಹೇಳಿದರು?

2x2=4

1. " ಪ್ರತಿಯೊಬ್ಬರಲ್ಲಿಯೂ ಅವರದೇ ಆದ ವಿಶೇಷತೆ ಇರುತ್ತದೆ."
ಯಾರು ಹೇಳಿದರು ? _____
ಯಾರಿಗೆ ಹೇಳಿದರು ? _____
2. "ಅಲ್ಲಿ ನೋಡಿ, ಫಮಫಮಿಸುವ ಹೂಗಳು."
ಯಾರು ಹೇಳಿದರು ? _____
ಯಾರಿಗೆ ಹೇಳಿದರು ? _____

XI. ಈ ಕೆಳಗೆ ಕೊಟ್ಟಿರುವ ಪ್ರಶ್ನೆಗಳಿಗೆ ಒಂದು ವಾಕ್ಯಗಳಲ್ಲಿ ಉತ್ತರಿಸಿರಿ.

6x1=6

1. ಮಗು ತಿನ್ನಲು ಏನನ್ನು ಕೊಡಿಸುವೆನು ಎಂದಿತು?
ಉ _____
2. ಮಂತ್ರಿ ಮಗಳು ಯಾವ ಆಟವನ್ನು ಆಡಿದಳು?
ಉ _____
3. ಯಾರು ಯಾರು ಒಳ್ಳೆಯ ಗೆಳೆಯರಾಗಿದ್ದರು?
ಉ _____
4. ಹಕ್ಕಿಯ ಮರಿಗಳು ಏನೆಂದು ಹಾಡಿದವು?
ಉ _____
5. ಸಂತೆಯಲ್ಲಿ ಯಾವ ಆಟ ಆಡುತ್ತಿದ್ದರು?
ಉ _____
6. ಭೂಮಿ ಏನನ್ನು ಹೊದ್ದು ನಿಂತಿದೆ?
ಉ _____



Jindal Vidya Mandir, JSW Hill Side Township
Term-I Examination (2024-25)

Set A

Class II/ Sec : ____

Duration: 2hrs

Subject: Mathematics

Max Marks: 40

Name : _____

Roll No: _____

Invigilator's signature : _____

Date: _____

General Instructions:

i) This question paper contains 9 main questions in 4 pages.

ii) All questions are compulsory.

Section A

5X1M=5M

I) Choose the correct answer.

1) The product of 4 and 6 is _____.

A) 20

B) 16

C) 24

D) 0

2) $400+5$ is written as _____.

A) 415

B) 405

C) 450

D) 524

3) Which of the following adds upto 25 _____.

A) $10 + 5$

B) $19 + 4$

C) $20 + 6$

D) $19 + 6$

4) The difference of 120 and 220 is _____.

A) 100

B) 200

C) 80

D) 320

5) Division can also be shown as repeated _____.

A) addition

B) subtraction

C) multiplication

D) division

II) State whether the following statements are true or false.

5X1M=5M

- 1) The place value of 4 in 452 is 4 hundreds _____
- 2) 89 is an even number. _____
- 3) $6 + 6 + 6 = 3 \times 6$ _____
- 4) $173 + 45 = 218$ _____
- 5) 41 is 3 less than 45 _____

III) In the word CRICKET

2X1M=2M

- 1) Letter K is at _____ place.
- 2) Letter _____ is at 7th place.

IV) Multiply the following.

3X1M=3M

- 1) $2 \times 5 = \underline{\quad}$
- 2) $3 \times \underline{\quad} = 27$
- 3) $4 \times \underline{\quad} = 28$

V) Use >, < or = sign to compare.

3X1M=3M

- 1) 246 _____ 542
- 2) 400 _____ 399
- 3) 734 _____ 704

VI) Colour the minuend yellow and difference in green.

2X1M=2M

40	—	9	=	31
----	---	---	---	----

Section B

VII) Do as directed.

1. Write the number names.

5X2M=10 M

a) $712 = \underline{\hspace{2cm}}$

b) $340 = \underline{\hspace{2cm}}$

2. Arrange in columns and add 3 hundreds 2 tens and 4 hundreds 6 ones.













H	T	O

3. Arrange the following numbers in descending order.

441 , 289 , 346 , 651

_____ , _____ , _____ , _____

4. Draw boxes to make groups and write division sentences for each.

Group of 4						
						

Division Sentence: _____

5. Write the ordinal number of 2 more than 7 ones.

Section C

VIII) Do as directed.

1) Subtract the following and verify the answer.

2X3M=6M

Subtraction

$$\begin{array}{r}
 \text{T O} \\
 65 \\
 - 28 \\
 \hline
 \boxed{}
 \end{array}$$

Verification

T	O

2) Find out total number of bangles using repeated addition and multiplication sentence.



Repeated addition = _____

Multiplication Sentence = _____

Section D

IX) A Shopkeeper sold 256 tennis balls on Monday, 118 tennis balls on Tuesday and 17 tennis balls on Friday.

1) On which day he sell most number of balls? _____ **1M**

2) How many less number of tennis balls did he sell on Tuesday than on Monday ? **3M**



Jindal Vidya Mandir, JSW Hill Side Township
Term-I Examination (2024-25)

Set- A

Class: II/ Sec: _____

Max Marks: 40

Sub: EVS

Duration: 2 Hrs

Name: _____

Roll No: _____

Invigilator's Signature: _____

Date: _____

General Instructions:

- This question paper is printed in 4 pages and 27 questions.
- It consists of two sections A and B. Section A has objective type questions and section B has subjective type questions.
- All the questions are compulsory.

Section-A

I. Choose the correct word from the box to fill in the blanks.

5X1=5M

posture share standing subjects queue

1. The way in which someone holds their body is called _____.
2. We should stand in a _____ while boarding the school bus.
3. Family members _____ works and responsibility.
4. Mosquitoes breed in _____ water.
5. Different teachers teach us different _____.

II. Write True (T) or False (F) for the following sentences.

5X1=5M

- 6. Cover your mouth with a handkerchief while coughing. ()
- 7. A joint family has many members. ()
- 8. Vegans do not eat anything made from milk. ()
- 9. Food items rich in proteins are called energy giving food. ()
- 10. A nuclear family is usually bigger than a joint family. ()

III. Give two examples of each of the following.

10 X 0.5= 5M

- 11. Harvest festivals: _____, _____
- 12. Internal organs: _____, _____
- 13. Shrubs: _____, _____
- 14. Domestic animals: _____, _____
- 15. Body- building foods: _____, _____

IV. Give one example of each of the following.

3X1 =3M

- 16. Seed from which we get oil: _____
- 17. Tree whose wood is used to make furniture: _____
- 18. Flower of a plant eaten as a vegetable: _____

V. Name the festival.

2X1 =2M

- 19. Birthday of Gautama Buddha: _____
- 20. Festival of lights: _____

Section-B

VI. Answer the following questions in two sentences.

3X2=6M

21. What is First aid?

22. Write any two good habits to stay clean.

23. Write any two parts of plant and their specific role.

VII. Answer the following questions in three sentences.

2X3=6M

24. Write any three ways in which we can take care of our school.

25. Name any three people and their role who help you at school?

26. Draw and name any two neighbourhood places.

2X2= 4M

--	--

27. Draw and name any two external organs.

2x2= 4M

--	--



Jindal Vidya Mandir, JSW Hill Side Township
Term - I Examination: (2024-25)

SET - A

Class II/Sec: _____

Max. Marks:25

Subject: Information Technology

Duration:1hr

Student Name: _____

Roll No: _____

Invigilator's Signature: _____

Date: _____

General Instructions:

- This question paper consists of 3 pages with VI main heading.
 - All questions are compulsory.
-

I. Choose the correct answer.

5 X 1 =5M

1. _____ is used to take live photos and videos.
(a) Scanner (b) Web camera (c) Printer (d) Microphone
2. A _____ uses computer to launch rockets.
(a) scientist (b) banker (c) teacher (d) architect
3. Which of these intelligent machines work on your voice commands?
(a) Keyboard (b) Alexa (c) Roomba (d) Self-driving car
4. What should be turned on first to start a computer?
(a) Monitor (b) UPS (c) Power switch (d) CPU
5. What is the use of computers at an airport?
(a) Booking tickets (b) Print bills (c) Video conferencing (d) Calculations

II. State whether given statements are True or False:

5 X 1 =5M

1. A computer makes many mistakes.
2. Double-clicking on application icon opens it.
3. Computer help architects to design homes and buildings.

4. A mouse has one button and a wheel in the centre.
5. The start button is at the bottom-right corner of the desktop.

III. Fill in the blanks.

5x1=5M

1. _____ are small pictures that appear on the desktop.
2. Computers are used to send and receive _____ in an office.
3. The DVD drive is inside the _____ box.
4. _____ have special apps that can provide information, like the weather or directions.
5. _____ is the time taken by a computer to start.

IV. Match the following.

4 X 1 =4M

A	B	
1. VDU	Money	()
2. ATM	Robot	()
3. Task bar	Visual Display Unit	()
4. Roomba	Long horizontal	()

V. Answer the following questions in two/three sentences:

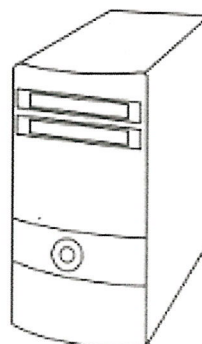


2 X 2 =4M

1. What is Artificial Intelligence?

2. Write two uses of computer in schools.

VI. Identify and write parts of a computer.

4x $\frac{1}{2}$ = 2M





Jindal Vidya Mandir, JSW Hill Side Township

Term – 1 Examination (2024-25)

SET-A

Class : II/ Sec : _____

Duration: 1Hr

Subject : Kannada(III Language)

Max. Marks :25

Name : _____

Roll No. : _____

Invigilator's Sign : _____

Date : _____

General Instructions: *This question paper contains 3 pages and 5 mains.

*All questions are compulsory.

I. ಈ ಕೆಳಗೆ ಕೊಟ್ಟಿರುವ ಸ್ಥಳಗಳಲ್ಲಿ ಸರಿಯಾದ ಅಕ್ಷರಗಳನ್ನು ತುಂಬಿರಿ.

5X1=5

(Choose the correct letter and fill in the blanks)

(ಋ, ಌ, ಁ, ಂ, ಃ, ಄, ಀ, ಁ)

ಅ	ಆ	ಇ	ಈ	ಉ	ಊ		ಎ	ಏ	
---	---	---	---	---	---	--	---	---	--

ಒ	ಓ			
---	---	--	--	--

II. ಈ ಕೆಳಗೆ ಕೊಟ್ಟಿರುವ ವ್ಯಂಜನಾಕ್ಷರಗಳನ್ನು ಸರಿಯಾದ ಕ್ರಮದಲ್ಲಿ ಜೋಡಿಸಿ ಬರೆಯಿರಿ.

(Rearrange and write the following consonants in order)

5X1=5

1. ಖ, ಕ, ಗ, ಙ, ಘ -

--	--	--	--	--

2. ಚ, ಞ, ಛ, ಝ, ಜ -

--	--	--	--	--

3. ಡ, ಟ, ಠ, ಡ, ಢ -

--	--	--	--	--

4. ಥ, ತ, ದ, ನ, ಧ -

--	--	--	--	--

5. ಪ, ಭ, ಫ, ಮ, ಬ -

--	--	--	--	--


III. ಈ ಕೆಳಗೆ ಕೊಟ್ಟಿರುವ ಚಿತ್ರಗಳನ್ನು ಗಮನಿಸಿ, ಅವುಗಳ ಹೆಸರುಗಳನ್ನು ಬರೆಯಿರಿ.

5x1=5


(Observe the following pictures, and write their names)

(ತಬಲ , ಹಂಸ , ಶಂಖ , ಸರ , ಫಲ)

1.



2.



3.



4.



5.



IV. ಈ ಕೆಳಗೆ ಕೊಟ್ಟಿರುವ ಅಕ್ಷರಗಳ ಮೊದಲ, ಮಧ್ಯದ ಹಾಗೂ ನಂತರದ ಅಕ್ಷರಗಳನ್ನು ಗುರುತಿಸಿ ಬರೆಯಿರಿ.

5x1=5

(Write the letters which comes before, between and after)

Before

Between

After

1. _____ ಧ

2. ಸ _____ ಳ

3. ಭ _____

4. _____ ಛ

5. ಖ _____ ಘ

V. ಈ ಕೆಳಗೆ ಕೊಟ್ಟಿರುವ ಕೋಷ್ಟಕದಲ್ಲಿರುವ ಅಕ್ಷರಗಳ ಸಹಾಯದಿಂದ ಐದು ಪದಗಳನ್ನು ಗುರುತಿಸಿ ಬರೆಯಿರಿ.

5x1=5

(Extract the five words from the given word search)

ಅ	ರ	ಮ	ಟ	ಮ
ರ	ಸ	ಪ	ಪ	ನ
ಸ	ಮ	ನ	ಯ	ನ
ಕ	ರ	ಹ	ಬ	ಳ
ದ	ತ	ಬ	ಲಿ	ಪ್ಪ

1. _____

2. _____

3. _____

4. _____

5. _____



Jindal Vidya Mandir, JSW Hill Side Township
Term -I Examination (2024-25)

Class/Sec: II/ _____

SET-A

Duration :1 Hour

Sub: Hindi (III Language)

Max Marks: 25M

Name : _____

Roll No. : _____

Date : _____

Invigilator's Sign. : _____

General Instructions:

- सभी प्रश्न अनिवार्य हैं।
- कुल 5 प्रश्न हैं।

1) खाली जगह में उचित स्वरों को लिखिए।
(Fill in blanks with correct vowels)

(5 X1M=5M)

अ _____ इ ई उ _____ ऋ _____ ऐ _____
औ अं _____ ।

2) व्यंजनों को उचित क्रम में लिखिए।
(Arrange consonants in the proper order.)

(2 X2M=4M)

घ क ख ड ग




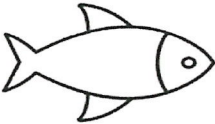


ध द न त थ

(P.T.O)

3) चित्रों को पहचान कर उसके नाम का पहला अक्षर लिखो ।

(6 X1M=6M)

(Identify pictures and write first letter of their names.)

	<p>_____</p>
	<p>_____</p>
	<p>_____</p>
	<p>_____</p>
	<p>_____</p>
	<p>_____</p>

4) दिए गए वर्णों से चित्र बना कर रंग भरिए।

(2 X2M=4M)

(Draw pictures of the letters mentioned)

ग	झ

5) दिए गए वर्ण के अगले दो वर्णों को लिखिए।

(6X1M=6M)

(Write the next two letter of given letter)

1)	छ	____/____
2)	ट	____/____
3)	द	____/____
4)	र	____/____
5)	य	____/____
6)	क	____/____



Jindal Vidya Mandir, JSW Hill Side Township
Term-I Examination (2024-25)
Set- A

Class: II / Sec: _____

Max Marks: 25

Sub: GK

Duration: 1Hr

Name: _____

Roll No: _____

Invigilator's Signature: _____

Date: _____

General Instructions:

- This question paper is printed in 4 pages and 25 questions.
- All the questions are compulsory.

Section-A

I. Choose the correct word from the box to fill in the blanks.

5X1=5M

cobra	cycle	shrimp	continent	natural
-------	-------	--------	-----------	---------

1. To defeat the evil _____ the crows dropped a stolen necklace in its burrow.
2. The heart of a _____ is located in its head.
3. The continuous movement of water from land to sky and back again is called the water _____.
4. Natural light is the light we get from _____ sources.
5. Europe is the second smallest _____ in the world.

II. Write the full forms of technology related terms.

5X1=5M

6. RAM: _____

7. GB: _____

8. CPU: _____

9. CD: _____

10. OS: _____

III. Choose the correct answer.

5X1=5M

11. Which animal provides us wool?

- a. bear b. sheep c. monkey d. elephant

12. Which animal provides us egg?

- a. hen b. yak c. cat d. camel

13. Which animal provides us milk?

- a. hen b. fish c. tortoise d. camel

14. Which animal carries soldiers on their backs during war?

- a. giraffe b. zebra c. horse d. hippopotamus

15. Which animal takes people from one place to another on a sleigh?

- a. whale b. reindeer c. camel d. sheep

IV. Unscramble the letters to find answers to the clues.

5x1=5M

16. World's tallest building _____. (UBJR HILKAFA)

17. World's largest country _____. (IASURS)

18. World's highest mountain peak _____. (TM TREESVE)

19. World's longest river _____. (LEIN)

20. World's longest hot desert _____. (AAAHRHS)

V. Answer the following questions

5x1=5M

21. Name any two cardinal directions.

22. Write the name of any one plant with its use.

23. Name any two aquatic animals.

24. Name any one book with its author.

25. Name any two uncommon modes of transport found across the world.
