



**Jindal Vidya Mandir, JSW Hill Side Township**  
**Weekly Test-11 Term - II (2025-26)**

**Class: I/sec**

**Sub: EVS**

**Name: \_\_\_\_\_**

**Invigilator's Signature: \_\_\_\_\_**

**Max. Marks: 20**

**Duration: 45 minutes**

**Roll No. \_\_\_\_\_**

**General Instructions:**

- This question paper consists of 2 pages and 14 questions.
- All the questions are compulsory.

**I. Fill in the blanks from the help box.**

**5X1=5M**

water	grow	seeps	underground water	space
-------	------	-------	-------------------	-------

1. Plants need water to \_\_\_\_\_.
2. Water found below the ground is called \_\_\_\_\_.
3. Rockets are used to travel in \_\_\_\_\_.
4. Yachts are used to travel on \_\_\_\_\_.
5. Rainwater \_\_\_\_\_ into the ground.

**II. Circle the odd one out.**

**2X1=2M**

6. vehicle      wheel      bus      water

7. pipes      tank      taps      ocean

**III. Write the missing letters.**

**3X1=3M**

8. S \_ \_ r \_ \_ ngs

9. Gl \_ \_ d \_ \_ rs

10. St \_ \_ am \_ \_ rs

**IV Answer the following questions.**

**3X2=6M**

**11. Write any two uses of water.**

---

---

---

---

**12. Write one example of means of air transport and one example of means of water transport.**

---

---

---

**13. What are the means of transport?**



---


---

---

**14. Draw, name and colour any two sources of water.**

**4M**

 <hr/>	 <hr/>
--	---



**Jindal Vidya Mandir, JSW Hill Side Township**  
**Weekly Test – 11 (Term –II) 2025-26**

**Class: II/ Sec: \_\_\_\_\_**

**Name : \_\_\_\_\_**

**Sub: Mathematics**

**Invigilator's signature: \_\_\_\_\_**

**Duration: 45 Minutes**

**Roll No. \_\_\_\_\_**

**Max Marks: 20**

**Date: \_\_\_\_\_**

**General Instructions:**

- This question paper consists 2 pages and 6 questions.
- All the questions are compulsory.

**I. Fill in the blanks.**

**4X1M =4M**

- a) There are \_\_\_\_\_ days in a week.
- b) The day just after Friday is \_\_\_\_\_.
- c) There are \_\_\_\_\_ hours in a day.
- d) We celebrate Republic Day in the month of \_\_\_\_\_.

**II. State True or False.**

**4X1M =4M**

- a) A leap year has 366 days. \_\_\_\_\_
- b) There are 29 days in December. \_\_\_\_\_
- c) 14 months make one year. \_\_\_\_\_
- d) A clock has 2 hands. \_\_\_\_\_

**III. Unscramble the words.**

**2X1M =2M**

- a) U D E T Y A S \_\_\_\_\_
- b) R B E R A Y F U \_\_\_\_\_

**IV. Fill in the blanks by writing what comes just before and just after. 2M**

- a) \_\_\_\_\_ Thursday \_\_\_\_\_
- b) \_\_\_\_\_ August \_\_\_\_\_

V. Write the time in two ways.

2X2M =4M



---

---



---



---

VI) Draw hour and minute hand to show the given time.


2X2M=4M

a) 2:30

b) Half past 10







Jindal Vidya Mandir, Jsw Hill side Township

Weekly Test-11 (Term II 2025-2026)

Class: III/ Sec: \_\_\_\_\_

Subject: Hindi(II Lang)

Name: \_\_\_\_\_

Duration: 45 min

M Marks: 20M

Date: \_\_\_\_\_

प्रश्न 1 गद्यांश को पढ़कर प्रश्नों के उत्तर लिखो -

5X1=5

एक किसान अपने खेत में मेहनत से काम करता था। एक दिन उसके खेत में एक भालू आ गया। किसान डर गया, लेकिन भालू ने उससे दोस्ती कर ली। भालू फसल खाने लगा। किसान ने अपनी बुद्धि से भालू को चकमा दिया और हर बार लाभ में रहा। इस तरह किसान की होशियारी से भालू हार गया।

(क) किसान कहाँ काम करता था?

उत्तर—

ख ) किसान डर क्यों गया ?

उत्तर—

ग) किसान ने भालू के साथ क्या किया ?

उत्तर—

घ) किसान ने भालू को कैसे हराया ?

उत्तर—

ङ) इस गद्यांश से हमें क्या सीख मिलती है ?

उत्तर—

प्रश्न 2 दिए गए प्रश्नों के उत्तर लिखिए-

3x2=6

क) पहली और दूसरी बार किसान ने कौनसी फ़सल अपने खेत में उगाई ?

उत्तर—

ख) हिमालय को सुंदर मुकुट क्यों कहा है ?

उत्तर -----

ग) आप अपने देश का यश कैसे बढ़ाएंगे ?

उत्तर -----

**प्रश्न 3. शब्दार्थ लिखिए।**

$$2 \times 1 = 2$$

(क) अचानक = \_\_\_\_\_

(ख) मुकुट = \_\_\_\_\_

**प्रश्न 4 दिए गए मुहावरों के अर्थ लिखो-**

$$2 \times 1 = 2$$

क) आँख दिखाना - \_\_\_\_\_

ख) कान भरना - -----

**प्रश्न 5 भाई बहन के बीच संवाद लेखन कीजिये -**

$$5 \times 1 = 5$$
[illegible]



**Jindal Vidya Mandir, JSW Hill Side Township**  
**Weekly Test-11 (Term-II) 2025-26**

**Class: III**  
**Sub: Kannada(II language)**

**Max Marks: 20**  
**Duration: 45minutes**

- ಪ್ರತಿಯೊಂದು ಪ್ರಶ್ನೆಗಳನ್ನು ಸರಿಯಾಗಿ ಓದಿಕೊಂಡು ಉತ್ತರಿಸಿರಿ.
- ಪ್ರಶ್ನೆ ಮತ್ತು ಉಪ ಪ್ರಶ್ನೆಗಳ ಸಂಖ್ಯೆ ಯನ್ನು ಸರಿಯಾಗಿ ಬರೆಯಿರಿ.

**I. ಈ ಕೆಳಗಿನ ಪದಗಳಿಗೆ ಸಮನಾರ್ಥಕ ಪದಗಳನ್ನು ಬರೆಯಿರಿ.**

**3x1=3**

1. ಅಡವಿ - \_\_\_\_\_
2. ಕಾಯಿಲೆ - \_\_\_\_\_
3. ದುರ್ವಾಸನೆ- \_\_\_\_\_

**II. ಈ ಕೆಳಗಿನ ಪದಗಳನ್ನು ಸ್ವಂತ ವಾಕ್ಯದಲ್ಲಿ ಬಳಸಿ ಬರೆಯಿರಿ.**

**3x1=3**

1. ಕುತೂಹಲ: \_\_\_\_\_
2. ಬಾರಿಸು: \_\_\_\_\_
3. ಅಭಿನಯ \_\_\_\_\_

**III. ಈ ಕೆಳಗಿನ ಬಿಟ್ಟ ಸ್ಥಳಗಳಲ್ಲಿ ಸೂಕ್ತವಾದ ಉತ್ತರಗಳನ್ನು ಬರೆಯಿರಿ.**

**4x1=4**

1. ರಾಜು ಮತ್ತು ಕಮಲ \_\_\_\_\_ ಜೊತೆ ಜಾತ್ರೆಗೆ ಹೋದರು.
2. ಕಾಡಿನ ರಾಜ ಸಿಂಹಕ್ಕೆ \_\_\_\_\_ ಆಗಿತ್ತು.
3. ಜಾತ್ರೆಯಲ್ಲಿ ಭಕ್ತರು \_\_\_\_\_ ಎಳೆಯುತ್ತಿದ್ದರು.
4. ಯಕ್ಷಗಾನ ಬಯಲಾಟದ ಅಂದಿನ ಪ್ರಸಂಗ \_\_\_\_\_

**IV . ನಿಮ್ಮ ಚಿಕ್ಕಪ್ಪನ ಮದುವೆಯ ಕಾರಣ ನೀಡಿ ಐದು ದಿನಗಳ ಕಾಲ ರಜೆ ಕೋರಿ, ನಿಮ್ಮ ಶಾಲೆಯ ಪ್ರಾಂಶುಪಾಲರಿಗೊಂದು ಪತ್ರ ಬರೆಯಿರಿ.**

**1x4=4**

**V. ಕೆಳಗಿನ ಪ್ರಶ್ನೆಗಳಿಗೆ ಮೂರು-ನಾಲ್ಕು ವಾಕ್ಯಗಳಲ್ಲಿ ವಾಕ್ಯದಲ್ಲಿ ಉತ್ತರಿಸಿರಿ.**

**2x3=6**

1. ಬೀಸು ಕಂಸಾಳೆ ಎಂದರೇನು? ಕಂಸಾಳೆ ಅವರು ಹಾಡುತ್ತ ಹೇಗೆ ನರ್ತಿಸುತ್ತಾರೆ?
2. ಜಾಣ ವೈದ್ಯನರಿ ಕಾಯಿಲೆ ಬಿದ್ದ ಕಾಡಿನ ರಾಜ ಸಿಂಹವನ್ನು ಹೇಗೆ ಪರೀಕ್ಷಿಸಿತು?

H. Sivalela



**Jindal Vidya Mandir, JSW Hill Side Township**  
**Weekly Test-11 (Term II) (2025-26)**

**Class: IV**

**Duration: 45mins**

**Sub: English**

**Max Marks: 20**

**General Instructions:**

- 
- This question paper consists of 1 pages and 4 main questions.
  - All the questions are compulsory.
- 

**I. Underline the incorrect prepositions and rewrite the sentences with the correct prepositions.** **5M**

1. Our school reopens in 5 June.
2. The cat is sitting on the table.
3. The train will leave at ten minutes.
4. We will meet at Monday morning.
5. We have no rains at summer.

**II. Punctuate these sentences by placing the quotation marks correctly.** **4M**

1. Harry asked is this your new bicycle
2. mr philips said take out your notebooks children
3. what a marvelous country this is
4. rayan said please lend me your science textbook


**III. Write a letter to your principal requesting him/her permission to take leave for two days to attend your aunt's house-warming ceremony.** **5M**

**IV. Answer the following questions.** **6 M**

1. Was Tian a good friend of the birds? How do you know?
2. Do you think we should all be kind to others, just like Tian was?
3. Why does the Rum Tum Tugger stick to its stubborn ways?







**Jindal Vidya Mandir, JSW Hill Side Township**  
**Weekly Test-11 (Term II)**

**Class: V**

**Sub: General Knowledge**

**Duration: 45 minutes**

**Max Marks: 20**

**General Instructions:**

- The question paper consists of 2 page and a total of 15 questions.
- All questions are compulsory.

**I. Choose the correct option for the following questions.**

**10X1=10**

1. Which part of a book tells us the list of chapters?

- a) Index
- b) Cover page
- c) Table of Contents
- d) Glossary

2. A group of musicians performing together is called a:

- a) Choir
- b) Music band
- c) Audience
- d) Orchestra

3. Which of the following is a describing word?

- a) Run
- b) Happy
- c) Quickly
- d) Sing

4. Which word is a palindrome?

- a) Apple
- b) Table
- c) Level
- d) Pencil

5. "Honesty is the best policy" is an example of a:

- a) Idiom
- b) Proverb
- c) Synonym
- d) Phrase

6. Which reference book helps us find meanings of words quickly?

- a) Atlas
- b) Story book
- c) Dictionary
- d) Magazine

7. Which of the following is an Indian language?

- a) Spanish
- b) French
- c) Hindi
- d) German

8. Which punctuation mark is used at the end of a question?

- a) Full stop (.)
- b) Comma (,)
- c) Question mark (?)
- d) Exclamation mark (!)

9. Which is a compound word?

a) Sun

b) Flower

c) Blackboard

d) Write

10. Which word is a synonym of big?

a) Small

b) Tiny

c) Large

d) Short

**II. Answer the following questions.**

**5X2=10**

11. Name any two parts of a book and write one use of each.

12. What is a dictionary race? Write one benefit of it.

13. Write any four Indian languages spoken in India.

14. What are idioms? Write one example.

15. Make sentences using the following:

a) A compound word – \_\_\_\_\_

b) A describing word – \_\_\_\_\_



Jindal Vidya Mandir, JSW Hill Side Township

Term-2, Weekly Test -11 (2025-26)

Class VI

Subject: Hindi

Duration: 45 min

Max marks:20

आवश्यक निर्देश : (1) सभी प्रश्नों को हल करना अनिवार्य है ।

(2) प्रश्नों की कुल 5 संख्या है ।

प्रश्न (I) निम्नलिखित प्रश्नों को ध्यान पूर्वक पढ़कर दिए गए विकल्पों में से सही विकल्प चुनकर लिखिए -

3X1=3

(क) 'एलन रात को घर पहुँचा' रेखांकित पद में कारक का कौन-सा भेद है -

i) अधिकरण कारक ii) संप्रदान कारक iii) संबंध कारक iv) कर्म कारक

(ख) 'अरे ! आप कहाँ गए थे ?' रेखांकित पद में कारक का कौन-सा भेद है -

i) संबोधन कारक ii) अपादान कारक iii) संबंध कारक iv) कर्म कारक

(ग) 'गंगा हिमालय से निकलती है' रेखांकित पद में कारक का कौन-सा भेद है -

i) संबोधन कारक ii) संप्रदान कारक iii) अपादान कारक iv) करण कारक

प्रश्न (II) नीचे दिए गए वाक्यों में रिक्त स्थान की पूर्ति कोष्ठक में दिए गए उपयुक्त शब्द को चुनकर कीजिए -

3X1=3

(क) राजा ने अपने ----- में से संस्कृत-हिंदी ----- के लिए पर्याप्त धन दिया। (कोश, कोष)

(ख) जब ----- पानी लाते हैं, तो सरोवर में ----- मिलते हैं। ( जलज, जलद )

(ग) शहर में एक ----- व्यक्ति का ----- हो गया है। ( निर्धन, निधन )

प्रश्न (III) नीचे दिए प्रश्नों के 10 से 20 शब्दों में उत्तर दीजिए -

2X2=4

(1) चेतक को कोड़े नहीं लगाने पड़ते थे, क्यों ?

(2) चेतक को देख दुश्मन क्यों दंग रह गए ?

प्रश्न (IV) नीचे दिए प्रश्नों के 20 से 40 शब्दों में उत्तर दीजिए -

2X3=6

(1) "नैरोबी का नेशनल पार्क चिड़ियाघर नहीं है।" नेशनल पार्क और चिड़ियाघर में क्या अंतर है ?

(2) शिवरात्रि के दिन मॉरिशस के हिंदू क्या करते हैं ?

प्रश्न (V) 'मेहनत का फल' विषय पर एक लघु कथा 80 से 90 शब्दों लिखिए -

1X4=4

\*\*\*\*\*



Class; VI

Subject: Kannada (II Language)

M.Marks:20

Duration:45 min

I.ಈ ಕೆಳಗಿನ ಪದಗಳನ್ನು ಸ್ವಂತ ವಾಕ್ಯ ರಚಿಸಿರಿ.

2X1=2

1.ಪ್ರತಿಭೆ

2.ಮುಣ

II.ಈ ಕೆಳಗಿನ ಪದಗಳನ್ನು ಓದಿ, ದೇಶೀಯ ಮತ್ತು ಅನ್ಯದೇಶೀಯ ಪದಗಳನ್ನು ವಿಂಗಡಿಸಿ ಪಟ್ಟಿ ಮಾಡಿ.

ಮನೆ, ಸಾಬೂನು, ಲೈಬ್ರರಿ, ಅನಾನಸು

2X1=2

III.ಈ ಕೆಳಗಿನ ವಾಕ್ಯಗಳನ್ನು ಓದಿ, ಸಾಮಾನ್ಯ ವಾಕ್ಯ, ಸಂಯೋಜಿತ ವಾಕ್ಯ ಅಥವಾ ಮಿಶ್ರ ವಾಕ್ಯ ಗುರುತಿಸಿ ಹೆಸರಿಸಿರಿ.

2X1=2

1.ಮಕ್ಕಳು ಹಾಲನ್ನು ಕುಡಿಯುತ್ತಾರೆ. ಮತ್ತು ಹಣ್ಣನ್ನು ತಿನ್ನುತ್ತಾರೆ.

2.ಹಕ್ಕಿ ಹಣ್ಣನ್ನು ತಿನ್ನುತ್ತದೆ.

IV.ಈ ಕೆಳಗಿನ ಪ್ರಶ್ನೆಗಳಿಗೆ ಒಂದು ವಾಕ್ಯದಲ್ಲಿ ಉತ್ತರಿಸಿರಿ.

1X2=2

1. ನಮ್ಮ ಅನ್ನವನ್ನು ಉಂಡು ಕೊಬ್ಬಿರುವರು ಯಾರು?

2.ರೇಡಿಯೋದಲ್ಲಿ ಯಾವ ನುಡಿ ಹರಿದು ಬಂತು?

V.ಈ ಕೆಳಗಿನ ಪ್ರಶ್ನೆಗಳಿಗೆ 5\_6 ವಾಕ್ಯದಲ್ಲಿ ಉತ್ತರ ಬರೆಯಿರಿ.

2X3=6

1. ಚೆನ್ನಮ್ಮನಿಗೆ ನೋವಾಗಲು ಕಾರಣವೇನು?

2. ಬಂಗಾಳದಲ್ಲಿ ನಡೆದ ವಂಗ ಭಂಗ ಚಳುವಳಿ ಬಗ್ಗೆ ಬರೆಯಿರಿ.

VI.ಈ ಕೆಳಗಿನ ಯಾವುದಾದರೂ ಒಂದು ವಿಷಯಕ್ಕೆ ಪ್ರಬಂಧ ರಚಿಸಿರಿ.

1X3=3

“ನಮ್ಮ ಕನ್ನಡ ನಾಡು “

ಅಥವಾ

“ ರಾಣಿ ಚೆನ್ನಮ್ಮ ”

VII ಪತ್ರಲೇಖನ :-

1X3=3

ನಿಮ್ಮ ಊರಿನಲ್ಲಿ ಹಾಳಾಗಿರುವ ರಸ್ತೆಯನ್ನು ದುರಸ್ತಿಗೊಳಿಸಲು ಗ್ರಾಮ ಪಂಚಾಯಿತಿ ಅಧ್ಯಕ್ಷರಿಗೆ ಒಂದು ಮನವಿ ಪತ್ರ ಬರೆಯಿರಿ.

K. Sivaleela





**Jindal Vidya Mandir, JSW Hill Side Township**  
**Weekly Test-11(2025-26)**

**Class: VII/  
Sub: English**

**Duration: 45 min  
Max Marks: 20M**

**General Instructions:**

---

- All questions are compulsory
  - Write in neat and legible handwriting
- 

**I. Read the following passage carefully and answer the questions that follow:**

Once upon a time, there was a small, picturesque village surrounded by lush green fields, blooming with colorful flowers, and a dense, ancient forest filled with the sounds of chirping birds and rustling leaves. The villagers were hardworking, kind-hearted people who believed in the power of community. They shared their joys and sorrows, celebrated festivals together, and helped one another in times of need. Despite living simple lives, their hearts were full of generosity and warmth.

One day, a weary traveller arrived at the village, his clothes dusty from the long journey, and his face etched with exhaustion. Seeing his plight, the villagers welcomed him with open arms, offering him food, water, and a place to rest under the shade of a grand oak tree. The traveller, deeply moved by their kindness, expressed his gratitude by sharing tales of faraway lands, majestic mountains, bustling cities, and serene oceans. His stories left the villagers awestruck, igniting their curiosity about the world beyond their peaceful village.

Questions

**(5×1=5M)**

1. Where was the village located?
2. How did the villagers treat the traveller?
3. What did the traveller share with the villagers?
4. What does the passage reveal about the villagers' values?
5. Why did the traveller feel moved by the villagers' actions?

II. Education is a boon to humanity. It builds up our confidence. But it is shocking that in our country a lot of children don't get even basic education. Prepare an article on the topic 'Need of Education for All'. You are Rahul. **(5×1=5M)**

**III. Punctuate this dialogue by using capital letters, commas, full stops, question marks or exclamatory marks. Wherever necessary. (1×4=4M)**

Pulkit: wow I am enjoying the match

Vani: truly how interesting it is getting now

Pulkit: who do you think will be the man of the match

Vani: let us hope that ravi is declared the Man of the Match

Pulkit: he is both batting and bowling brilliantly this time

Vani: bravo here goes the ball for another four

Pulkit: what is the score now

Vani: are you asking about ravi's individual score

Pulkit: yes I just lost track

Vani: you better watch the match in silence now

**IV. Answer the following questions.**

1. Why are war memorials built? **(2M)**

2. Where is the National War Memorial and what is its significance? **(2M)**

3. Which book Ananda wants to read and why? **(2M)**



**Jindal Vidya Mandir, JSW Hill Side Township**  
**Weekly Test-11 (Term –II) 2025-2026**

**Class: VIII**

**Max.Marks:20**

**Subject: Information Technology**

**Duration: 45mins.**

---

**General Instructions:**

**\* This question paper consists of 2 pages with IV main headings.**

**\*All questions are compulsory.**

---

**I. Fill in the blanks.**

**4 X 1=4M**

1. The \_\_\_\_\_ displays the various options that are used for performing different activities.
2. An operator needs one or more \_\_\_\_\_ to perform any operation.
3. The \_\_\_\_\_ function is used to connect to the database.
4. The \_\_\_\_\_ DBMS employs the parent-child relationship of storing data.

**II. State whether the following statements are true or false.**

**4X 1=4M**

1. Network DBMS supports many-to-many relationships.
2. The mysqli\_connect function connects the web app to the MYSQL server.
3. An identifier name starts with &.
4. In PHP only upper case letters can be used in naming an identifier.

**III. Answer the given application –based questions.**

**2X1=2M**

1. Akshay is creating a DBMS that will store details of the teachers and classes they are teaching. Suggest the kind of DBMS Akshay should use.
2. Riya wants to store the age of a student in a PHP program. Which PHP element should she define to store this value?

**IV. Answer the following questions.**

**5 X 2=10M**

1. Briefly explain the rules for naming variables.
2. What are identifiers?
3. What is SQL? Name any two SQL-based DBMS software.
4. What is a Database? Give examples.
5. What is the significance of variables?



**Jindal Vidya Mandir, JSW Hill Side Township**  
**Weekly Test-11(Term-2) 2025-26**

**Class: IX**  
**Subject: Science**

**Duration: 45 min**  
**Max Marks: 20M**

---

**General instructions:**

- This paper consists of 2 mains.
- All questions are compulsory.

---

**I. Choose correct option.**

**(3×1=3)**

1. If the speed of wave is 340 m/s and its frequency is 1700 Hz, then  $\lambda$  for this wave in cm will be

- a) 2                      b) 0.2                      c) 20                      d) 200

2. when the pitch of note produced by a harmonium is lowered, then the wavelength of the note

- a) decreases              b) first decrease and then increase  
c) increases              d) remains constant

3. The scientific name of the honeybee employed in the commercial production of honey is

- a) *Apis florum*              b) *Apis mellifera*              c) *Apis dorsata*              d) *Apis indica*

**II. Answer the following questions**

1. Distinguish between longitudinal and transverse waves? Are sound waves longitudinal or transverse

2M

2. Draw the sketch of two waves A and B such that wave A has twice the wavelength and half the amplitude of wave B.

2M

3. List any two management practices to be considered while designing the shelter for cattle.

2 M



4. Explain the different factors that are to be considered before deciding the nature of feed for cattle and birds. 3M

5. What are the factors affecting evaporation? Explain with a suitable example. 2M

6. How does the water kept in an earthen pot (matka) become cool during summer? 2M

7. Give reason for the following observations.

a. Naphthalene balls disappear with time without leaving any solid. 1M

b. We can get the smell of perfume sitting several meters away. 1M

8. What are concentrates in animals feed? name two internal parasites that cause disease in animals 2M