



Jindal Vidya Mandir, Hill Side Township
Weekly Test-8 (Term II)2025-26

Class: I/ Sec: _____

Sub: English

Name: _____

Invigilator's Signature: _____

Duration: 45mins

Max Marks: 20

Roll no: _____

Date: 06 /12/2025

-
- **General Instructions:**
 - **This paper consists of 2 pages.**
 - **All the questions are compulsory.**
-

I. Read the passage and answer the questions given below.

1X5=5M

Winter is a cold season. People wear warm clothes like sweaters and jackets. In winter, the days are short and the nights are long. Children like to drink hot milk and eat warm food. Many places also have cold winds. Winter is a fun season for everyone.

A. Tick the correct option.

1. Winter is a _____ season.
a. rainy b. cold
2. People wear _____ in winter.
a. warm clothes b. raincoat
3. Children like to drink _____ in winter.
a. juice b. hot milk
4. Write opposite words of the following words from the given passage.
a. short X _____ b. day X _____

II. Circle the adverbs in the given sentences.

1X6=6M

1. The girl sang sweetly.
2. The girls danced gracefully.
3. The soldier fought for his country bravely.
4. He smiled cheerfully.

5. The old woman was walking slowly.
6. He drives the car carefully.

III. Fill in the blanks by forming adverbs from the words given in the brackets. 1X5=5M

1. Rita writes _____.(neat)
2. The man cheers _____.(loud)
- 3.The driver stopped the bus _____.(sudden)
4. The children went home _____. (sad)
- 5.The stars twinkled _____. (bright)

IV. Read the extract and answer the questions from the extract.

1X2=2M

I am so happy,
Do you know why?
There is a rainbow
In the sky.

1. Tick (✓) the right options.

i. Why is the poet happy?

- a. The poet saw a peacock. () b. The poet saw a rainbow. ()

ii. How many colours are there in a rainbow?

- a. seven () b. nine ()

V. Answer the following questions.

1X2=2M

1. What did Manu's parents get him on Sunday?

Ans: _____

_____.

2. What did Manu want to do with the raincoat?

Ans: _____

_____.



Jindal Vidya Mandir, JSW Hill Side Township
Term-II , Weekly Test- 8 (2025-26)

Class: II / Sec: _____

Max Marks: 20

Sub: GK

Duration: 45 minutes

Name: _____

Roll No: _____

Invigilator's Signature: _____

Date: _____

General Instructions:

- This question paper is printed in 2 pages. It has 4 main questions.
- All the questions are compulsory.

I. Choose the correct answer.

6X1M=6M

1. Rapunzel is known for what magical feature?

- a. dress b. magical hair c. house d. None of these

2. Which story has a flying carpet?

- a. Cinderella b. Rapunzel c. Aladdin d. Snow white

3. The Panchtantra stories were written by _____.

- a. Gandhiji b. Kiran Bedi c. Pandit Vishnu Sharma d. Rita Faria

4. Choose the antonym of a word boiling.

- a. hot b. cold c. good d. bad

5. A dust pan is used to collect _____

- a. dust b. flower c. paint d. colours

6. Choose the odd one. _____

- a. frying pan b. marigold c. wok d. Spatula

II. Match the following

5X1M=5M

Column A

- a) "The honest woodcutter"
- b) "Jack and the Beanstalk"
- c) "The Cat in the Hat"
- d) "Cinderella"
- e) "Noddy"

Column B

- i) Giants []
- ii) Enid Blyton []
- iii) Evil mother and sisters []
- iv) Golden axe []
- v) Dr Seuss []

III) Write the antonyms of the given words

4X1M=4M


- a) Huge - _____
- b) Protect- _____
- c) Cheerful - _____
- d) Wise - _____

IV) Identify the pictures and name them

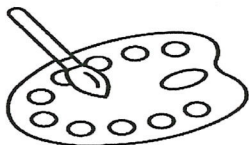
5M

Easel	Palette	Rolling-pin	Spatula	Tong
-------	---------	-------------	---------	------

a)



c)



d)



b)



e)





Jindal Vidya Mandir, JSW Hill Side Township
Term-II Weekly -Test – 8 (2025-26)

Class: III/_____
Subject: Information Technology

Duration:45Min
Max. Mark:20

• **General Instructions:**

1. This question paper is printed in 3 pages.
2. All the questions are compulsory.

Q. I Choose and write the correct answer

5 x 1M = 5M.

1. Which of the following keys will you press to open a document?
a) Ctrl + O b) Ctrl + S c) Ctrl + P d) Ctrl + A
2. _____ View gives the various options to save, open, print and share files in word 2016.
a) Frontstage b) Backstage c) Mainstage d) Outstage.
3. LT 50 will turn the turtle to _____ by 50 steps.
a) Right b) Left c) Forward d) Backword.
4. The MSWLogo command is used to erase unwanted lines _____.
a) CLEAN b) PENERASE c) PENPAINT d) CLEARTEXT.
5. Where do you find Undo and Redo buttons?
a) Status bar b) Scroll bar c) Work Area d) Quick Access Toolbar.

Q. II Match the following.

5 x 1M = 5M.

Column-A	Column-B	Answer
6. Title bar	a. turn the turtle right by 90 steps	
7. Vertical scroll bar	b. The area where you type the text.	
8. Work Area	c. used to change the size of the pen	
9. SETPENSIZE	d. displays the name of the active document	
10.RT 90	e. used to move up and down the document t	

**Q.III Fill in the blanks with the help of the given words.
(Select all, Ribbon, Cursor, Save, SETH,)**

5 x 1M = 5M

11. _____ the turtle in the clockwise direction.
12. Many tabs, which have groups of commands, is _____.
13. When you start typing, the text appears where the blinking _____ is located.
14. To select the whole picture, click _____.
15. Press Ctrl +S _____ a document.

IV Answer the following: -

2 X 1M = 2M.

16. What information does a Status Bar give?

Ans. _____

_____.

17. What is PENPAINT?

Ans. _____

_____.

V Answer any one of the following: -

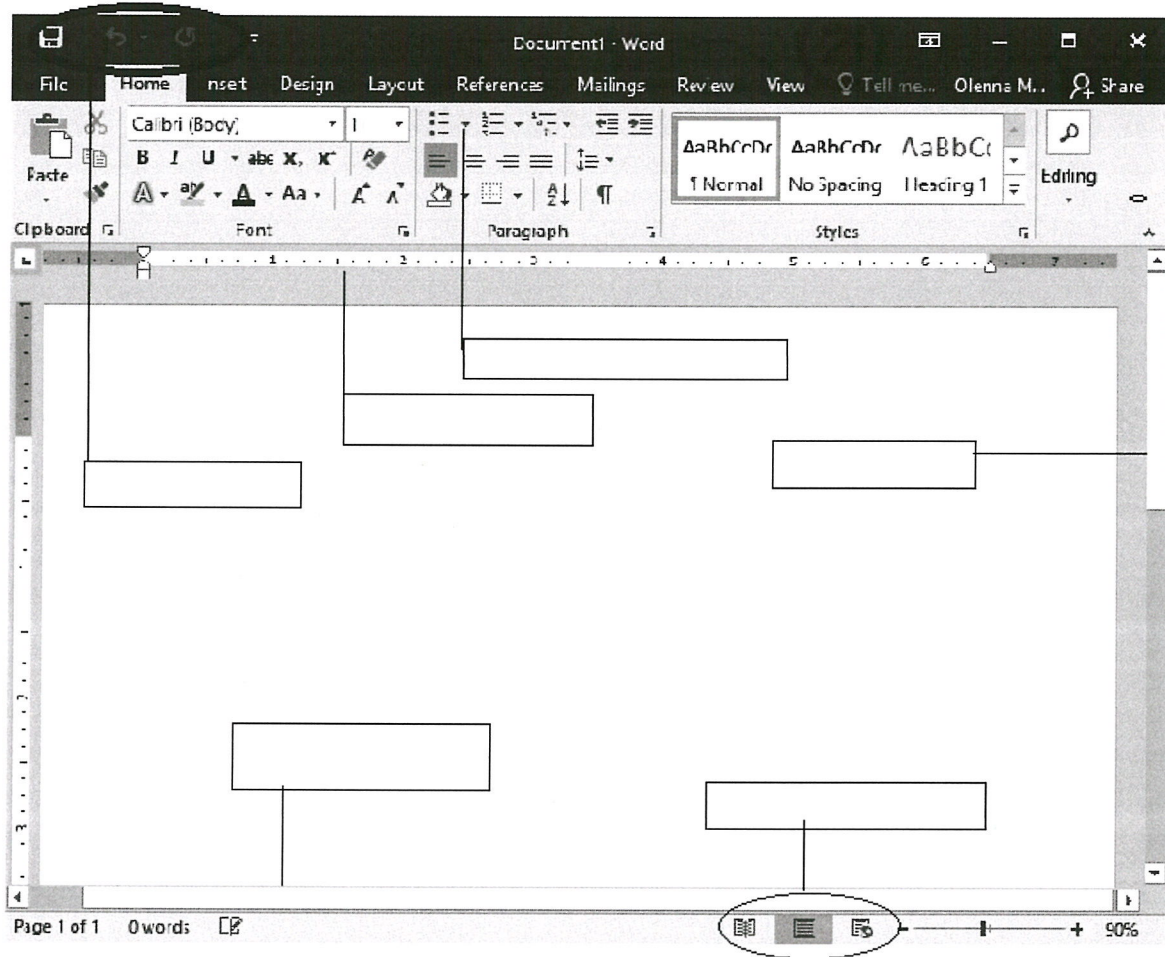
1 X 3M = 3M

18. Briefly explain any three components of a Microsoft Word window.

Ans. _____

_____.

19. Label the components of Word 2026





Jindal Vidya Mandir, JSW Hill Side Township
Term-II Weekly Test-8 (2025-26)

Class: IV/sec _____

Max. Marks: 20

Sub: Hindi (III Language)

Duration: 45 minutes

Name: _____

Roll No. _____

Invigilator's Signature: _____

आवश्यक निर्देश: (1) सभी प्रश्नों को हल करना अनिवार्य है।
(2) प्रश्नों की कुल संख्या 20 है।

I. दिए गए शब्दों के विलोम शब्द लिखिए -

5X1=5M

(Write the opposite words for the following words)

1. दिन —

2. आना —

3. हँसना —

4. बड़ा —

5. कुछ —

II. दिए गए शब्दों के लिंग बदलिए।

5X1=5M

(Change the gender of the following words)

6. लड़का —

7. काका —

8. भाई —

9. राम —

10. बेटा —

III. दिए गए शब्दों के वचन बदलिए।

5X1=5M

(Write the plurals of the following words)

11. मिठाई —

12. चटाई —

13. दवाई —

14. कढ़ाई —

15. कटाई —

IV. दिए गए प्रश्नों के उत्तर लिखिए-

5X1=5M

(Write the answers to the given questions.)

16. किसकी तैयारी बहुत दिनों से चल रही थी ?

17. इमरान के माता-पिता और उसकी छोटी बहन कहाँ गए थे ?

18. ईदगाह कौन-कौन गया ?

19. इमरान और उसके अब्बू नए कपड़े पहनकर कहाँ गए थे ?

20. नमाज के बाद लोग एक दूसरे से गले मिलकर क्या कहते हैं ?



Jindal Vidya Mandir, JSW Hill Side Township
Weekly Test -8 (Tem -II) 2025-26

Class: IV/___
Sub- Kannada(III Language)
Name:-_____

Max Marks: 20
Duration : 45 minutes
Roll No:-_____

ಸೂಚನೆಗಳು:-ಪ್ರತಿಯೊಂದು ಪ್ರಶ್ನೆಗಳನ್ನು ಸರಿಯಾಗಿ ಓದಿಕೊಂಡು ಉತ್ತರಿಸಿರಿ.
ಪ್ರಶ್ನೆ ಮತ್ತು ಉಪ ಪ್ರಶ್ನೆಗಳ ಸಂಖ್ಯೆ ಯನ್ನು ಸರಿಯಾಗಿ ಬರೆಯಿರಿ.

I. ಆವರಣದಲ್ಲಿ ಕೊಟ್ಟಿರುವ ಪದಗಳಲ್ಲಿ ಸರಿಯಾದ ಪದ ಆರಿಸಿ ಬಿಟ್ಟ ಸ್ಥಳದಲ್ಲಿ ಬರೆಯಿರಿ.
(Choose the correct word from the words given in brackets and fill in the blanks.)

6x1=6

ಕರಿಯಪ್ಪ, ಕಂಗಾಲಾಗಿ, ಮೂರು ಕಾಲು, ಹೆಪ್ಪು, ಮಳೆಯಧಾರೆ, ಕೈಗಾರಿಕೋದ್ಯಮಗಳು

1. _____ಭಾಗ ನೀರು ಭೂಮಿಯ ಮೇಲೆ ಅರಡಿದೆ.
2. ಮೋಡವಾಗಿ ತಂಪು ತಗಲಿ _____ಸುರಿಸುವುದು.
3. _____ಕರಗಿ ದ್ರವವಾಯಿತು ಒಡನೆ ಶಾಖ ನೀಡಲು.
4. _____ನೀರು ಇರದೆ ನಡೆಯುವು
5. ಕುರಿ ಕಾಯುವವನ ಹೆಸರು_____.
6. ಬೆದರಿದ ಕುರಿಮರಿ _____ಕಿರುಚುತ್ತ ಬೇರೆ ಕಡೆಗೆ ಸಾಗಿತು.

II. ಈ ಕೆಳಗಿನ ಪದಗಳಿಗೆ ಸೂಕ್ತವಾದ ವಿರುದ್ಧ ಪದ ಬರೆಯಿರಿ.
(Write the appropriate opposite word for the following words)

4X1=4

1. ಶುದ್ಧ X _____.
2. ಘನ X _____.
3. ಶಕ್ತಿ X _____.
4. ಹುಟ್ಟು X _____.

III. ಈ ಕೆಳಗಿನ ಪದಗಳನ್ನು ಬಹುವಚನ ರೂಪದಲ್ಲಿ ಬರೆಯಿರಿ.

5X1=5

(Write the following words in plural form)

1. ಕುರಿ - _____

2. ಅಣ್ಣ - _____

3. ಅಕ್ಕ - _____

4. ಹುಲಿ - _____

5. ಅಪ್ಪ - _____

IV. ಈ ಕೆಳಗಿನ ಪದಗಳನ್ನು ಲಿಂಗ ಬದಲಿಸಿ ಬರೆಯಿರಿ.

5X1=5

(Write the following words by changing their gender)

1. ಹೆಂಡತಿ - _____

2. ಹುಡುಗ - _____

3. ಬಾಲಕ - _____

4. ಯುವತಿ - _____

5. ಅಜ್ಜ - _____



Jindal Vidya Mandir, JSW Hill Side Township
Weekly Test - 8 (Term-II) - 2025-26

Class: V/ Sec: _____

Sub: EVS

Duration: 45 Minutes

Max Marks: 20

Date: 06/12/2025

General Instructions:

-
- This question paper consists of 1 page and 12 questions.
 - All the questions are compulsory.
-

I. Fill in the blanks.

[5 X 1=5M]

1. The process in which two sets of yarn are arranged together is called _____.
2. The _____ disease spreads through faecal matter.
3. Malaria is caused by a protozoan _____.
4. A crack in the bone is called a _____.
5. In case of severe burns _____ are formed.

II. Answer the following questions.

6. What is first aid? Why should we always keep a first aid kit ready? [2M]
7. Name any two infectious diseases. How can we prevent the spread of infectious diseases? [2M]
8. What are deficiency diseases? Give two examples. [2M]
9. Name some synthetic fabrics? Why are they popular? [2M]
10. Which type of clothes are comfortable in summer and why? [2M]
11. How do we obtain wool from the hair of sheep? [2M]
12. Draw any three items used in a first aid kit and write their names. [3M]



Jindal Vidya Mandir, JSW Hill Side Township

Weekly Test -8 (2025-26)

Class VI

Subject: Hindi (III Language)

Duration: 45 min

Max marks: 20

आवश्यक निर्देश : (1) सभी प्रश्नों को हल करना अनिवार्य है ।

(2) प्रश्नों की कुल 4 संख्या है ।

प्रश्न 1) दिए गए पठित पद्यांश को पढ़कर नीचे लिखे प्रश्नों के सही उत्तर विकल्पों में से चुनकर लिखिए -

(choose the correct answer after reading the given seen poem.)

5X1=5

रंग-बिरंगे पंख तुम्हारे इधर-उधर मँडराती हो,
कली-कली से, फूल-फूल से उनका रंग ले आती हो।
इंद्रधनुष के रंग साथ ले, जहाँ-जहाँ तुम जाती हो,
बच्चे, बूढ़े और युवा सबका मन हरषाती हो।
तितली रानी, यह बतलाओ हमसे तुम रूठी हो क्यों ?
फूलों से तो बातें करती, हमसे दूर रहती हो क्यों ?

1. तितली किससे रंग ले आती है ?

क) कली और फूल से

ख) नदी और तालाब से

ग) पहाड़ और झरने से

घ) पत्तों और शाखों से

2. तितली अपने साथ क्या ले जाती है ?

क) इंद्रधनुष के रंग

ख) सुनहरी धूप

ग) चाँद की रोशनी

घ) तारों की चमक

3. कविता में तितली से कौन-सा प्रश्न किया गया है ?

क) तुम हमसे रूठी क्यों हो ?

ख) तुम फूल तोड़ती क्यों हो ?

ग) तुम गीत गाती क्यों हो ?

घ) तुम खेलती क्यों नहीं हो ?

4. तितली किससे बातें करती है ?

क) फूलों से

ख) पंछियों से

ग) बच्चों से

घ) पत्तियों से

5. जब कोई पास आता है तो तितली क्या करती है ?

क) तुरंत दूर उड़ जाती है

ख) गाना गाने लगती है

ग) वहीं बैठी रहती है

घ) फूल तोड़ लेती है

प्रश्न. II) समान अर्थ वाले शब्द लिखिए -

4X1=4

(Write the synonyms of the following words)

चाँद सूर्य वर्षा गृहम्

प्रश्न. III) निम्नलिखित प्रश्नों के उत्तर लिखिए -

6X1=6

(Answer the following questions in one sentence)

- 1) मिनी ने किसको ई-मेल लिखा ?
- 2) मिनी को किसने कहानी सुनाई ?
- 3) मिनी चंदा को घर क्यों बुलाना चाहती थी ?
- 4) तितली किसके मन को प्रसन्न करती है ?
- 5) सूरज दादा कहाँ छिप गए थे ?
- 6) तितली के पंख कैसे होते हैं ?

प्रश्न. IV) सही विलोम शब्दों को मिलाइए -

5X1=5

(Match the opposite words)

क्रम संख्या	(क)	(ख)	उत्तर
1	दूर	बुरा	()
2	इधर	झूठा	()
3	खुश	पास	()
4	अच्छा	उधर	()
5	सच्चा	उदास	()



Jindal Vidya Mandir, JSW Hill Side Township
Weekly Test -8 Term II (2025-26)

Class: - VI/Sec: - _____

Subject: - Kannada (III Language)

Student Name: - _____

Max. Marks: - 20

Duration: - 45 minutes

Roll No: - _____

General Instruction: -This question paper contains 2 pages and 6 questions.

I. ಈ ಕೆಳಗಿನ ಗದ್ಯ ಭಾಗವನ್ನು ಓದಿ ಕೊಟ್ಟಿರುವ ಪ್ರಶ್ನೆಗಳಿಗೆ ಸರಿಯಾದ ಉತ್ತರವನ್ನು ಆರಿಸಿ ಬರೆಯಿರಿ. 5x1=5

ಒಂದಾನೊಂದು ದಿನ ಸುಂದರವಾದ ಕೊಳದ ಬಳಿಯಲ್ಲಿ ಅಲೆದಾಡುತ್ತಿದ್ದ ಇರುವೆ, ಒಮ್ಮೆ ನೀರಿನಲ್ಲಿ ಬಿದ್ದಿತು. ಮರದ ಕೊಂಬೆಯ ಮೇಲೆ ಇದ್ದ ಪಾರಿವಾಳವು ಇದನ್ನು ನೋಡಿತು. ಅದು ಒಂದು ಎಲೆಯನ್ನು ನೀರಿನಲ್ಲಿ ಹಾಕಿತು. ಇರುವೆ ಎಲೆಯ ಮೇಲೆ ಹತ್ತಿ ಸುರಕ್ಷಿತವಾಗಿ ತೀರವನ್ನು ಸೇರಿತು. ಕೆಲವು ದಿನಗಳ ನಂತರ ಒಬ್ಬ ಬೇಟೆಗಾರನು ಮರದ ಮೇಲಿದ್ದ ಪಾರಿವಾಳಕ್ಕೆ ಗುರಿ ಇಟ್ಟು ಬಾಣ ಹೂಡಲು ಯತ್ನಿಸಿದ.. ಇದನ್ನು ಕಂಡ ಇರುವೆ ಬೇಟೆಗಾರನ ಕಾಲನ್ನು ಕಚ್ಚಿತು. ಅವನ ಗುರಿ ತಪ್ಪಿ ಬಾಣ ನೀರಿಗೆ ಬಿತ್ತು. ಪಾರಿವಾಳವು ಹಾರಿ ಹೋಯಿತು. ಹೀಗೆ ಪಾರಿವಾಳ ರಕ್ಷಿಸಿದ ಇರುವೆ, ಆ ದಿನ ತನ್ನ ಕೃತಜ್ಞತೆಯನ್ನು ತೋರಿಸಿತು.

ಪ್ರಶ್ನೆಗಳು:

1. ಕೊಳದ ಬಳಿಯಲ್ಲಿ ಅಲೆದಾಡುತ್ತಿದ್ದ _____, ಒಮ್ಮೆ ನೀರಿನಲ್ಲಿ ಬಿದ್ದಿತು.

(i) ಇರುವೆ (ii) ಹಕ್ಕಿ (iii) ನರಿ (iv) ಬೆಕ್ಕು

2. ನೀರಿನಲ್ಲಿ ಹೋರಾಡುತ್ತಿದ್ದ ಇರುವೆಯನ್ನು ನೋಡಿ _____ ಒಂದು ಎಲೆಯನ್ನು ಹಾಕಿತು.

(i) ಹದ್ದು (ii) ಪಾರಿವಾಳವು (iii) ಕಾಗೆಯು (iv) ಗೂಬೆಯು

3. ಬೇಟೆಗಾರನು ಮರದ ಮೇಲಿದ್ದ _____ ಗುರಿ ಇಟ್ಟು ಬಾಣ ಹೂಡಲು ಯತ್ನಿಸಿದ.

(i) ಮೊಲಕ್ಕೆ (ii) ಪಾರಿವಾಳಕ್ಕೆ (iii) ಕಾಗೆಗೆ (iv) ಗಿಡುಗನಿಗೆ

4. ಬೇಟೆಗಾರನು ಗುರಿ ಇಡುವುದನ್ನು ಕಂಡ ಇರುವೆಯು ಅವನ _____ ಕಚ್ಚಿತು.

(i) ಕೈ (ii) ತಲೆ (iii) ಕಾಲು (iv) ಭುಜ

5. ಅವನ ಗುರಿ ತಪ್ಪಿ ಬಾಣ _____ ಬಿತ್ತು.

(i) ಹೊಂಡಕ್ಕೆ (ii) ಬೆಂಕಿಗೆ (iii) ನೀರಿಗೆ (iv) ನೆಲಕ್ಕೆ

II. ಈ ಕೆಳಗಿನ ಪ್ರಾಸಪದಗಳನ್ನು ಹೊಂದಿಸಿ ಬರೆಯಿರಿ.

4X1=4

‘ಅ’

1. ತೀರಕೆ

2. ಒಡಲು

3. ಹೊನಲು

4. ಪ್ರಾಣಿ

‘ಆ’

ಅ) ಮುಗಿಲು

ಆ) ಗಣಿ

ಇ) ನೋಡಲಿಕೆ

ಈ) ಕಡಲು

III. ಈ ಕೆಳಗಿನ ಪದಗಳಿಗೆ ವಿರುದ್ಧಾರ್ಥಕ ಪದಗಳನ್ನು ಬರೆಯಿರಿ.

2x1=2

1. ಗೌರವ X _____
2. ಸಮಾಧಾನ X _____

IV. ಈ ಕೆಳಗಿನ ಬಿಟ್ಟ ಸ್ಥಳಗಳಲ್ಲಿ ಅವರಣದಲ್ಲಿ ಕೊಟ್ಟಿರುವ ಸರಿಯಾದ ಉತ್ತರವನ್ನು ಆರಿಸಿ ಬರೆಯಿರಿ.

4X1=4

(ಕಡಲಿನ, ಜಲಚರ, , ತಪ್ಪಿಗೆ, ಸನ್ಮಾನಿಸಿದರು,)

1. ಕಡಲಿನ ತುಂಬಾ _____ ಪ್ರಾಣಿ
2. ಹಾರ ತುರಾಯಿಗಳೊಂದಿಗೆ ಶಾಲು ಹೊದಿಸಿ _____.
3. ಕಾವಲುಗಾರರಿಂದ ಆದ _____ ಕ್ಷಮೆ ಕೋರಿದರು.
4. ಹೋಗುವ ಬಾರ _____ ತೀರಕೆ.

V. ಕೆಳಗಿನ ಪ್ರಶ್ನೆಗಳಿಗೆ ಒಂದು ವಾಕ್ಯದಲ್ಲಿ/ ಒಂದು ಪದದಲ್ಲಿ ಉತ್ತರಿಸಿ.


3X1=3

1. ಗಣ್ಯವ್ಯಕ್ತಿಗಳು ಸಮಾರಂಭಕ್ಕೆ ಹೇಗೆ ಬರುತ್ತಿದ್ದರು?
2. ಕಡಲಿನಾಳದಲ್ಲಿ ಯಾವ ಗಣಿ ಇದೆ?
3. ಸಮಾರಂಭದಲ್ಲಿ ಯಾರನ್ನು ಸನ್ಮಾನಿಸಲಾಯಿತು ?

VI. ಈ ಕೆಳಗಿನ ವಾಕ್ಯಗಳನ್ನು ಯಾರು ಯಾರಿಗೆ ಹೇಳಿದರು?

2X1=2

1. "ದಯಮಾಡಿ ನಮ್ಮನ್ನು ಕ್ಷಮಿಸಿ ಸ್ವಾಮಿ"
ಯಾರು ಹೇಳಿದರು? _____
ಯಾರಿಗೆ ಹೇಳಿದರು? _____



Jindal Vidya Mandir, JSW Hill Side Township
Weekly Test - 08
Term - II (2025 - 26)

Class: VII
Subject: Social Science

Max. Marks: 20 marks
Duration: 45 Minutes

General Instructions:

- This question paper consists of 2 sections.
- This question paper consists of pages with 4 main questions.
- All questions are compulsory.

(GEOGRAPHY - 10M)

Q1. Choose the correct options from the following:-

(4M)

i. Which gas protects us from harmful sun rays?

- a) Carbon dioxide
- b) Nitrogen
- c) Ozone
- d) Oxygen

ii. What is the process by which heat is transferred in air, where hot, less dense particles rise and colder, denser particles sink?

- a) Conduction
- b) Radiation
- c) Convection
- d) Evaporation

iii. Earth is surrounded by a blanket of air called the _____.

- a) Biosphere
- b) Lithosphere
- c) Atmosphere
- d) Hydrosphere

iv. Which layer is suitable for human life?

- a) Troposphere
- b) Stratosphere
- c) Mesosphere
- d) Exosphere

Q2. Answer the following questions. (In 40-60 words)

i. You are Vaani/Vinayak, visiting a village. You have noticed that villages are cooler than cities. Write any three points to support your answer. **(3M)**

ii. Evaluate the layers of atmosphere with a suitable diagram. **(3M)**

(HISTORY - 10M)

Q3. State whether true or false:


(4M)

- (a) Tribal societies had rich oral traditions.
- (b) There were no tribal communities in the north-western part of the subcontinent.
- (c) The Chaurasi in Gond states contained several cities.
- (d) The Bhils lived in the north-eastern part of the sub-continent.

Q4. Answer the following questions. (In 40-60 words)

(3x2M=6M)

- i. Who were the Banjaras? Why were they important?
- ii. In what ways Gond tribes and Ahom Tribes were different from each other. Write any two points to support your answer.
- iii. Were the Banjaras important for the economy? If yes/no then support your answer with two important points.



Jindal Vidya Mandir, JSW Hill Side Township
Weekly Test-8 (2025-26)

Class: VIII
Sub: Science

Duration: 45 minutes
Max Marks: 20

General Instructions:

- The question paper consists of 1 page and a total of 11 questions.
- All questions are compulsory.

I. Fill in the blanks with a suitable answer.

5X1M=5M

1. The loudness of sound is measured in _____.
2. _____ is the maximum displacement of a vibrating object from its mean position.
3. Sound cannot travel through _____.
4. The colored part of the eye that controls the size of the pupil is _____.
5. A lens that is thicker in the middle and thinner at the edges is called a _____.

II. Answer the following questions.

6. A school bell vibrates 200 times in 5 seconds. Calculate the frequency of the sound produced. Also name the SI unit of frequency. **2M**
7. Describe the function of the retina and the optic nerve in the process of seeing. **2M**
8. Distinguish between regular and diffused reflection of light with examples of each. **2M**
9. What is a kaleidoscope? Write its construction and how it forms multiple images. **3M**
10. How does the frequency of a sound wave affect its shrillness and the amplitude affect its loudness? Provide examples. **3M**
11. What is dispersion of light? Describe how a rainbow is formed in the sky. **3M**



Jindal Vidya Mandir, JSW Hill Side Township
Weekly Test- 8 (Term II) 2025-26

Class: IX
Subject: English

Duration: 45 minutes
Max Marks: 20

General Instructions:

-
- The question paper consists of 4 pages.
 - All questions are compulsory.
-

I. Answer the following questions, based on the passage above. (1×10 = 10)

1. The growing preference for indigenous craft items is a welcome trend in today's globalised world, where mass-produced goods often dominate markets. These handcrafted products, rooted in the cultural and artistic traditions of their regions, offer more than just aesthetic appeal. They symbolise sustainability, support local economies, and preserve the heritage of diverse communities.

2. One of the primary reasons for choosing indigenous crafts is their eco-friendliness. Unlike factory-made products, most traditional crafts are created using natural, locally sourced materials. Artisans often employ time-tested methods that minimise waste and avoid harmful industrial processes. For example, pottery made from local clay, handwoven textiles using organic dyes, and bamboo-based crafts all have a much lower environmental footprint compared to their machine-made counterparts. By opting for these items, consumers indirectly contribute to reducing pollution and promoting sustainable practices.

3. Supporting indigenous crafts also strengthens local economies. Many artisans depend solely on their craft for livelihood, often working in small communities where opportunities for other forms of employment are limited. When people purchase their products, it provides a direct income to these artisans, empowering them and encouraging their craftsmanship. Initiatives like fair trade further ensure that artisans receive fair wages, fostering economic stability within their communities.

4. Moreover, indigenous craft items help preserve cultural heritage. Every handcrafted product carries a story—a glimpse into the traditions, beliefs, and skills passed down through generations. In India, whether it's paintings, terracotta jewellery, sculptures, athangudi tiles, mud work frames or many others, each item reflects the unique identity of its region. By choosing these crafts, people not only appreciate the artistry but

also help keep these traditions alive in an era where cultural homogenisation threatens diversity.

5. In addition to their economic and cultural value, indigenous crafts add a personal touch to homes and wardrobes. Unlike mass-produced items, which often lack individuality, handcrafted products are unique. Each piece bears the imprint of the artisan's effort, creativity, and dedication, making it special for the buyer.

6. However, the preference for indigenous crafts requires sustained efforts to thrive. Governments, organisations, and consumers all have roles to play. Policies that promote local craftsmanship, provide training to artisans, and create global platforms for showcasing their work can boost the visibility and demand for these products. Consumers, too, must actively seek out and invest in handmade crafts rather than opting for cheaper, factory made alternatives. Choosing indigenous craft items is a meaningful step toward a more sustainable and culturally enriched world.

I. Why is the growing preference for indigenous craft items described as a 'welcome trend' in paragraph 1? **1**

II. According to paragraph 1, the indigenous craft items have all of the following qualities EXCEPT being: **1**

A. handcrafted products B. rooted in artistic traditions

C. aesthetic in appeal D. easily accessible

III. Complete the following by selecting the correct option from those given in the brackets. The usage of locally sourced materials makes the indigenous crafts _____ (traditional / eco-friendly). (Paragraph 2) **1**

IV. Select the option that is True from (a)-(c) given for what the phrase, 'time-tested methods' suggests in paragraph 2. **1**

A. Artisans use traditional techniques that have been refined and proven effective over generations

B. Artisans use outdated practices that are no longer relevant in today's commercial markets.

C. Artisans follow techniques that prioritise speed and mass production over craftsmanship.

V. Complete the analogy by selecting one of the two correct options (a), (b) fair trade: fair wages:: _____ : _____ (Paragraph 3) **1**

(a) employment: job security (b) mass production : reduced prices

VI. Why is supporting indigenous crafts considered an effective way to improve the economic conditions of small communities? (Paragraph 3) **2**

VII. What are the main ideas of paragraph 4 and paragraph 5? **1**

- i) Choosing indigenous crafts helps preserve cultural heritage ii) Handcrafted products lack individuality. iii) Indigenous crafts reflect the artisan's creativity. iv) Indigenous crafts promote uniformity by erasing regional differences in artistic traditions. v) Cultural homogenisation encourages people to choose indigenous crafts over mass-produced goods

Select the correct option.

Options	Main idea of paragraph 4	Main idea of paragraph 5
A.	ii	iv
B.	v	ii
C.	i	iii
D.	iv	ii

VII. Why is it important for consumers to take an active role alongside government and organisations in sustaining indigenous crafts? (Paragraph 6) **2**

II. Report Anil's question to his mother: "Where did you keep my bag?" **1**

III. Report the following by completing the sentence correctly.

"Don't try mending the trousers yourself," she warned him. She warned him _____.

1

IV. Edit the following sentences by correcting the errors in determiners. (2×1 = 2)

Error

Correction

a) She has little friends to support her during tough times. _____

b) He gave me the useful advice before the exam. _____

V. In the chapter "A House Is Not a Home" by Zan Gaudio, the author experiences great emotional loss after the fire. How does the return of his cat help him rebuild not just

his life but also his sense of belonging and identity? Explain with reference to the bond between the author and his pet.

6