

Term-I Examination (2025-26)

Set A

Class I/Sec: \_\_\_\_\_

Duration: 2hrs

Subject: Mathematics

Max Marks: 40

Name: \_\_\_\_\_

Roll No: \_\_\_\_\_

Invigilator's signature: \_\_\_\_\_

Date: \_\_\_\_\_

---

General Instructions:

i) This question paper contains 5 main questions in 4 pages.

ii) All questions are compulsory.

---

Section A

I. Choose the correct answer.

7X1M=7M

1) Which number comes just after 29? \_\_\_\_\_


- A) 28      B) 29      C) 30      D) 20

2) What is the sum of 12 and 7? \_\_\_\_\_

- A) 18      B) 19      C) 20      D) 21

3) Which number has 3 tens and 6 ones? \_\_\_\_\_

- A) 63      B) 30      C) 35      D) 36

4)  Name the given solid shape \_\_\_\_\_

- A) cylinder      B) cube      C) cone      D) cuboid

5) Compare the following numbers using the correct sign. 26  36

- A) >      B) <      C) =      D) +

6) I have 2 long sides and 2 short sides. What is my name? \_\_\_\_\_

- A) Triangle      B) Square      C) Rectangle      D) Circle

7) On subtraction of 3 from 6, we get \_\_\_\_\_

- A) 5      B) 6      C) 3      D) 9

2. Arrange the numbers from 43 to 50 in correct order of its counting.

45, 47, 46, 50, 48, 43, 44, 49


--	--	--	--	--	--	--	--

3. Complete the number pattern.

a. 3, 6, 9, \_\_\_\_\_, \_\_\_\_\_, \_\_\_\_\_,


b. 2, 4, 8, \_\_\_\_\_, \_\_\_\_\_, \_\_\_\_\_,

4. Each bundle has 10 sticks. Count the sticks and write number of tens and ones.

a. 

T	O

 \_\_\_\_\_ tens + \_\_\_\_\_ ones

b. 

T	O

 \_\_\_\_\_ tens + \_\_\_\_\_ ones

5. Add or subtract as required.

a)  $32$

$+ 5$

--

b)  $48$

$- 6$

--

6. a. Arrange the numbers in increasing order.

34 , 41 , 12 , 23

\_\_\_\_\_

b. Arrange the numbers in decreasing order.

49 , 36 , 15 , 29

\_\_\_\_\_



**Jindal Vidya Mandir, JSW Hill Side Township**  
**Term-I Examination (2025-26)**

**Set- A**

Class: I/ Sec: \_\_\_\_\_

Max Marks: 40

Sub: EVS

Duration: 2 Hrs.

Name: \_\_\_\_\_

Roll No: \_\_\_\_\_

Invigilator's Signature: \_\_\_\_\_

Date: \_\_\_\_\_

**General Instructions:**

- This question paper is printed in 4 pages and 32 questions.
- It consists of two sections A and B. Section A has objective type questions and section B has subjective type questions.
- All the questions are compulsory.

**Section-A**

I. Choose the correct word from the box to fill in the blanks. **5X1=5M**

Jindal Vidya Mandir, HST	herb	surname	dirty	weak
--------------------------	------	---------	-------	------

1. The name of my school is \_\_\_\_\_.
2. Our last name is called our \_\_\_\_\_.
3. Germs grow in \_\_\_\_\_ places.
4. Creepers have a \_\_\_\_\_ stem and need support to stand.
5. Coriander is an example of a \_\_\_\_\_.

23. Write one thing that parents do for you?

---

---

24. Name any four things we get from plants.

---

---

25. Name any two National Days.

---

---

26. Who stitches clothes for us?

---

---

27. Name any one good habit we should follow in the school.

---

---

**IV. Answer the following questions in two sentences.**

**4X2=8M**

28. What is a small family?

---

---

---

---

29. What is a neighbourhood?

---

---

---

---



## Jindal Vidya Mandir, JSW Hill Side Township

### Term – I Examination (2025-26)

Class I /Sec : \_\_\_\_\_

Set – A

Max. Marks : 40

Sub : Hindi ( II Language)

Duration : 2 hrs

Name : \_\_\_\_\_

Roll No. : \_\_\_\_\_

Invigilator's Sign. : \_\_\_\_\_

Date : \_\_\_\_\_

#### General Instructions:

- 1) सभी प्रश्नों को हल करना अनिवार्य है।
- 2) कुल प्रश्न संख्या 8 है।

प्रश्न I नीचे दी गई बारहखड़ी को पूरा करो।

5x1=5

1) क \_\_\_\_\_ कि की \_\_\_\_\_ के \_\_\_\_\_ चो कौं कं \_\_\_\_\_

2) त ता \_\_\_\_\_ ती \_\_\_\_\_ तू \_\_\_\_\_ तै \_\_\_\_\_ तंतः

प्रश्न II नीचे दिए गए शब्दों में उचित मात्रा लगा कर शब्द पूरे करो।

6x1=6

1) कल 3) म\_\_\_\_र 5) दाद\_\_\_\_

2) ख\_\_\_\_र 4) क\_\_\_\_आ 6) म\_\_\_\_ला

प्रश्न III वर्णों को जोड़कर शब्द बनाओ।

5x1=5

क) आ + फ + त = \_\_\_\_\_

ख) त + र + की + ब = \_\_\_\_\_

प्रश्न V मात्रा शब्द को छाँट कर अलग-अलग लिखो ।

6x1=6

( मोर , कुछ , जोकर , दुकान , दुम , तोहफा )

उ

---

---

---

ओ

---


---

---

प्रश्न VI चित्र को पहचान कर सही शब्द लिखो ।


4x1=4

1)



---

2)




---

3)



---

4)



---



# Jindal Vidya Mandir, JSW Hill Side Township

## Term-I Examination(2025-26)

Class :I/Sec : \_\_\_\_\_

Set-A

Duration: 1 hour

Subject : General Knowledge

Max. Marks : 30

Name : \_\_\_\_\_

Roll No.: \_\_\_\_\_

Invigilator's sign : \_\_\_\_\_

Date : \_\_\_\_\_

### General Instructions:

- This paper consists of 3 pages and 9 main questions.
- All the questions are compulsory.

### I. Fill in the blanks by using the help box.

5X1=5

( Peacock, lights, tongue, ears, Ganga)

1. I taste with my \_\_\_\_\_
2. Our national bird is \_\_\_\_\_
3. Diwali is known as the festival of \_\_\_\_\_
4. Our national river is \_\_\_\_\_
5. I hear with my \_\_\_\_\_

### II. Match the followings.

5X1=5

A	B	
1. Taj Mahal	a. Delhi	( )
2. National flower	b. Rainbow	( )
3. India Gate	c. Agra	( )
4. Seven colours	d. Hyderabad	( )
5. Charminar	e. Lotus	( )

### III. Write any two modes of transport in the given column.

3X1=3

Land Transport	Water Transport	Air Transport



4. \_\_\_\_\_

VII. Fill in the missing letters to complete the names of homes of these animals.

2X1=2


1. I am a sheep. I live in a p \_\_\_ n

2. I am a horse. I live in s \_\_\_ a b \_\_\_ e

VIII. Identify the place and write its name in the provided blanks using the helpbox.

3X1=3


library, bus stand, museum



1. \_\_\_\_\_



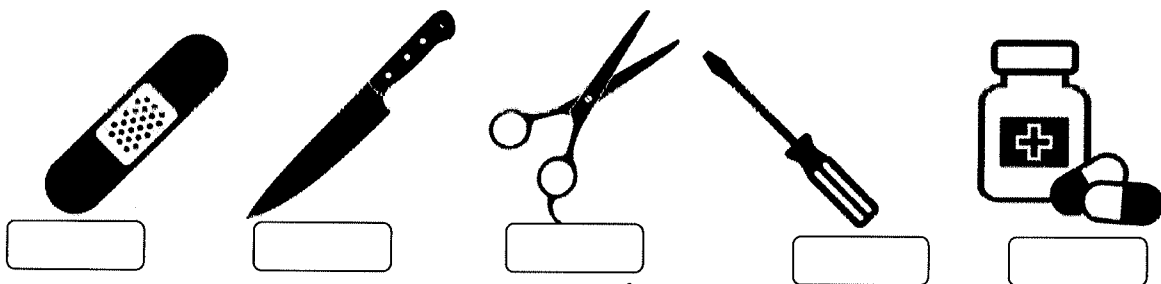
2. \_\_\_\_\_



3. \_\_\_\_\_

IX. Tick (✓) the items you require to prepare your first aid box. Cross out (X) the items that are not required in it.

3X1=3





17/9/25 Day-5

**Jindal Vidya Mandir, JSW Hill Side Township**  
**Term-I Examination(2025-26)**

Class/Sec : I/\_\_\_

Set-A

Max.Marks: 40

Subject: Kannada (II Language)

Duration: 2 Hours

Name : \_\_\_\_\_

Roll No.: \_\_\_\_\_

Invigilator's Sign: \_\_\_\_\_

Date : \_\_\_\_\_

ಸೂಚನೆಗಳು:

- \* ಈ ಪ್ರಶ್ನೆಪತ್ರಿಕೆಯು A, B, C ಮತ್ತು D ಎಂಬ ಭಾಗಗಳನ್ನು ಒಳಗೊಂಡಿರುತ್ತದೆ.
- \* ಈ ಪ್ರಶ್ನೆಪತ್ರಿಕೆಯು ಒಟ್ಟು 13 ಮುಖ್ಯ ಪ್ರಶ್ನೆಗಳಿಂದ ಕೂಡಿದ್ದು, 4 ಪುಟಗಳನ್ನು ಹೊಂದಿದೆ.
- \* ಪ್ರತಿಯೊಂದು ಪ್ರಶ್ನೆಗಳ ಸೂಚನೆಗಳನ್ನು ಸರಿಯಾಗಿ ಓದಿಕೊಂಡು ಉತ್ತರಿಸಿರಿ.

ಭಾಗ- A	ವಾಚನ ಮತ್ತು ಗ್ರಹಿಕಾ ಕೌಶಲ್ಯ	10 ಅಂಕಗಳು
ಭಾಗ- B	ಅನ್ವಯಿಕ ವ್ಯಾಕರಣ	10 ಅಂಕಗಳು
ಭಾಗ- C	ಬರವಣಿಗೆ ಕೌಶಲ್ಯ	10 ಅಂಕಗಳು
ಭಾಗ- D	ಪಠ್ಯಗಳ ಅಧ್ಯಯನ	10 ಅಂಕಗಳು
	ಒಟ್ಟು ಅಂಕಗಳು	40 ಅಂಕಗಳು



ಭಾಗ - A ( 10 ಅಂಕಗಳು)


(ವಾಚನ ಮತ್ತು ಗ್ರಹಿಕಾ ಕೌಶಲ್ಯ)



I. ಈ ಕೆಳಗಿನ ಪಠ್ಯೇತರ ಗದ್ಯಭಾಗವನ್ನು ಓದಿಕೊಂಡು, ಬಿಟ್ಟ ಸ್ಥಳಗಳಲ್ಲಿ ಸೂಕ್ತ ಉತ್ತರವನ್ನು ಆರಿಸಿ ಬರೆಯಿರಿ.

(ಮರ, ಹುಲಿ, ಆಹಾರ, ಜಿಂಕೆ)

5X1=5M

ಒಂದು  ಯು ಬಹಳ ಹಸಿದಿತ್ತು. ಅದು  ವನ್ನು

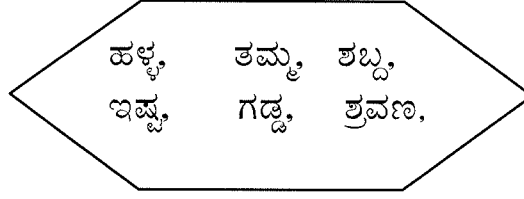
ಹುಡುಕಾಡಿತು. ಆಯಾಸದಿಂದ  ದ ಕೆಳಗೆ ಮಲಗಿತು. ಅಲ್ಲಿಯೇ ಇದ್ದ ಒಂದು

 ಯನ್ನು ನೋಡಿತು. ಆ ಜಿಂಕೆಯನ್ನು ಹಿಡಿಯಲು 

\_\_\_\_\_ಯು ಓಡಿತು.

VI. ಈ ಕೆಳಗೆ ಕೊಟ್ಟಿರುವ ಒತ್ತಕ್ಷರ ಪದಗಳಲ್ಲಿ, ಸಜಾತಿ/ವಿಜಾತಿ ಒತ್ತಕ್ಷರ ಪದಗಳಾಗಿ ವಿಂಗಡಿಸಿ ಬರೆಯಿರಿ.

1X3=3M



ಸಜಾತಿ ಒತ್ತಕ್ಷರ ಪದಗಳು : \_\_\_\_\_

ವಿಜಾತಿ ಒತ್ತಕ್ಷರ ಪದಗಳು : \_\_\_\_\_

ಭಾಗ-C (10 ಅಂಕಗಳು)



(ಬರವಣಿಗೆ ಕೌಶಲ್ಯ)

VII. ಈ ಕೆಳಗಿನ ಚಿತ್ರಗಳನ್ನು ಗುರುತಿಸಿ, ಅವುಗಳ ಹೆಸರನ್ನು ಬರೆಯಿರಿ.

2x1=2M

1.

2.



VIII. ಈ ಕೆಳಗಿನ ವಾರದ ದಿನಗಳನ್ನು ಪೂರ್ಣಗೊಳಿಸಿರಿ.

1x2=2M

1). ರವಿವಾರ, ಸೋಮವಾರ, \_\_\_\_\_, ಬುಧವಾರ, \_\_\_\_\_, ಶುಕ್ರವಾರ

ಶನಿವಾರ.

IX. ಈ ಕೆಳಗೆ ಕೊಟ್ಟಿರುವ ಗುಣಿತಾಕ್ಷರಗಳನ್ನು ಪೂರ್ಣಗೊಳಿಸಿರಿ.

2x2=4M

1. ಗ, \_\_\_\_\_, ಗಿ, ಗೀ, \_\_\_\_\_, ಗೂ, \_\_\_\_\_, ಗೆ, ಗೇ, \_\_\_\_\_, ಗೊ, \_\_\_\_\_, ಗೌ, \_\_\_\_\_, ಗಃ

2. ರ, ರಾ, \_\_\_\_\_, ರೀ, \_\_\_\_\_, \_\_\_\_\_, ರೈ, \_\_\_\_\_, ರೇ, ರೈ, \_\_\_\_\_, ರೋ, \_\_\_\_\_, ರಂ, ರಃ



**JINDAL VIDYA MANDIR, JSW HILL SIDE TOWNSHIP**  
**Term – I Examination (2025-26)**

Class : I \_\_\_\_

Set – A

Roll No. \_\_\_\_

Date : \_\_\_\_\_

Subject : Art

Name : \_\_\_\_\_

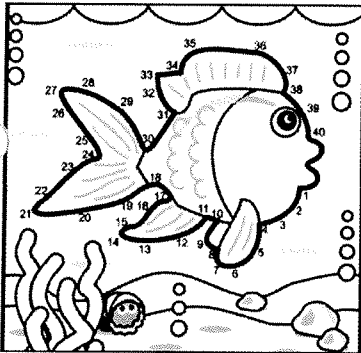
Max Marks : 50

Invigilator's Sign \_\_\_\_\_

Duration : 1 Hours

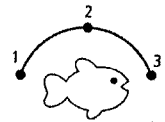
**Theme : Fish**

- |   |  |
|---|--|
| 1. Drawing Skills (10 Marks)                | 2. Creativity & Originality (10 Marks) |
| 3. Coloring / Shading / Painting (10 Marks) | 4. Composition & Layout (10 Marks)     |
| 5. Neatness & Presentation (5 Marks)        | 6. Theme Relevance (5 Marks)           |

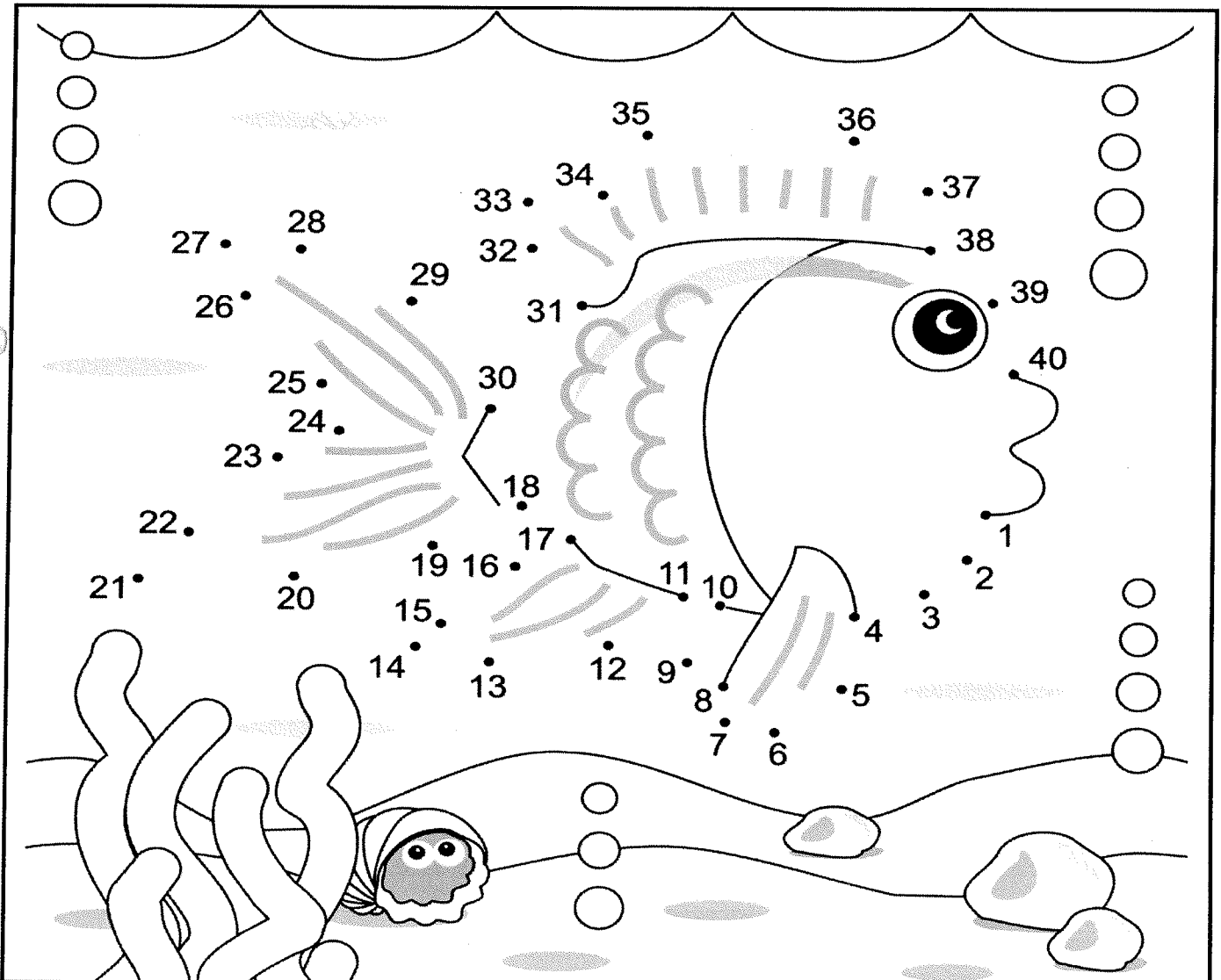


Look at the figure given below, draw the fish by join the numbers in ascending order and fill the color of your choice.

Example :



**Connect the Dots**





**Jindal Vidya Mandir, JSW Hill Side Township**  
**Term – I Examination (2025-26)**

Class/Sec: I/ \_\_\_\_\_

Duration :1 Hour

Sub: Hindi (III Language)

Max Marks: 30M

Name : \_\_\_\_\_

Roll No. : \_\_\_\_\_

Date : \_\_\_\_\_

SET-A

Invigilator's Sign. : \_\_\_\_\_





**General Instructions:**

- सभी प्रश्न अनिवार्य हैं।
- कुल 6 प्रश्न हैं।

प्रश्न 1 ) दिए गए चित्रों के नाम का पहला अक्षर लिखिए।

(5X1M=5M)






(Identify the picture and write the first letter of its name.)

i.		_____
ii.		_____
iii.		_____
iv.		_____

प्रश्न4) चित्रों का उनके नाम के पहले अक्षर के साथ मिलान कीजिए।

(5X1M=5M)

(Match the pictures with first letter of their names)

- i.  घ
- ii.  ट
- iii.  क
- iv.  झ
- v.  च

प्रश्न5) खाली स्थानों में उचित व्यंजन लिखिए ।

(5X1M=5M)

(Fill in the blanks with the appropriate consonant)

i. क — ग — घ ड

ii. — ठ — ढ —

Class: I / Sec \_\_\_\_\_

Subject: Kannada (III Language)

Name: \_\_\_\_\_

Invigilator's sign: \_\_\_\_\_

Max.Marks :30

Duration: 1Hour

Roll.No \_\_\_\_\_

Date: \_\_\_\_\_

**General Instructions:**

- This paper contains 6 mains and 2 pages.
- All questions are compulsory, read the Instructions carefully and answer.

I. ಈ ಕೆಳಗೆ ಕೊಟ್ಟಿರುವ ಕನ್ನಡ ವರ್ಣಮಾಲೆಯನ್ನು ಪೂರ್ಣಗೊಳಿಸಿರಿ.

7X1=7

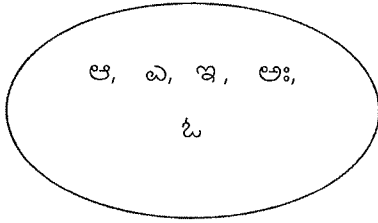
(Complete the Kannada alphabets given below)

ಅ			ಈ		ಊ	ಋ		ಋ	ಌ			ಐ	ಒಂ	
---	--	--	---	--	---	---	--	---	---	--	--	---	----	--

II. ಈ ಕೆಳಗೆ ಕೊಟ್ಟಿರುವ ಅಕ್ಷರಗಳನ್ನು ವಿಂಗಡಿಸಿ ಸೂಕ್ತ ಸ್ಥಳದಲ್ಲಿ ಬರೆಯಿರಿ.

5X1=5

Divide the letters given below and write them in the appropriate place.



ಸ್ವರಗಳು (Vowels)	ಯೋಗವಾಹಗಳು (Yogavahagalu)

III. ಈ ಕೆಳಗೆ ಕೊಟ್ಟಿರುವ ವ್ಯಂಜನಗಳನ್ನು ಅನುಕ್ರಮವಾಗಿ ಬರೆಯಿರಿ.

3X1=3

(Write the consonants given below in order)

1. ಗ, ಕ, ಖ, ಜ, ಘ = 

--	--	--	--	--

2. ಚ, ಝ, ಞ, ಜ, ಇ = 

--	--	--	--	--

3. ಟ, ಡ, ಣ, ಠ, ಡಠ = 

--	--	--	--	--

15/9/25 DAY 04/11



Jindal Vidya Mandir, JSW Hill Side Township  
Term-I Examination (2025-26)

Set-A

Class: I/ Sec: \_\_\_\_\_

Max Marks: 30

Sub: Information Technology

Duration: 1Hr

Name: \_\_\_\_\_

Roll no: \_\_\_\_\_

Invigilator's Signature: \_\_\_\_\_

Date: \_\_\_\_\_

General Instructions:

- This paper consists of 3pages and 7 mains.
- All the questions are compulsory.

I. Fill in the blanks with the help of the given words.

5X1M=5M

pictures	mouse	batteries	sums	car
----------	-------	-----------	------	-----

1. Calculators need \_\_\_\_\_ to work.
2. I can solve \_\_\_\_\_ on a computer.
3. A \_\_\_\_\_ helps us to move from one place to another
4. Computers can be used to draw \_\_\_\_\_.
5. A \_\_\_\_\_ is a pointing device.

II. State whether given statements are true or false.

6X1M=6M

1. We can watch movies on a computer monitor.
2. A mouse has a button and two scroll wheels.
3. Computers can be used to cook food.
4. We use a camera to take photos.
5. A television uses fuel to work.
6. Rainbow is a natural thing.

VI. Answer the following questions.

3X1M=3M

Q1. Write the name of any two smart machines that you see in your house?

Ans. \_\_\_\_\_  
\_\_\_\_\_

Q2. Write the names of two natural things.




Ans. \_\_\_\_\_  
\_\_\_\_\_

Q3. List the main parts of a computer.

Ans. \_\_\_\_\_  
\_\_\_\_\_

VII. Identify the pictures. Write N for natural things, and H for human-made things.

5X1M=5M





Jindal Vidya Mandir, JSW Hill Side Township  
Term I Examination (2025-2026)

Set-A

Class: I / Sec \_\_\_\_\_

Subject: Yoga

Name: \_\_\_\_\_

Invigilator's sign: \_\_\_\_\_

Max.Marks :30

Duration: 1Hour

Roll.No \_\_\_\_\_

Date: \_\_\_\_\_

**General Instuctions:**

- This paper contains 6 mains 3 pages.
- All questions are compulsory. Read the instructions carefully and answer.

**I. Choose the correct answer for questions given below.**

**5X1=5**

1. Where is the best place to do yoga?  
a. A noisy room  
b. A calm and peaceful place  
c. Next to Television  
d. A crowded area
2. What is one thing Pranayama can help your body to do better?  
a. Run faster  
b. Eat more food  
c. Jump higher  
d. Breath better
3. Which of these is a type of Pranayama?  
a. Elephant breath  
b. Bee breath(bhramari)  
c. Lion breath  
d. Fish breath
4. What part of your body does Pranayama use most?  
a. breath  
b. legs  
c. arms  
d. eyes
5. When doing Tree pose, where should you not put your foot?  
a. knee  
b. skin  
c. on your thigh  
d. floor

**V. Match the followings.**

**6X1=6**

A	B	
1. Puraka	a. bellows breath	(    )
2. Rechaka	b. one leg	(    )
3. Vrikshasana	c. to join	(    )
4. Tadasana	d. Exhale	(    )
5. Yoga	e. inhale	(    )
6. Bhastrika	f. mountain pose	(    )

**VI. Write the name of the asanas with the given helpbox.**

**4X1=4**

(Sukhasana, Tadasana, Vrikshasana, Virabhadrasana)

1.




\_\_\_\_\_

2.



\_\_\_\_\_

3.



\_\_\_\_\_

4.



\_\_\_\_\_



**Jindal Vidya Mandir, JSW Hill Side Township**  
**Term-I Examination (2025-2026)**

**Class: I/ \_\_\_\_\_**

**SET-A**

**Max. Marks: 30**

**Subject: Music**

**Duration: 1Hour**

**Student name: \_\_\_\_\_**

**Roll no: \_\_\_\_\_**

**Invigilator's Sign: \_\_\_\_\_**

**Date: \_\_\_\_\_**

---

**General Instructions:**

- ❖ This question paper consists of 4 pages and 5 main questions.
  - ❖ All questions are compulsory.
- 

**I. Choose the correct option and complete the sentences.**

**10×1M =10M**

1. Which swara comes first? \_\_\_\_\_.

- a) ma                  b) re                  c) sa                  d) ga

2. Which of these is a musical instrument? \_\_\_\_\_.

- a) pen                  b) tabla                  c) spoon                  d) book

3. Which note comes after 'Sa' in Indian music? \_\_\_\_\_.

- a) pa                  b) re                  c) ga                  d) ma

4. What do we use to listen to music? \_\_\_\_\_.

- a) eyes                  b) nose                  c) ears                  d) hands

5. We play the harmonium with our \_\_\_\_\_.

- a) hands                  b) feet                  c) sticks                  d) spoon

6. Who sings song? \_\_\_\_\_.

- a) painter                  b) singer                  c) dancer                  d) actor

IV. Look at the picture and choose the correct name from the help box. Write the answer in the blank. 5x1M=5M

mic, piano, guitar, flute, dholak

