



Jindal Vidya Mandir, JSW Hill Side Township

Term-II Examination (2025-26)

Set - B

Class: I/ Sec: _____

Sub: English

Name: _____

Invigilator's Signature: _____

Max Marks: 40

Duration: 2Hrs

Roll No: _____

Date: _____

General Instructions:

- This paper consists 7 pages.
- Question paper is divided in four sections, Section A(Reading), Section B (Writing), Section C (Grammar), Section D(Literature)
- All the questions are compulsory.

Section: A (Reading) (6 M)

I. Read the passage and answer the following questions.

3X1=3



In a small village, there lived a kind boy named Rohan. Every morning, he fed the birds near his house. One day, he saw a puppy shivering in the rain. Rohan took the puppy home and gave it milk to drink. The puppy wagged its tail and became Rohan's best friend.

1. Choose the correct answer.

A. Rohan lived in a _____.

i. town ii. village

B. The puppy was _____ in the rain.

a. playing b. shivering

2. Find the opposite words from the passage:

a. big X _____ b. far X _____

II. Read the poem and answer the questions.

3X1=3

The moon is shining bright,
Glowing softly in the night.
Stars are twinkling all around,
Lighting up the sky without a sound.

A. Tick the correct answer.

1. The moon shines _____
a. in the night b. in the morning

B. Complete the sentence from the poem.

1. Stars are twinkling _____

C. Write two rhyming words from the poem:

1. _____ _____
2. _____ _____

Section: B (Creative writing) (5 M)

III. Imagine "you are a Santa Clause." Write two sentences about yourself ?

2X1=2

1. _____
2. _____

IV. Look at the picture and answer the following questions.

3X1=3



1. What is the family doing?

Ans. _____

2. What are they eating?

Ans. _____

3. What do you see in the background?

Ans. _____

Section: C (Grammar) (20 M)

IV A. Fill in the blanks by choosing the correct option.

4X½=2

1. She _____ (is/are) my sister.

2. I _____ (am/is) writing a story.

3. They _____ (am/are) good friends.

4. He _____ (is/are) going to school.

IV B. Fill in the blanks by forming Adverbs to the words given in the bracket.

4X½=2

1. The baby slept _____ (sound).

2. The dog barked _____ (loud).

3. Maya finished her homework _____ (quick).

4. He walked _____ (slow).

IV C. Underline the noun in these sentences and rewrite the same by replacing it with a pronoun.

2X1=2

1. Meera is reading.

Ans. _____

2. Raju and Tina are eating.

Ans. _____

IV D. Join each pair of sentences using either "and" or "but".

4X1=4

1. The sun is bright. The sky is cloudy.

Ans. _____

2. Riya sang. Riya danced.

Ans. _____

3. The bag is heavy. The bag is new.


Ans. _____

4. I like tea. I don't like coffee.


Ans. _____

IV E. Look at the picture and complete the sentences with the suitable preposition word.


4X½ =2



1. The boy is _____ the door.



2. The cat is _____ the table.



3. The cat is _____ the table.



4. The boy is standing _____ the house.

IV F. Rewrite these sentences using full stops and capital letters correctly. 3X1=3

1. my mother cooks tasty food

Ans. _____

2. we go to the market on sunday

Ans. _____

3. the moon shines at night

Ans. _____

IV G . Read the passage and underline all the nouns. Then, write any 3 common nouns and 3 proper nouns on the scrolls. 6X ½ =3

Mia Mouse was a cheerful little mouse. She had a red scarf that she liked very much. Her friend Tommy gave her a small wooden basket. On Sunday morning, she packed her scarf in the basket and walked to garden to meet Aunt Lily.

A scroll with a grey tab on the left side. The tab is labeled "Common Noun". The scroll is empty and ready for writing.

A scroll with a grey tab on the left side. The tab is labeled "Proper Noun". The scroll is empty and ready for writing.

IV H. Arrange words in the correct order to form meaningful sentences. 2X1=2

1. bananas these are

Ans. _____

2. is tiger a that

Ans. _____

Section: D (Literature) (9 M)

V . Answer the following questions.

3X1=3

1. Why did the Goddess reward the woodcutter?

Ans. _____

2. How many colours are there in the rainbow? Name them.

Ans. _____

3. What is the favorite room of the cat?

Ans. _____

VI. Read these sentences and answer the questions.

4X1=4

1. "Why did you come so late?"

A To whom were these words said ?

Ans. _____

2. "Why are you crying, woodcutter?"

A. Who said these words?

Ans. _____

3. "Shall I take my raincoat with me?"

A. To whom were these words said ?

Ans. _____

4. "Yes ! Yes! this is my axe".

A. To whom were these words said ?

Ans. _____

II. Read the poem and answer the following questions.

2X½=1

I am so happy,

Do you know why?

There is a rainbow,

In the sky.

1. Why is the poet happy?

Ans. _____

2. Write the name of the poem.

Ans. _____

VIII. Tick the right options to complete these sentences.

2X½=1

1. The Goddess gave the woodcutter

a. the golden axe

b. the golden and the silver axe

2. The cat weighs a

a. ton

b. gallon



Jindal Vidya Mandir, JSW Hill Side Township

Term – II Examination (2025-26)

Class I /Sec :

Set –A

Max. Marks : 40

Sub : Hindi (II Language)

Duration : 2 Hrs

Name : _____

Roll No. : _____

Invigilator's Sign. : _____

Date : _____

General Instructions:

- 1) सभी प्रश्नों को हल करना अनिवार्य है।
- 2) कुल प्रश्न संख्या 12 है।

प्रश्न I नीचे दिए गए अपठित गद्यांश को ध्यान से पढ़कर प्रश्नों के उत्तर लिखिए -4X1=4M

रवि एक छोटा लड़का है। उसे पेड़ों पर चढ़ना बहुत अच्छा लगता है। एक दिन वह आम के पेड़ पर चढ़ गया और कुछ आम तोड़े। उसने अपने दोस्तों के साथ वे आम बाँट लिए।

1. रवि को क्या करना अच्छा लगता है?

उत्तर _____ (पेड़ पर चढ़ना , खेलना)

2. रवि किस पेड़ पर चढ़ा?

उत्तर _____ (आम , नीम)

3. रवि ने क्या तोड़ा?

उत्तर _____ (फूल , आम)

4. क्या रवि ने आम दोस्तों के साथ बाँटे?

उत्तर _____ (हाँ , नहीं)

प्रश्न II दिए गए शब्दों के एक नाम और लिखो ।

2X1=2M

क) सूर्य _____ (मकान , सूरज)

ख) वर्षा _____ (बारिश , तालाब)

प्रश्न III दिए गए शब्दों के सही विलोम शब्द लिखिए।

2X1=2M

क) छोटा X _____ (बड़ा , नमकीन)

ख) मीठा X _____ (कड़वा , अच्छा)

प्रश्न IV दिए गए शब्दों के वचन बदल कर लिखिए।

2X1=2M

क) फूल X _____ (फूली , फूलों)

ख) बच्चा X _____ (बच्चे , बच्ची)

प्रश्न V दिए गए शब्दों के लिंग बदलकर लिखिए।

2X1=2M

क) राजा X _____ (रानी , राणा)

ख) शेर X _____ (शेर , शेरनी)

प्रश्न VI दिए गए पठित गद्यांश को पढ़कर निम्न प्रश्नों के उत्तर लिखिए। 2X1=2M

एक जंगल में भालू और हिरन रहते थे। वह अच्छे मित्र थे। आपस में मिलकर खेलते-कूदते और मजे करते थे। दोनों अपना-अपना भोजन भी मिल-बाँटकर खाते थे।

प्रश्न 1) जंगल में कौन-कौन रहता था ? (भालू और हिरन , शेर और खरगोश)

उत्तर _____

प्रश्न 2) दोनों क्या बाँटकर खाते थे ? (भोजन , पत्ते)

उत्तर _____

प्रश्न VII दिए गए प्रश्नों के उत्तर एक शब्द में लिखो ।

4X1=4M

क) कैसा मौसम था ?

उत्तर _____

ख) पानी कौन लाया ?

उत्तर _____

ग) पास में कौन सा पेड़ था ?

उत्तर _____

घ) मोर कहाँ नाचता था ?

उत्तर _____

प्रश्न VIII दिए गए प्रश्नों के उत्तर एक वाक्य में लिखिए ।

4X2=8M

क) भालू हिरन के लिए क्या लाया ?

उत्तर _____

ख) ई - रिक्शावाला रिक्शा चलाते समय क्या कर रहा था ?

उत्तर _____


ग) मानव और रत्ना क्यों खुश थे ?

उत्तर _____

घ) शिकारी ने मृग को क्यों नहीं मारा ?

उत्तर _____

प्रश्न IX अपने मनपसंद फल का चित्र बना कर उसके बारे में तीन वाक्य लिखिए । 4x1=4M



प्रश्न X नीचे दिए गए शब्द से शब्द- सीढ़ी पूरी कीजिए ।

4X1=4M

जल

आम

प्रश्न XI सप्ताह के दिनों के नाम से रिक्त स्थान को भरो ।

3X1=3M

(बुधवार , रविवार , शुक्रवार)


मंगलवार

बृहस्पतिवार

शनिवार

प्रश्न XII दिए गए चित्र को ध्यान से देख कर छः वस्तुओं के नाम लिखिए ।

3X1=3M





Jindal Vidya Mandir, JSW Hill Side Township

Term-II Examination(2025-26)

Class/Sec : I/___

Set-A

Max.Marks: 40

Subject: Kannada (II Language)

Duration: 2 Hours

Name : _____

Roll No.: _____

Invigilator's Sign: _____

Date : _____

ಸೂಚನೆಗಳು:

*ಈ ಪ್ರಶ್ನೆಪತ್ರಿಕೆಯು A, B, C ಮತ್ತು D ಎಂಬ ಭಾಗಗಳನ್ನು ಒಳಗೊಂಡಿರುತ್ತದೆ.

*ಈ ಪ್ರಶ್ನೆಪತ್ರಿಕೆಯು ಒಟ್ಟು 11 ಮುಖ್ಯ ಪ್ರಶ್ನೆಗಳಿಂದ ಕೂಡಿದ್ದು, 6 ಪುಟಗಳನ್ನು ಹೊಂದಿದೆ.

*ಪ್ರತಿಯೊಂದು ಪ್ರಶ್ನೆಗಳ ಸೂಚನೆಗಳನ್ನು ಸರಿಯಾಗಿ ಓದಿಕೊಂಡು ಉತ್ತರಿಸಿರಿ.

ಭಾಗ- A	ವಾಚನ ಮತ್ತು ಗ್ರಹಿಕಾ ಕೌಶಲ್ಯ	10 ಅಂಕಗಳು
ಭಾಗ- B	ಅನ್ವಯಿಕ ವ್ಯಾಕರಣ	10 ಅಂಕಗಳು
ಭಾಗ- C	ಬರವಣಿಗೆ ಕೌಶಲ್ಯ	8 ಅಂಕಗಳು
ಭಾಗ- D	ಪಠ್ಯಗಳ ಅಧ್ಯಯನ	12 ಅಂಕಗಳು
	ಒಟ್ಟು ಅಂಕಗಳು	40 ಅಂಕಗಳು

ಭಾಗ - A (10 ಅಂಕಗಳು)

(ವಾಚನ ಮತ್ತು ಗ್ರಹಿಕಾ ಕೌಶಲ್ಯ)

I. ಈ ಕೆಳಗಿನ ಪಠ್ಯೇತರ ಗದ್ಯಭಾಗವನ್ನು ಓದಿಕೊಂಡು, ಕೊಟ್ಟಿರುವ ಪ್ರಶ್ನೆಗಳಿಗೆ ಸೂಕ್ತ ಉತ್ತರವನ್ನು ಆರಿಸಿ, ಬರೆಯಿರಿ.

5x1=5M

ಒಂದು ಕೋತಿ ನದಿಯ ಹತ್ತಿರ ಇರುವ ಒಂದು ಮರದಲ್ಲಿ ವಾಸವಾಗಿತ್ತು. ಆ ಮರದ ಹಣ್ಣುಗಳನ್ನು ತಿನ್ನಲು ಮೊಸಳೆ ಬರುತ್ತಿತ್ತು. ಈ ರೀತಿ ಇಬ್ಬರೂ ಗೆಲೆಯರಾದರು. ಒಂದು ದಿನ ಮೊಸಳೆಯ ಹೆಂಡತಿ ಕೋತಿಯ ಹೃದಯ ತಿನ್ನಲು ಕೇಳಿತು. ಅದಕ್ಕೆ ಮೊಸಳೆ ಮೋಸದಿಂದ ಕೋತಿಯನ್ನು ತನ್ನ ಬೆನ್ನ ಮೇಲೆ ಕೂರಿಸಿಕೊಂಡು ನದಿಯ ಮಧ್ಯಕ್ಕೆ ಬಂದ ನಂತರ ಸತ್ಯವನ್ನು ಹೇಳಿತು. ಆಗ ಕೋತಿ ಹೇಳಿತು, “ನನ್ನ ಹೃದಯ ಮರದ ಮೇಲೆಯೇ ಬಿಟ್ಟಿದ್ದೇನೆ”. ಮೊಸಳೆ ಅದನ್ನು ಹಿಂದಕ್ಕೆ ಕರೆದುಕೊಂಡು ಹೋದಾಗ ಕೋತಿ ಮರವನ್ನು ಏರಿ ತನ್ನ ಪ್ರಾಣವನ್ನು ಉಳಿಸಿಕೊಂಡಿತು.

ಪ್ರಶ್ನೆಗಳು:

1. ಆ ಮರದ ಹಣ್ಣುಗಳನ್ನು ತಿನ್ನಲು _____ ಬರುತ್ತಿತ್ತು.

(i) ಮೊಸಳೆ (ii) ಹುಲಿ (iii) ಆಕಳು (iv) ಮೀನು

2. ಕೋತಿ ಮರವನ್ನು _____ ತನ್ನ ಪ್ರಾಣವನ್ನು ಉಳಿಸಿಕೊಂಡಿತು.

(i) ಏರಿ (ii) ಜಾರಿ (iii) ಬಾರಿ (iv) ಓಡಿ

3. ಒಂದು ದಿನ ಮೊಸಳೆಯ ಹೆಂಡತಿ ಕೋತಿಯ _____ ತಿನ್ನಲು ಕೇಳಿತು.

(i) ತಲೆ (ii) ಕಾಲು (iii) ಹೃದಯ (iv) ಮೆದುಳು

4. ಒಂದು _____ ನದಿಯ ಹತ್ತಿರ ಇರುವ ಒಂದು ಮರದಲ್ಲಿ ವಾಸವಾಗಿತ್ತು.

(i) ಜಿಂಕೆ (ii) ಕೋತಿ (iii) ಮೊಸಳೆ (iv) ನರಿ

5. ನದಿಯ ಮಧ್ಯಕ್ಕೆ ಬಂದ ನಂತರ _____ವನ್ನು ಹೇಳಿತು.

(i) ದುಃಖ (ii) ಸತ್ಯ (iii) ಗಾಬರಿ (iv) ಭಯ

II. ಈ ಕೆಳಗಿನ ಪಠ್ಯ ಗದ್ಯಭಾಗವನ್ನು ಓದಿಕೊಂಡು, ಕೊಟ್ಟಿರುವ ಪ್ರಶ್ನೆಗಳಿಗೆ ಸೂಕ್ತ ಉತ್ತರವನ್ನು ಆರಿಸಿ ಬರೆಯಿರಿ.

5x1=5M

ಒಂದು ಊರಲ್ಲಿ ಕಡಲಿನ ದಡದ ಮೇಲೆ ಒಂದು ಗುಡಿಸಲು ಇತ್ತು. ಅದರಲ್ಲಿ ಒಬ್ಬ ಬೆಸ್ತನು, ಅವನ ಹೆಂಡತಿ, ಅವನ ಮಗು, ಅವನ ಅಜ್ಜಿ ಹೀಗೆ ನಾಲ್ವರು ವಾಸವಾಗಿದ್ದರು. ಕಡಲಿಗೆ ಹೋಗಿ ಮೀನು ಹಿಡಿಯುವುದು ಆ ಬೆಸ್ತನ ಕೆಲಸ. ಅವನು ಹಿಡಿದು ತಂದ ಮೀನನ್ನು ಪೇಟೆಗೆ ಕೊಂಡು ಹೋಗಿ ಮಾರುವುದು ಅವನ ಹೆಂಡತಿಯ ಕೆಲಸ. ಅವಳು ಮಾರಿ ಉಳಿದ ಮೀನನ್ನು ಬಿಸಿಲಿಗೆ ಹಾಕಿ ಒಣಗಿಸುವುದು ಅಜ್ಜಿಯ ಕೆಲಸ. ಅಳುತ್ತಾ ಇರುವುದು ಮಗುವಿನ ಕೆಲಸ.

ಪ್ರಶ್ನೆಗಳು:

1. ಕಡಲಿಗೆ ಹೋಗಿ _____ ಹಿಡಿಯುವುದು ಬೆಸ್ತನ ಕೆಲಸ.

(i) ದನ (ii) ಮೀನು (iii) ಹುಲಿ (iv) ಆನೆ

2. _____ ಇರುವುದು ಮಗುವಿನ ಕೆಲಸ.

(i) ಅಳುತ್ತಾ (ii) ನಗುತ್ತಾ (iii) ಓಡಾಡುತ್ತಾ (iv) ಆಡುತ್ತಾ

3. ಕಡಲಿನ ದಡದಲ್ಲಿ ಒಂದು _____ ಇತ್ತು.

(i) ಗುಡಿಸಲು (ii) ಅರಮನೆ (iii) ಸರೋವರ (iv) ಕೊಳ

4. ಮೀನನ್ನು _____ ಹಾಕಿ ಒಣಗಿಸುತ್ತಾರೆ.

(i) ನೆರಳಿಗೆ (ii) ಬಿಸಿಲಿಗೆ (iii) ನೀರಿಗೆ (iv) ಮಳೆಗೆ

5. ಮೀನನ್ನು _____ ಕೊಂಡು ಹೋಗಿ ಮಾರುತ್ತಾರೆ.

- (i) ಹಳ್ಳಿಗೆ (ii) ಊರಿಗೆ (iii) ಪೇಟೆಗೆ (iv) ಮನೆಗೆ

ಭಾಗ-B (10 ಅಂಕಗಳು)

(ಅನ್ವಯಿಕ ವ್ಯಾಕರಣ)

III. ಈ ಕೆಳಗಿನ ವ್ಯಾಕರಣಾಂಶ ಪ್ರಶ್ನೆಗಳಿಗೆ ಸೂಕ್ತ ಉತ್ತರವನ್ನು ಆರಿಸಿ, ಬರೆಯಿರಿ.

8X1=8M

1. ಲಿಂಗಗಳಲ್ಲಿ _____ ವಿಧಗಳಿವೆ.

- (i) ೪ (ii) ೩ (iii) ೫ (iv) ೨

2. 'ದೀಪ' ಈ ಪದದ ಬಹುವಚನ ರೂಪ _____

- (i) ದೀಪಗಳು (ii) ದೀಪ (iii) ದೀಪದ (iv) ದೀಪವು

3. 'ಹೆದರಿಹನೇ' ಈ ಪದದ ಪ್ರಾಸಪದ _____

- (i) ಹಾವು (ii) ಬೆದರಿಹನೇ (iii) ಊಟ (iv) ಕಾಗದ

4. 'ಸಂತಸ' ಈ ಪದದ ಅರ್ಥ _____

- (i) ಮಗು (ii) ಮನೆ (iii) ಸಂತೋಷ (iv) ಓಡು

5. ಕನ್ನಡ ವರ್ಣಮಾಲೆಯಲ್ಲಿ _____ ಅಕ್ಷರಗಳಿವೆ.

- (i) ೩೫ (ii) ೪೯ (iii) ೫೦ (iv) ೨೪

6. 'ಹಬ್ಬ' ಇದು _____ ಒತ್ತಕ್ಷರ ಪದ.

- (i) ಸಜಾತಿ (ii) ವಿಜಾತಿ (iii) ಜಾತಿ (iv) ಸುಜಾತಿ

7. 'ಅಣ್ಣ' ಇದು _____ ಪದ.

- (i) ಸ್ತ್ರೀಲಿಂಗ (ii) ಪುಲ್ಲಿಂಗ (iii) ನಪುಂಸಕ ಲಿಂಗ (iv) ಶಿವಲಿಂಗ

8. 'ಇಷ್ಟ' ಇದು _____ ಒತ್ತಕ್ಷರ ಪದ.

- (i) ಸಜಾತಿ (ii) ವಿಜಾತಿ (iii) ಜಾತಿ (iv) ಸುಜಾತಿ

IV. ಈ ಕೆಳಗಿನ ಬಿಟ್ಟ ಸ್ಥಳಗಳಲ್ಲಿ ಸರಿಯಾದ ಪದವನ್ನು ಬರೆಯಿರಿ.

2x1=2M


1. ಮಂಜಿನ _____ ಮೋಡವು ಕರಗಲು ಚಂದಿರ ನಗುತಿಹನು.
2. ಬೆಳ್ಳಿಯ ಮೋಡದ _____ ಕಂಡು ಚಂದಿರ ಬೆದರಿಹನೇ.

ಭಾಗ -C (8 ಅಂಕಗಳು) ಬರವಣಿಗೆಕೌಶಲ್ಯ


V. ಈ ಕೆಳಗಿನ ಚಿತ್ರಗಳನ್ನು ಗುರುತಿಸಿ, ಅವುಗಳ ಹೆಸರನ್ನು ಬರೆಯಿರಿ.

2x1=2M

1.



2.



VI. ಈ ಕೆಳಗಿನ ಕನ್ನಡ ಸಂಖ್ಯೆಗಳನ್ನು ಅಕ್ಷರದಲ್ಲಿ ಬರೆಯಿರಿ.

3X1=3M

1. ೧೨ - _____
2. ೧೦ - _____
3. ೧೬ - _____

VII. ಈ ಕೆಳಗೆ ಕೊಟ್ಟಿರುವ ಯಾವುದಾದರೂ ಒಂದು ವಿಷಯವನ್ನು ಕುರಿತು 3 ವಾಕ್ಯಗಳನ್ನು ಬರೆಯಿರಿ.

1X3=3M

ಮೊಲ/ಜೋಕಾಲಿ

1. _____
2. _____
3. _____

ಭಾಗ - D (12 ಅಂಕಗಳು) ಪಠ್ಯಗಳ ಅಧ್ಯಯನ

VIII. ಈ ಕೆಳಗೆ ಕೊಟ್ಟಿರುವ ಪ್ರಶ್ನೆಗಳಿಗೆ ಒಂದು ವಾಕ್ಯದಲ್ಲಿ ಉತ್ತರ ಬರೆಯಿರಿ.

4X1=4M

1. ಯಾರನ್ನು ನೋಡಿ ವಿಣಾ ಸಂತಸಗೊಂಡಳು?

ಉ: _____

2. ಒಂದು ಪರಂಗಿ ಹಣ್ಣಿನ ಬೆಲೆ ಎಷ್ಟು?

ಉ: _____

3. ಹಳ್ಳಿಗೆ ಯಾವಾಗ ಹೋಗಬೇಕು?

ಉ: _____

4. ತಿಂಡಿ ತಿನ್ನುವ ಮೊದಲು ಏನನ್ನು ತೊಳೆದುಕೊಳ್ಳಬೇಕು?

ಉ: _____

IX. ಈ ಕೆಳಗಿನವುಗಳನ್ನು ಹೊಂದಿಸಿ ಬರೆಯಿರಿ.

4X1=4M

ಅ

ಆ

1. ಚುಪುಕೆ ಚುಪುಕೆ - ನಿನಗೆ ಕಲಿಸುವೆ ()

2. ಎತ್ತರ ದನಿಯಲಿ - ಮಕ್ಕಳ ದಿನಾಚರಣೆ ()

3. ನವೆಂಬರ್ ೧೪ - ನೆಗೆದು ಬಾರೆ ()

4. ಮುದ್ದು ಮಾತುಗಳನು - ಹಾಡನು ಹೇಳುವೆನು ()

X. ಈ ಕೆಳಗಿನ ಪ್ರಶ್ನೆಗೆ ಎರಡು ವಾಕ್ಯಗಳಲ್ಲಿ ಉತ್ತರಿಸಿರಿ.

1X2=2M

1. ಪೀಟರ್ ಏನು ಮಾಡಿದನು? ಸಿಹಿತಿಂಡಿ ಯಾರು ಹಂಚಿದರು?

ಉ: _____

XI. ಈ ಕೆಳಗಿನ ಮಾತನ್ನು ಯಾರು-ಯಾರಿಗೆ ಹೇಳಿದರು? ಬರೆಯಿರಿ.

1X2=2M

1. “ಬನ್ನಿ ಚಿಕ್ಕಪ್ಪ ಬನ್ನಿ”

ಈ ಮಾತನ್ನು ಯಾರು ಹೇಳಿದರು?

ಈ ಮಾತನ್ನು ಯಾರಿಗೆ ಹೇಳಿದರು?



Jindal Vidya Mandir,JSW Hill Side Township
Term II Examination (2025-2026)

Set-A

Class: I / Sec _____

Subject: Kannada (III Language)

Name: _____

Invigilator's sign: _____

Max.Marks :30

Duration: 1 Hour

Roll.No: _____

Date: _____

General Instructions : This question paper contains 3 pages 6 main questions.

All questions are compulsory, read carefully and answer.

I. ಈ ಕೆಳಗೆ ಕೊಟ್ಟಿರುವ ಬಿಟ್ಟ ಸ್ಥಳಗಳನ್ನು ಪೂರ್ಣಗೊಳಿಸಿರಿ.

5X1=5

(Fill in the blanks)

	ಆ		ಈ	ಉ		ಮು	ಎ		ಐ		ಓ	ಔ	ಅಂ	ಅಃ
--	---	--	---	---	--	----	---	--	---	--	---	---	----	----

II. ಈ ಕೆಳಗೆ ಕೊಟ್ಟಿರುವ ವ್ಯಂಜನಾಕ್ಷರಗಳನ್ನು ಅನುಕ್ರಮವಾಗಿ ಹೊಂದಿಸಿ ಬರೆಯಿರಿ.

5X1=5

(Write the given consonant letters in the correct order)

1. ಘ, ಗ, ಖ, ಜ, ಕ:

--	--	--	--	--	--

2. ಜ, ಞ, ಛ, ಚ, ಝ:

--	--	--	--	--	--

3. ರ, ಢ, ಣ, ಡ, ಟ:

--	--	--	--	--	--

4. ದ, ನ, ಧ, ಧ, ತ:

--	--	--	--	--	--

5. ಮ, ಪ, ಬ, ಫ, ಭ:

--	--	--	--	--	--

III. ಈ ಕೆಳಗೆ ಕೊಟ್ಟಿರುವ ಅಕ್ಷರಗಳ ಹಿಂದಿನ ಮಧ್ಯದ ಹಾಗೂ ನಂತರದ ಅಕ್ಷರಗಳನ್ನು ಬರೆಯಿರಿ.

5X1=5

(Write before, between and after letters for the letters given below)

1. _____ ರ

2. ರ _____ ವ

3. ಶ _____

4. _____ ಷ

5. ಸ _____ ಳ

IV. ಈ ಕೆಳಗೆ ಕೊಟ್ಟಿರುವ ಚಿತ್ರಗಳನ್ನು ಎಣಿಸಿ, ಅಂಕಿಗಳನ್ನು ಕನ್ನಡದಲ್ಲಿ ಬರೆಯಿರಿ.
(Count the pictures given below and write the numbers in Kannada)

5X1=5


1.



2.



3.



4.



5.



V. ಈ ಕೆಳಗಿನ ಕೋಷ್ಟಕದಲ್ಲಿರುವ ಅಕ್ಷರಗಳ ಸಹಾಯದಿಂದ ಐದು ಪದಗಳನ್ನು ಗುರುತಿಸಿ ಬರೆಯಿರಿ. 5X1=5
(Extract five words from the given word Search)

ಜ	ನ	ಮ	ಕ	ರ
ಲ	ಗ	ರ	ದ	ಸ
ಮ	ಧ	ವ	ಶ	ರ
ಗ	ಜ	ನ	ಯ	ನ
ಜ	ಅ	ಳ	ಆ	ಲ

1. _____

2. _____

3. _____

4. _____

5. _____

VI. ಈ ಕೆಳಗೆ ಕೊಟ್ಟಿರುವ ಚಿತ್ರಗಳ ಹೆಸರನ್ನು, ಅವರಣದಲ್ಲಿ ಕೊಟ್ಟಿರುವ ಹೆಸರುಗಳ ಸಹಾಯದಿಂದ ಬರೆಯಿರಿ.

5X1=5

(Write the names of the pictures given below with the help of given name box)

(ಕಮಲ, ಶರ, ಗಣಪ, ಚಮಚ, ರಸ)


1.




2.




3.



4.



5.



11





Jindal Vidya Mandir, JSW Hill Side Township
Term – II Examination (2025-26)

Class/Sec: I/ _____

Duration :1 Hour

Sub: Hindi (III Language)

Max Marks: 30M

Name : _____

Roll No. : _____

Date : _____

SET-A

Invigilator's Sign. : _____

General Instructions:

- सभी प्रश्न अनिवार्य हैं।
- कुल 6 प्रश्न हैं।

प्रश्न 1) खाली स्थान भरो:

(5X1M=5M)



(Fill in the blanks)

- त, थ, -----, -----, न
- क्ष, त्र, -----, श्र
- य, -----, ल, -----

प्रश्न 2) चित्रों को गिनकर उनकी संख्या हिंदी में लिखिए।

(5X1M=5M)




	
	

प्रश्न 3) दिए गए चित्रों को उनके नाम के पहले अक्षर से मिलाइए।

(5X1M=5M)

(Match the given pictures with the first letter of their names.)

i.



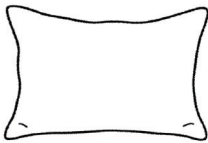
त

ii.




ब

iii.



द

iv.



श

v.








र

प्रश्न 4) दिए गए चित्रों को उनके सही शब्दों से मिलाइए।

(5X1M=5M)

(Match the given pictures with their correct words.)

i.		महल
ii.		फल
iii.		कमल
iv.		बस
v.		अजगर

प्रश्न 5) दिए गए अक्षरों को जोड़कर सही शब्द बनाइए।

(6X1M=6M)

(Join the given letters to make a correct word.)

- i. न + भ = _____
- ii. स + ब = _____
- iii. भ + ग + त = _____
- iv. श + ह + द = _____

v. ब + र + ग + द = -----

vi. श + ल + ग + म = -----

प्रश्न 6) दिए गए अक्षरों के अनुसार चित्र बनाइए और उनमें रंग भरिए।

(2X2M=4M)

(Draw pictures for the given letters and color them)

प	म

02/03/2026



Jindal Vidya Mandir, JSW Hill Side Township

Term-II Examination (2025-26)

Set B

Class I/Sec: _____

Duration: 2Hrs

Subject: Mathematics

Max Marks: 40

Name: _____

Roll No: _____

Invigilator's signature: _____

Date: _____

General Instructions:

i) This question paper contains 6 main questions in 5 pages.

ii) All questions are compulsory.

Section A

I. Choose the correct answer.

7X1M=7M

1) The numeral for Eighty eight is = _____

- A) 80 B) 88 C) 18 D) 81

2) Subtract the given number names: Ninety nine - four = _____.

- A) Ninety nine B) Eighty five C) Ninety five D) Eighty

3) The number sentence 5×4 can be read as _____.

- A) 4 times 5 B) 3 times 4 C) 5 times 4 D) 4 times 4

4) The last month of the year is _____.

- A) February B) January C) December D) March

5) The currency of India is called _____.

- A) Money B) Rupee C) Buying D) Shopping

6) The long hand in the clock shows the _____.

- A) clock B) time C) minutes D) hours

7) The greatest 2-digit number is _____.

- A) 10 B) 11 C) 90 D) 99

II. Fill in the blanks.**8X1M=8M**

- 1) We eat dinner in the_____.
- 2) 8 tens 4 ones + 4 ones_____.
- 3) The repeated addition sentence for 2×9 is_____.
- 4) The number name for 77 is _____.
- 5) Which body part can you use to measure the blackboard? _____.
- 6) Write the correct word for the given scrambled word. NYTIEN - _____.
- 7) The number that comes just after 89 is _____.
- 8) Tuesday comes just before _____.

III. Match the following.**5X1M=5M**

	Column A		Column B	Answer
1.	$4 + 4 + 4 + 4$	a.	Afternoon	[]
2.	Lunch	b.	Zero	[]
3.	12 months	c.	4×4	[]
4.	15 less than 15 is	d.	₹25	[]
5.	5 coins of ₹ 5 is	e.	In a year	[]

Section B**IV. Do as directed.****5X2M =10M**

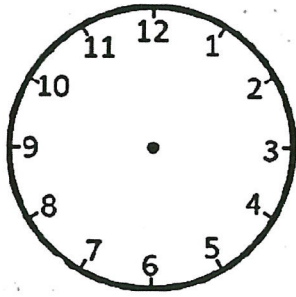
1. Subtract by counting backwards.

$$99 - 3 = \square$$

Start from and count backwards

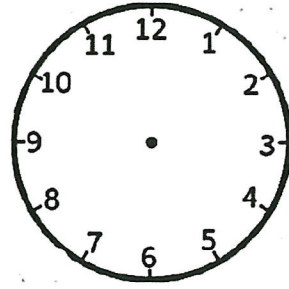
2. Draw the clock hands to represent your daily routine time and write the corresponding time in the given blank.

a.



I go to play at _____

b.



I go to school at _____

3. Arrange the numbers in increasing order.

a. 98 19 4 67 32

b. 88 47 56 16 79

4. Add or subtract as required.

a. T O

8 8

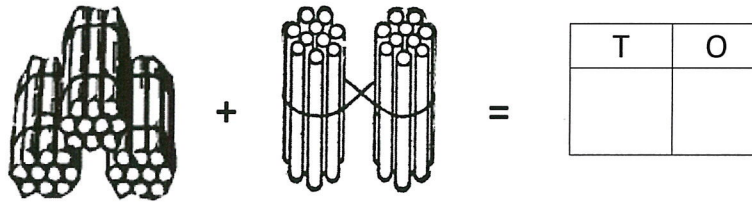
- 4 0

b. T O

6 0

+ 2 5

5. Add the given bundles of tens and ones. Write the number and its number name.



Number name - _____

Section C

V. Answer the following.

2X3M=6M

1. Rani picked 53 mangoes and Vani picked 46 mangoes. How many mangoes did they pick in all?

	T	O

2. There were 75 juice packs. 44 packs were distributed among children. How many packs were left?

	T	O

VI. Answer the following.

1X4M=4M

Sort, count and write the number of insects of each type.



Insects	Honey bee	Lady bug	Spider	Ant
Number				

- a) How many more ants are there than lady bugs? _____
- b) How many lady bugs are there? _____
- c) How many honey bees are there? _____
- d) How many spiders are there? _____
- e) Which insect has the maximum count? _____
- f) How many insects are there in all? _____

5/3/25



**Jindal Vidya Mandir, JSW Hill Side Township
Term-II Examination (2025-26)**

Set- B

Class: I/ Sec: _____

Max Marks: 40

Sub: EVS

Duration: 2 Hrs

Name: _____

Roll No: _____

Invigilator's Signature: _____

Date: _____

General Instructions:

- This question paper contains in 4 pages and 33 questions.
- It consists of two sections A and B. Section A is objective type questions and section B is subjective type questions.
- All the questions are compulsory.

Section-A

I. Choose the correct word from the box to fill in the blanks.

5X1=5M

cardinal sun covered shape sloping

1. Houses in rainy places have a _____ roof.
2. Air gives _____ to things.
3. We should drink only _____ water.
4. The Earth gets light and heat from the _____.
5. North, south, east and west are the four _____ directions.

Section-B

V. Answer the following questions in two sentences.

4X2=8M

21. What is communication?

22. Why is the Earth called the 'Blue Planet'?

23. What does a house protect us from?

24. How can we travel to far off places?

VI. Identify the weather of the day.

2X1=2M

25. Neha is wearing a raincoat: _____

26. Leaves on the trees are moving rapidly: _____

VII. Give any two examples for each of the following.

6X1=6M

27. Vehicles that move on water- _____, _____

28. Rooms of a house - _____, _____

29. Flesh eating animals- _____, _____

30. Dairy product- _____, _____

31. Means of communication- _____, _____

32. Woollen clothes- _____, _____

33. Draw, name and colour any two things use to stay dry in rainy day.2X2= 4M

<hr/>	<hr/>
-------	-------

25/02/25



Jindal Vidya Mandir, JSW Hill Side Township

Term-II Examination: (2025-26)

SET-B

Class I/Sec: _____

Max Marks: 30

Subject: Information Technology

Duration: 1Hr

Name: _____

Roll No: _____

Invigilator's signature: _____

Date: _____

General Instructions:

i) This question paper contains 6 main questions in 3 pages.

ii) All questions are compulsory.

I. Choose the correct answer.

6X1M=6M

Stamp	scroll	left click	spacebar key	point	number
-------	--------	------------	--------------	-------	--------

- 1) The longest key on the keyboard is _____.
- 2) The keys with numbers written on them are called as _____ keys.
- 3) A mouse is used to _____ at things on the screen.
- 4) Pressing and releasing the _____ button twice quickly is called double-click.
- 5) The wheel in the center of the mouse is called _____ wheel.
- 6) _____ are ready made pictures that you can use in your drawing.

II. State whether given statements are True or False.

7X1M=7M

- 1) The Delete key erases anything typed to the left of the cursor.
- 2) Special keys can be used to play games on a computer.
- 3) A mouse can move the pointer on the screen.
- 4) We can save a picture to open and use it anytime.
- 5) Mouse should not be placed on the mouse pad.
- 6) The Lines tool is used to draw straight lines.
- 7) Click the Quit button to save your drawing.

III. Match the following.

5X1M=5M

Column A	Column B	Answers
1. Shapes	a. It is used to erase a part of the drawing.	[]
2. Eraser	b. It has 104 keys	[]
3. CPU	c. Wire connected to the CPU Box	[]
4. The Mouse	d. It is used to draw a filled oval.	[]
5. Keyboard	e. It's a brain of a computer.	[]

IV. Answer the questions.

4X1M=4M

1) What are keys?

2) What is a mouse pad?

3) What is a drawing canvas?

4) Name the parts of the computer mouse.

V. Identify and match the given icons with their functions.

5X1M=5M



To draw geometric basic shapes

Extra effects to a picture

To draw lines


To write text matter

To paint the pictures

VI. Colour the keyboard according to the given colour codes.

3X1M=3M

Spacebar key – Green Enter key – Purple Caps lock key – Pink
Delete key – Blue Backspace key – Orange Arrow keys - Brown



26/2/26



Jindal Vidya Mandir, JSW Hill Side Township

Term-II Examination(2025-26)

Class :I/Sec : _____

Set-A

Duration: 1 Hour

Subject : General Knowledge

Max. Marks : 30

Name : _____

Roll No.: _____

Invigilator's sign : _____

Date : _____

General Instructions:

- This paper consists of 3 pages and 8 main questions.
- All the questions are compulsory.

I. Answer these riddles by using the help box.

4X1=4

(A Clock, In a dictionary, A piano, The river bank)

1. In which bank would you never find any money?

A: _____

2. Who has many keys but can never open any doors?

A : _____

3. What has a face and hands but not the rest of the body?

A: _____

4. Where you find Friday before Thursday?

A: _____

II. Match the followings.

5X1=5



A

B

- | | | |
|-------------|------------|-----|
| 1. Bees | a. Hiss | () |
| 2. Frogs | b. Trumpet | () |
| 3. Snakes | c. Caw | () |
| 4. Crows | d. Buzz | () |
| 5. Elephant | e. Croak | () |

III. What are the emergency numbers to call for these vehicles.

3X1=3




IV. Write T for true and F for false.

6X1=6


1. We should brush our teeth twice a day. ()
2. Eating junk food every day makes us strong. ()
3. Playing outside gives us fresh air. ()
4. Washing hands before eating keeps us healthy. ()
5. Pushing your friends on the ground is a good habit. ()
6. Playing game makes us more friends. ()

V. Unscramble the letters and write the correct names of sports.

3X1=3



(XOBIGN) _____



(RCKICET) _____




(WSIMMIGN) _____

VI. Identify these pictures and name them using the help box.

3X1=3

School Ahead, No Entry, Steep Ascent



2.



3.



VII. Circle the odd one out in these sets of words.

3X1=3

1. Pant, Shirt, Shoes, Frock
2. Apple, Potato, Pineapple, pomegranate
3. Cauliflower, Rose, Sunflower, Lotus

VIII. Answer these following questions.

3X1=3

1. How many months in a year have 30 days?

A: _____

2. Which is the seventh month in the calendar?

A: _____

3. Write the names of months which start with the letter 'A'

A: _____

23/2/25



Jindal Vidya Mandir, JSW Hill Side Township
Term-II Examination (2025-2026)

Class/Sec: I __

SET- B

Max. Marks: 30

Subject: Music

Duration: 1 Hour

Student's Name: _____

Roll no: _____

Invigilator's Sign: _____

Date: _____

General Instructions:

- ❖ This question paper consists of 4 pages and has 6 main questions.
 - ❖ All questions are compulsory.
-

I. Choose the correct options and complete the sentences. 10×1M =10M

1. Om tatsat sri _____.

a) purushottam b) narayana tu c) atmalinga tu d) savita pavakatu

2. Which swara comes first? _____.

a) ma b) re c) sa d) ga

3. Which note comes after 'Sa' in Indian music? _____.

a) pa b) re c) ga d) ma

4. What do we use to listen to music? _____

a) eyes b) nose c) ears d) hands

5. We play the harmonium with our _____

a) hands b) feet c) sticks d) spoon

6. Who sings song? _____

A) painter b) singer c) dancer d) actor

7. How many swaras are there in Indian classical music? _____

- a)6 b)7 c)9 d)10

8. Which instrument is big and has many black and white keys? _____

- a) guitar b) piano c) flute d) violin

9. What is the shape of a tabla? _____

- a) round b) square c) star d) triangle

10. Which of the following instrument has strings? _____

- a) tabala b) piano c) flute d) sitar

II. Complete the song by filling in the blanks with the correct words from the help box. 5×1M =5M

afraid, heart, overcome, peace, walk

We shall _____ someday.

Oh, deep in my _____,

We'll _____ hand in hand.

We shall leave in _____

We are not _____.

III. Write True or False. 3×1M =3M

1. Clapping hands can play music. _____
2. We play guitar with sticks. _____
3. A piano is blown with the mouth _____

IV. Fill in the missing letters and complete the musical words. 2×1M =2M

1. S__ U __D

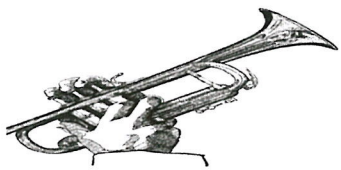
2. D__ U__


V. Look at the picture and choose the correct name from the help box. Write the answer in the blank. 5x1M=5M

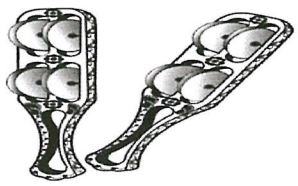
Kanjira, Violin, Harmonium, Trumpet, Hand-Kartal











V. Draw a flute instrument and color it.

5x1M =5M



Jindal Vidya Mandir, JSW Hill Side Township
Term II Examination (2025-2026)

Set-A

Class: I / Sec _____

Subject: Yoga

Name: _____

Invigilator's sign: _____

Max.Marks :30

Duration: 1 Hour

Roll.No _____

Date: _____

General Instuctions:

- This paper contains 6 mains 3 pages.
- All questions are compulsory. Read the instructions carefully and answer.

I. Choose the correct answer for the questions given below.

5X1=5

1. What is another name for Surya Namaskar?

- | | |
|--------------------|---------------------|
| a. Moon Salutation | b. Sun Salutation |
| c. Star Salutation | d. Cloud Salutation |

2. What hygiene do we call keeping our nails clean?

- | | |
|-------------------------|---------------------|
| a. Professional hygiene | b. Personal hygiene |
| c. Outer hygiene | d. Not hygiene |

3. What does Saucha mean?

- | | |
|--------------|----------------|
| a. Sadness | b. Cleanliness |
| c. Happiness | d. Brightness |

4. What Satya mean?

- | | |
|------------|------------------|
| a. Help | b. Study |
| c. Reading | d. Telling truth |

5. How should we take care of nature?

- | | |
|------------------|---------------------|
| a. Cutting tree | b. Wasting water |
| c. Using plastic | d. By not littering |

II. State 'T' for true and 'F' for false statement.

5X1=5

1. Surya namaskara has many yoga poses. ()
2. Brushing teeth is an example of personal hygiene. ()
3. Keeping our desk not tidy help us to focus on our work. ()
4. Yama in yoga is like having five special rules for being good. ()
5. We should not wear clean cloths everyday. ()

III. Fill in the blanks with the options given in the help box.

5X1=5

(inside , happy , polite , Sanskrit , truthful)

1. Ahimsa is _____ word.
2. Using _____ and respectful words when we talk to others shows inner cleanliness.
3. Saucha mean clean _____ and outside.
4. Being _____ helps you be a good friend.
5. Santosha means being _____ with what we have.

IV. Circle the odd one out.

5X1=5

1. brushing teeth, washing hands , being honest , wearing clean cloths.
2. Ronak , Sara , Lily , Kushal.
3. Asteya , satya, dancing , ahimsa.
4. singing, kind words , polite , honest.
5. water , tummy , lungs , heart.

V. Match the followings.

5X1=5

A

B

- | | | |
|---------------------|----------------------|--------|
| 1. Less worried | a. inner cleanliness | () |
| 2. Good thoughts | b. outer cleanliness | () |
| 3. Wear clean dress | c. relax | () |
| 4. Ahimsa | d. being clean | () |
| 5. Saucha | e. no hurting | () |

VI. Unscramble the letters and frame meaningful words.

5X1=5

1. UHACAS - _____
2. AAYM - _____
3. TASYA - _____
4. YNIAAM- _____
5. HMASIA- _____



JINDAL VIDYA MANDIR, JSW HILL SIDE TOWNSHIP
Term – II Examination (2025-26)

Class : I ____

Set – B

Roll No. ____

Date : _____

Subject : Art

Name : _____

Max Marks : 50

Invigilator's Sign _____

Duration : 1 Hour

Theme : Teddy bear (with Math)

- | | |
|---|--|
| 1. Drawing Skills (10 Marks) | 2. Creativity & Originality (10 Marks) |
| 3. Coloring / Shading / Painting (10 Marks) | 4. Composition & Layout (10 Marks) |
| 5. Neatness & Presentation (5 Marks) | 6. Theme Relevance (5 Marks) |

Look at the Picture given below, fill the color.

$5-3 = \text{Red}$

$2+3 = \text{Brown}$

$3+6 = \text{Sky Blue}$

$8-4 = \text{Yellow}$

$7+1 = \text{Black}$

$3-0 = \text{Orange}$

$4+3 = \text{Blue}$

$9-3 = \text{Light Green}$

